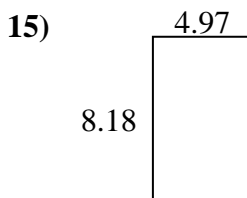
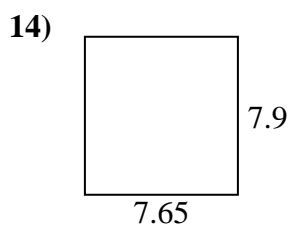
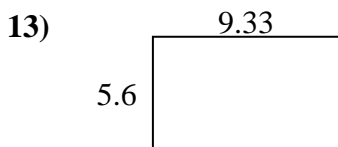
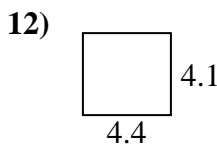
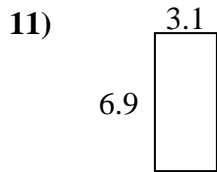
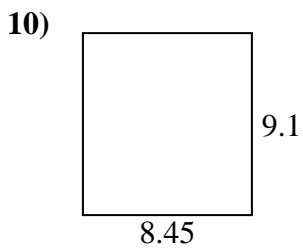
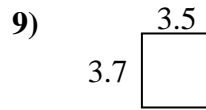
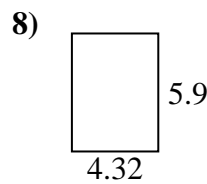
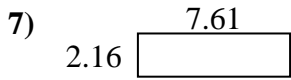
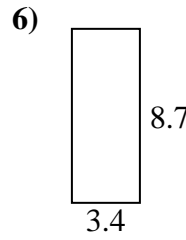
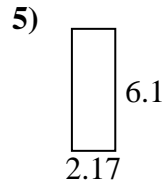
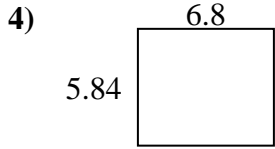
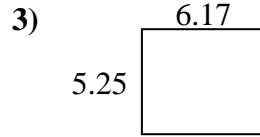
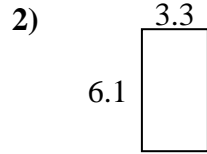
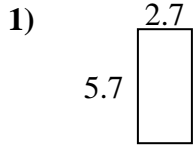




Find the perimeter and area of each figure. Each figure is in centimeters (cm). Not to scale.

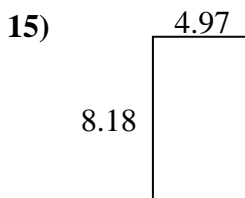
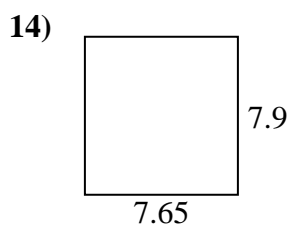
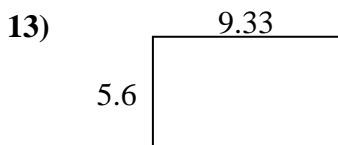
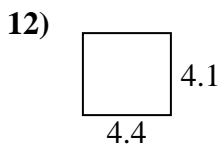
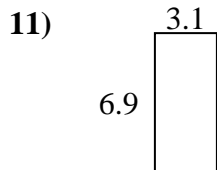
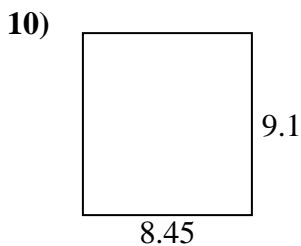
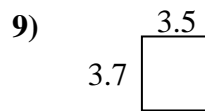
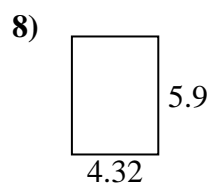
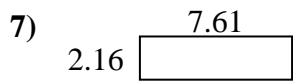
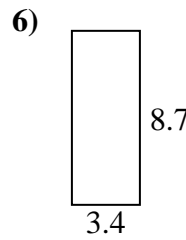
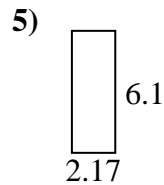
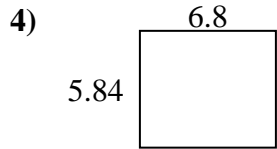
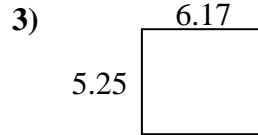
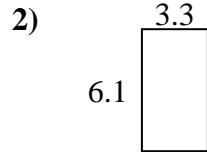
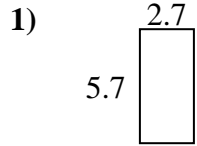
Answers



1. \_\_\_\_\_
2. \_\_\_\_\_
3. \_\_\_\_\_
4. \_\_\_\_\_
5. \_\_\_\_\_
6. \_\_\_\_\_
7. \_\_\_\_\_
8. \_\_\_\_\_
9. \_\_\_\_\_
10. \_\_\_\_\_
11. \_\_\_\_\_
12. \_\_\_\_\_
13. \_\_\_\_\_
14. \_\_\_\_\_
15. \_\_\_\_\_



Find the perimeter and area of each figure. Each figure is in centimeters (cm). Not to scale.



Answers

1. 16.8 cm    15.39 cm<sup>2</sup>
2. 18.8 cm    20.13 cm<sup>2</sup>
3. 22.84 cm    32.3925 cm<sup>2</sup>
4. 25.28 cm    39.712 cm<sup>2</sup>
5. 16.54 cm    13.237 cm<sup>2</sup>
6. 24.2 cm    29.58 cm<sup>2</sup>
7. 19.54 cm    16.4376 cm<sup>2</sup>
8. 20.44 cm    25.488 cm<sup>2</sup>
9. 14.4 cm    12.95 cm<sup>2</sup>
10. 35.1 cm    76.895 cm<sup>2</sup>
11. 20 cm    21.39 cm<sup>2</sup>
12. 17 cm    18.04 cm<sup>2</sup>
13. 29.86 cm    52.248 cm<sup>2</sup>
14. 31.1 cm    60.435 cm<sup>2</sup>
15. 26.3 cm    40.6546 cm<sup>2</sup>