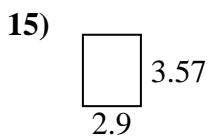
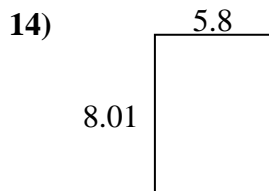
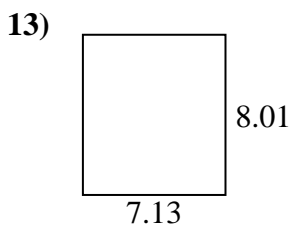
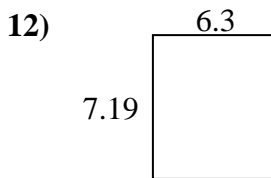
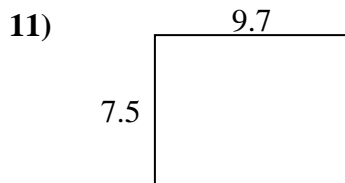
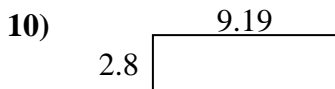
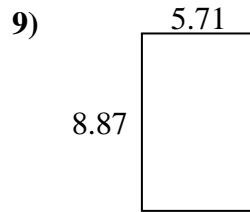
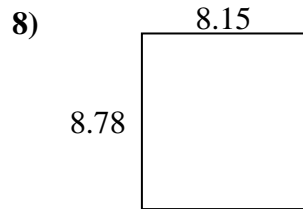
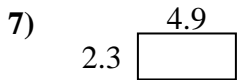

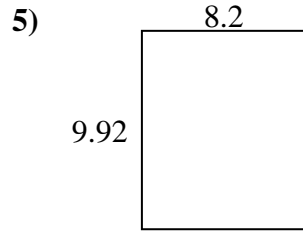
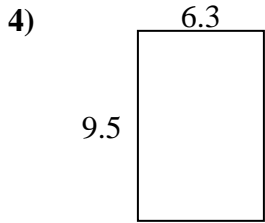
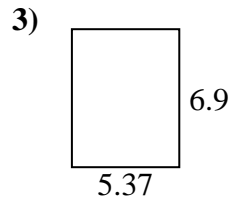
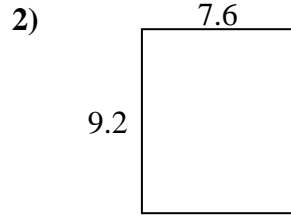




Find the perimeter and area of each figure. Each figure is in centimeters (cm). Not to scale.

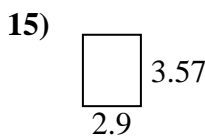
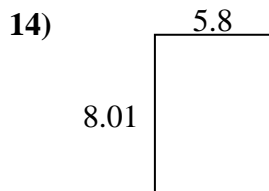
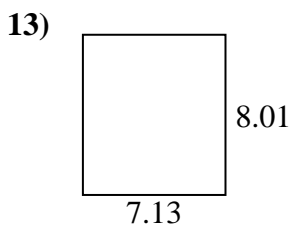
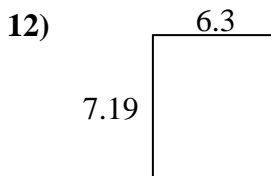
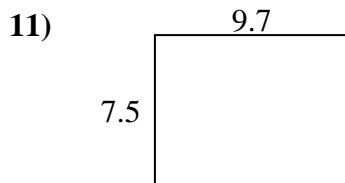
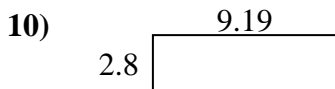
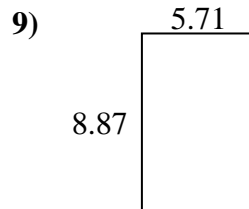
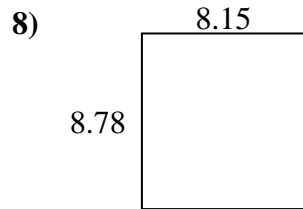
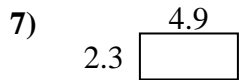

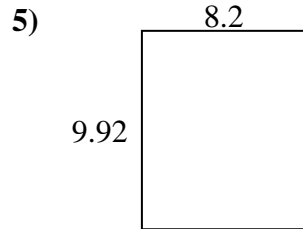
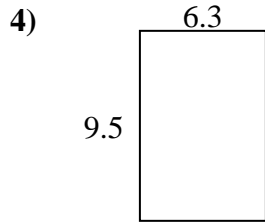
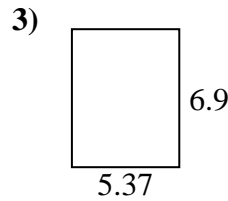
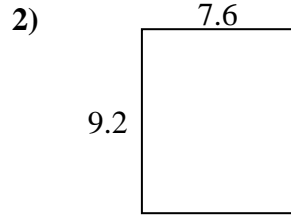
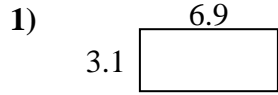
Answers



1. _____
2. _____
3. _____
4. _____
5. _____
6. _____
7. _____
8. _____
9. _____
10. _____
11. _____
12. _____
13. _____
14. _____
15. _____



Find the perimeter and area of each figure. Each figure is in centimeters (cm). Not to scale.



Answers

1. 20 cm 21.39 cm²
2. 33.6 cm 69.92 cm²
3. 24.54 cm 37.053 cm²
4. 31.6 cm 59.85 cm²
5. 36.24 cm 81.344 cm²
6. 11.02 cm 7.2594 cm²
7. 14.4 cm 11.27 cm²
8. 33.86 cm 71.557 cm²
9. 29.16 cm 50.6477 cm²
10. 23.98 cm 25.732 cm²
11. 34.4 cm 72.75 cm²
12. 26.98 cm 45.297 cm²
13. 30.28 cm 57.1113 cm²
14. 27.62 cm 46.458 cm²
15. 12.94 cm 10.353 cm²