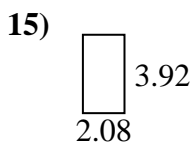
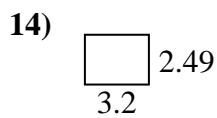
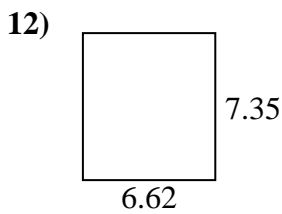
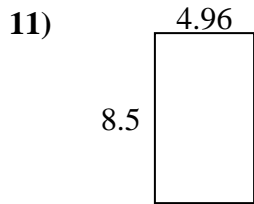
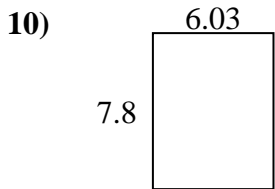
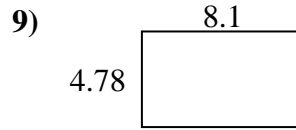
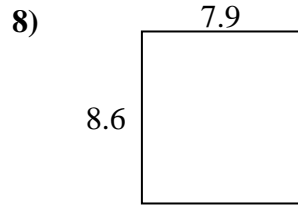
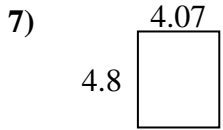
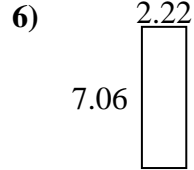
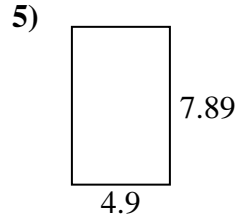
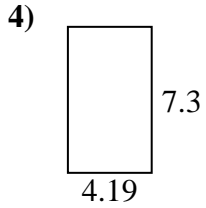
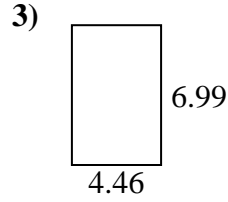
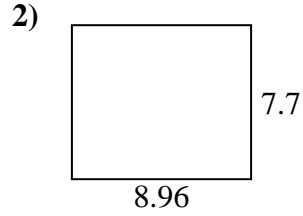
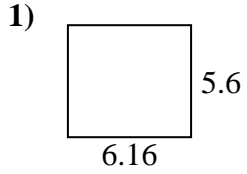




Find the perimeter and area of each figure. Each figure is in centimeters (cm). Not to scale.

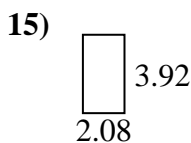
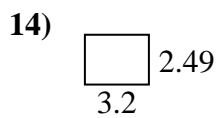
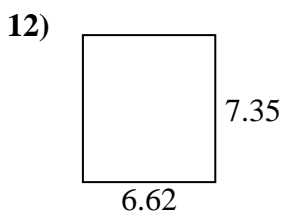
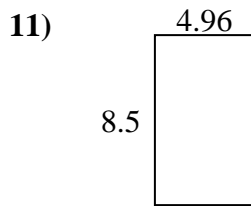
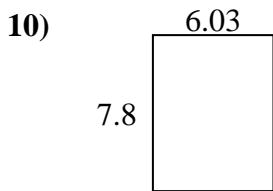
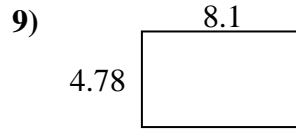
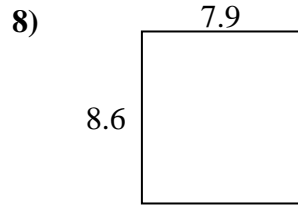
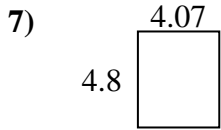
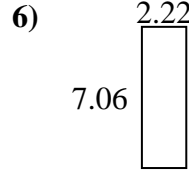
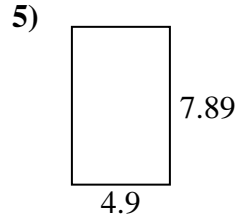
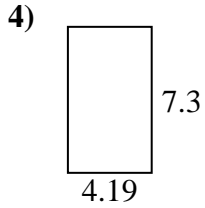
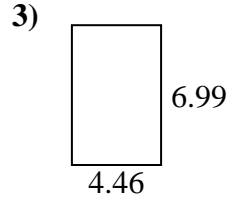
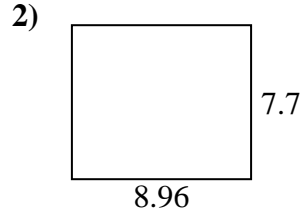
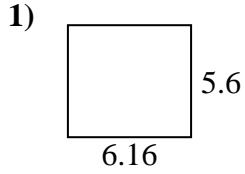
Answers



1. _____
2. _____
3. _____
4. _____
5. _____
6. _____
7. _____
8. _____
9. _____
10. _____
11. _____
12. _____
13. _____
14. _____
15. _____



Find the perimeter and area of each figure. Each figure is in centimeters (cm). Not to scale.



Answers

1. 23.52 cm 34.496 cm²
2. 33.32 cm 68.992 cm²
3. 22.9 cm 31.1754 cm²
4. 22.98 cm 30.587 cm²
5. 25.58 cm 38.661 cm²
6. 18.56 cm 15.6732 cm²
7. 17.74 cm 19.536 cm²
8. 33 cm 67.94 cm²
9. 25.76 cm 38.718 cm²
10. 27.66 cm 47.034 cm²
11. 26.92 cm 42.16 cm²
12. 27.94 cm 48.657 cm²
13. 16.62 cm 16.835 cm²
14. 11.38 cm 7.968 cm²
15. 12 cm 8.1536 cm²