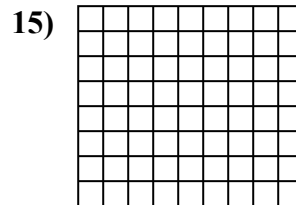

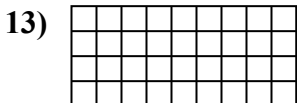
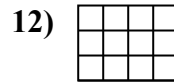
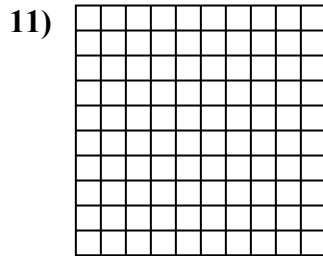
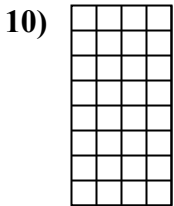
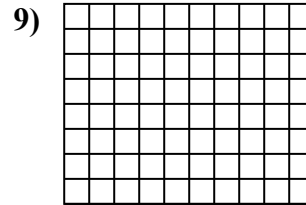
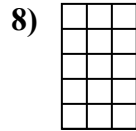
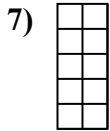
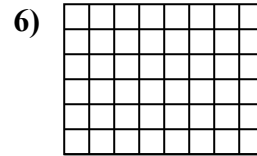
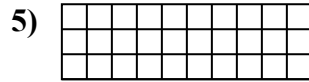
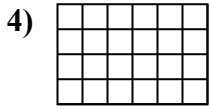
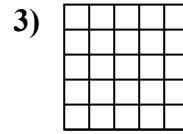
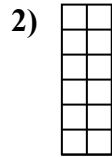
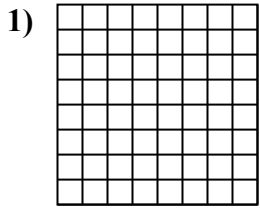




Determine the area. Each $\square = 1$ square unit (u^2).

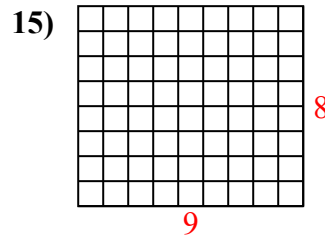
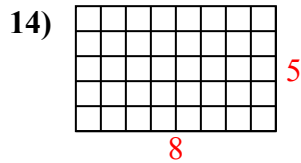
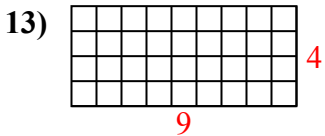
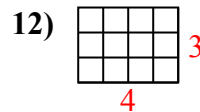
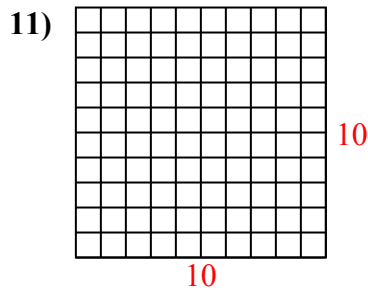
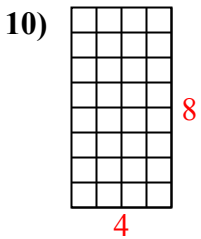
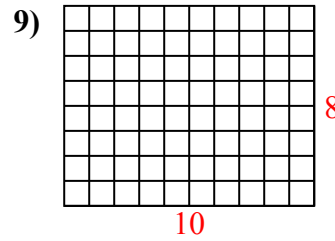
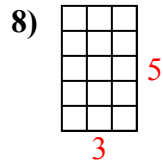
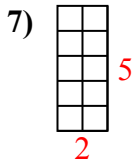
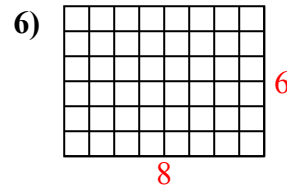
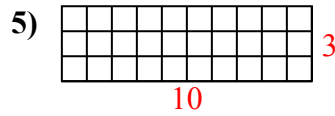
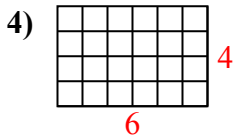
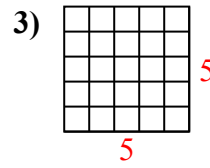
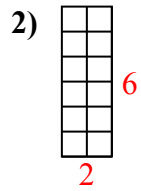
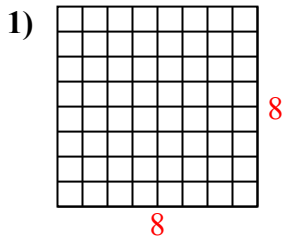


Answers

1. _____
2. _____
3. _____
4. _____
5. _____
6. _____
7. _____
8. _____
9. _____
10. _____
11. _____
12. _____
13. _____
14. _____
15. _____



Determine the area. Each $\square = 1$ square unit (u^2).



Answers

1. 64 u^2

2. 12 u^2

3. 25 u^2

4. 24 u^2

5. 30 u^2

6. 48 u^2

7. 10 u^2

8. 15 u^2

9. 80 u^2

10. 32 u^2

11. 100 u^2

12. 12 u^2

13. 36 u^2

14. 40 u^2

15. 72 u^2