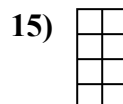
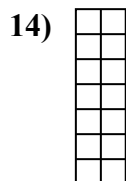

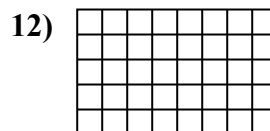
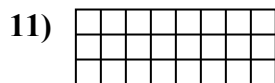
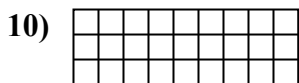
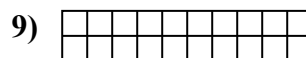

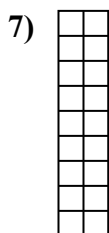
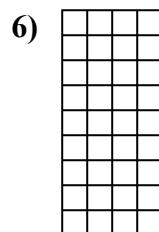
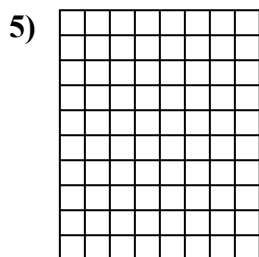
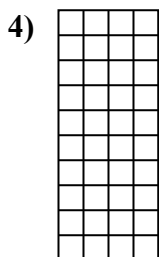
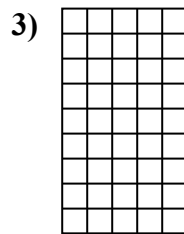
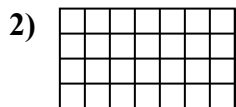
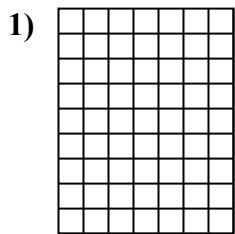




Determine the area. Each $\square = 1$ square unit (u^2).

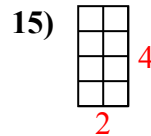
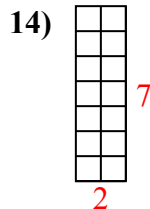
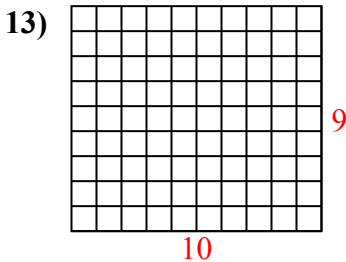
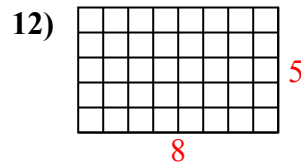
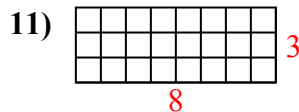
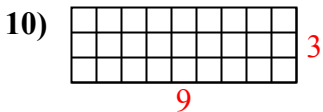
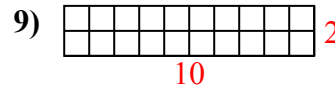
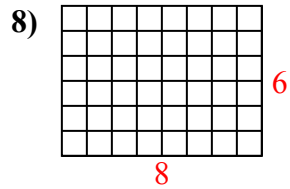
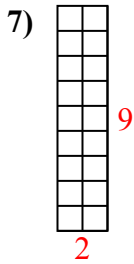
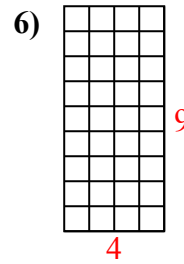
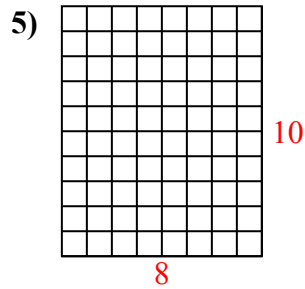
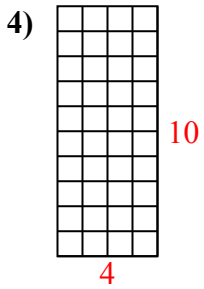
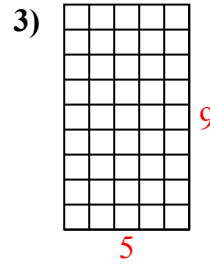
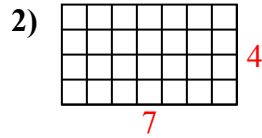
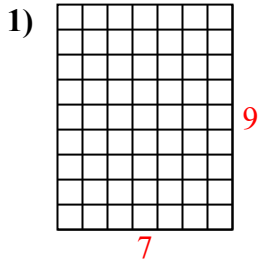


Answers

1. _____
2. _____
3. _____
4. _____
5. _____
6. _____
7. _____
8. _____
9. _____
10. _____
11. _____
12. _____
13. _____
14. _____
15. _____



Determine the area. Each $\square = 1$ square unit (u^2).



Answers

1. 63 u^2

2. 28 u^2

3. 45 u^2

4. 40 u^2

5. 80 u^2

6. 36 u^2

7. 18 u^2

8. 48 u^2

9. 20 u^2

10. 27 u^2

11. 24 u^2

12. 40 u^2

13. 90 u^2

14. 14 u^2

15. 8 u^2