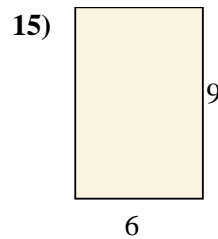
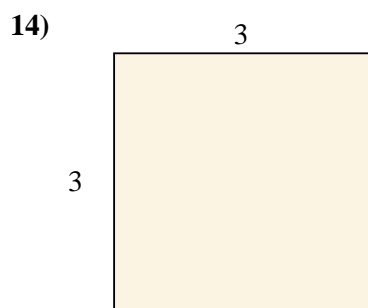
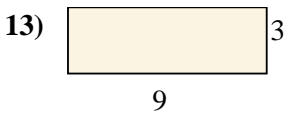
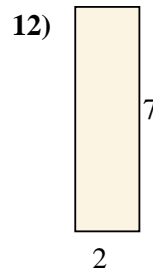
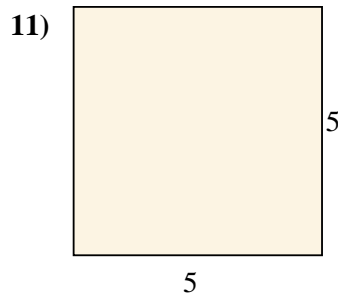
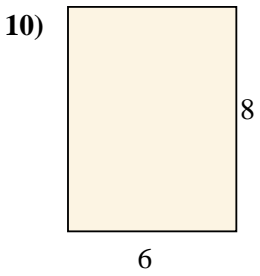
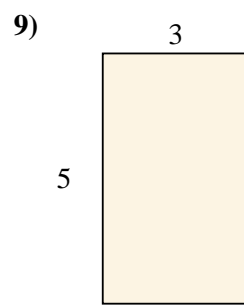
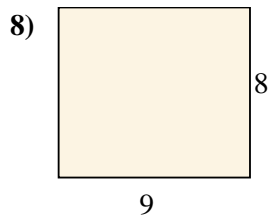
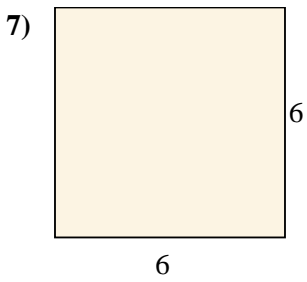
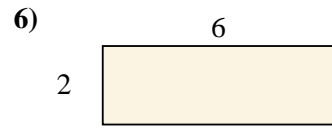
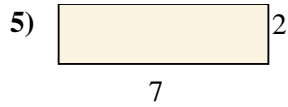
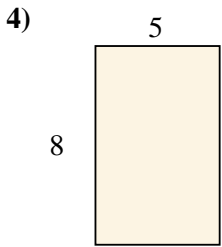
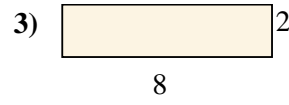
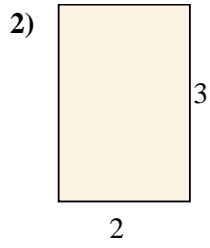
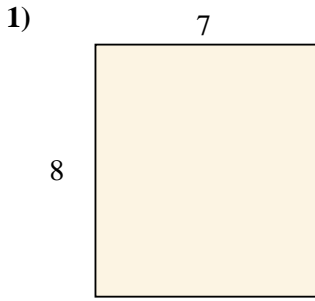




Find the area (in cm) of the rectangles shown.

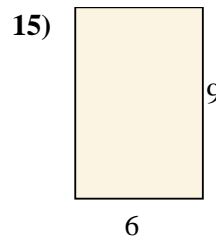
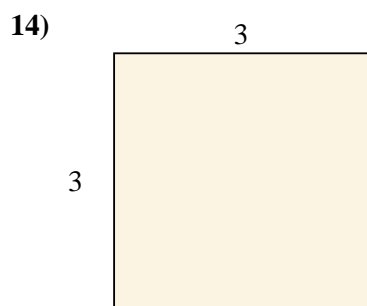
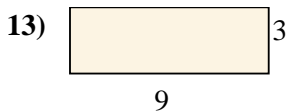

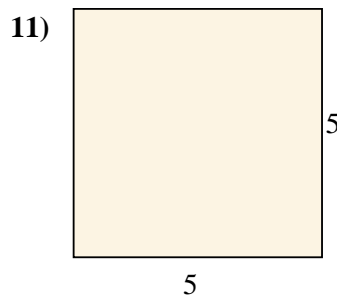
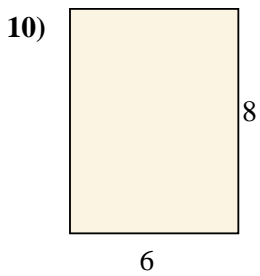
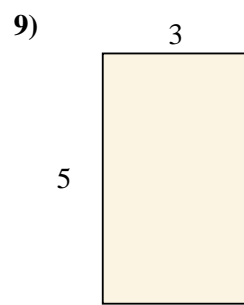
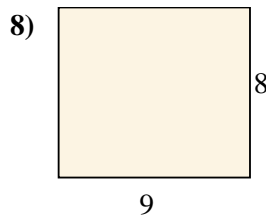
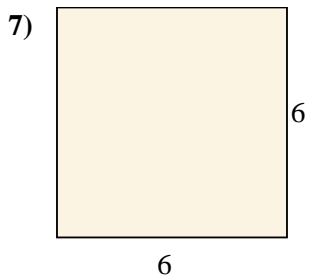
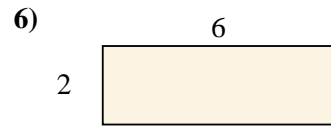
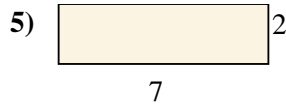
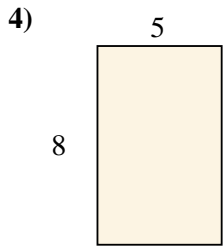
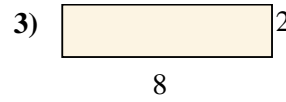
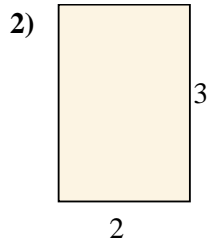
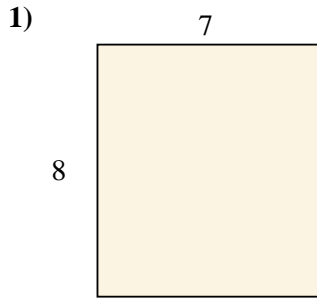


**Answers**

1. \_\_\_\_\_
2. \_\_\_\_\_
3. \_\_\_\_\_
4. \_\_\_\_\_
5. \_\_\_\_\_
6. \_\_\_\_\_
7. \_\_\_\_\_
8. \_\_\_\_\_
9. \_\_\_\_\_
10. \_\_\_\_\_
11. \_\_\_\_\_
12. \_\_\_\_\_
13. \_\_\_\_\_
14. \_\_\_\_\_
15. \_\_\_\_\_



Find the area (in cm) of the rectangles shown.



Answers

1. 56 cm<sup>2</sup>

2. 6 cm<sup>2</sup>

3. 16 cm<sup>2</sup>

4. 40 cm<sup>2</sup>

5. 14 cm<sup>2</sup>

6. 12 cm<sup>2</sup>

7. 36 cm<sup>2</sup>

8. 72 cm<sup>2</sup>

9. 15 cm<sup>2</sup>

10. 48 cm<sup>2</sup>

11. 25 cm<sup>2</sup>

12. 14 cm<sup>2</sup>

13. 27 cm<sup>2</sup>

14. 9 cm<sup>2</sup>

15. 54 cm<sup>2</sup>