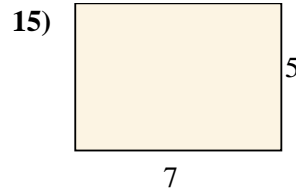
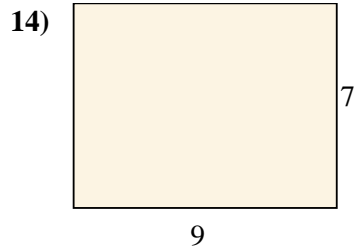
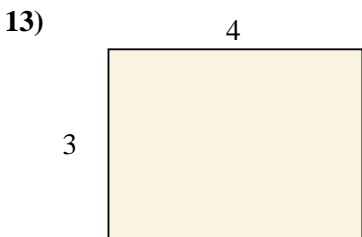
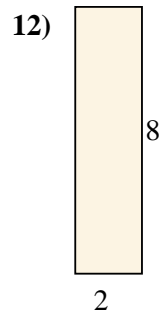
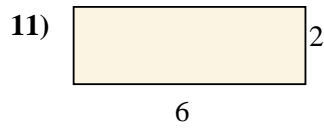
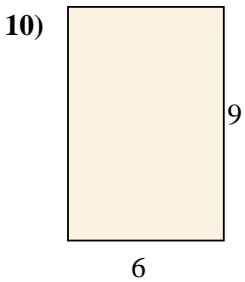

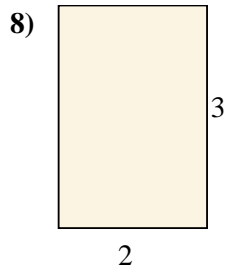
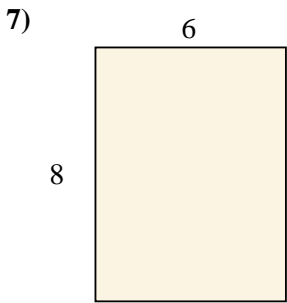
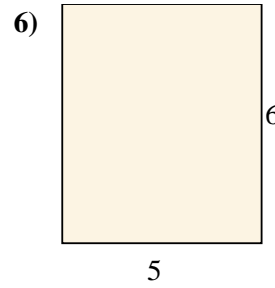
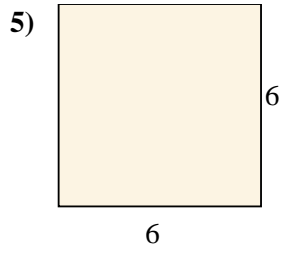
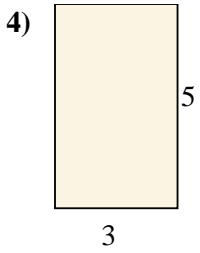
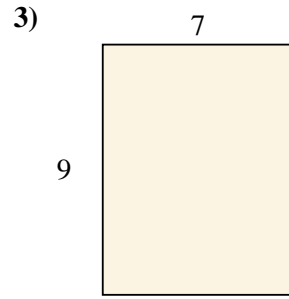
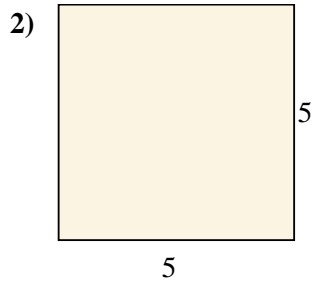
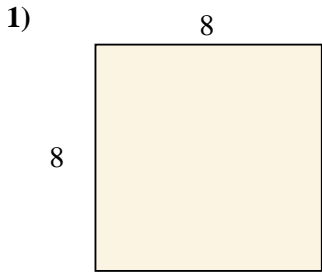




Find the area (in cm) of the rectangles shown.



Answers

1. \_\_\_\_\_

2. \_\_\_\_\_

3. \_\_\_\_\_

4. \_\_\_\_\_

5. \_\_\_\_\_

6. \_\_\_\_\_

7. \_\_\_\_\_

8. \_\_\_\_\_

9. \_\_\_\_\_

10. \_\_\_\_\_

11. \_\_\_\_\_

12. \_\_\_\_\_

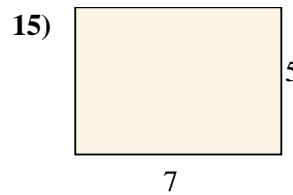
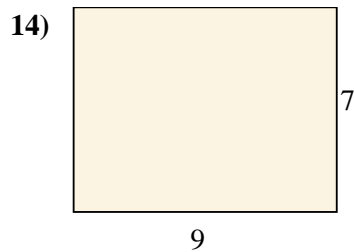
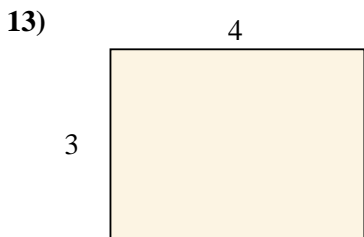

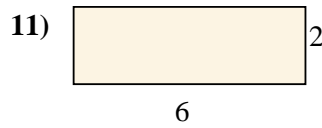
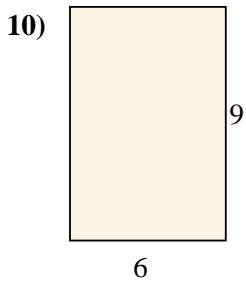

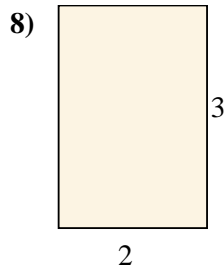
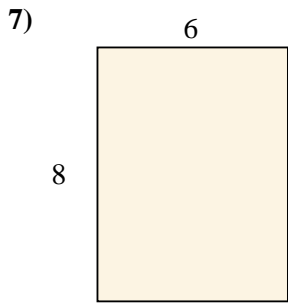
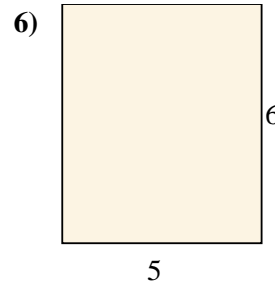
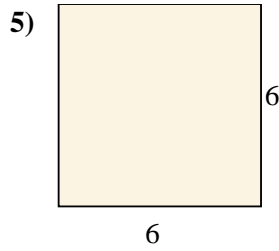
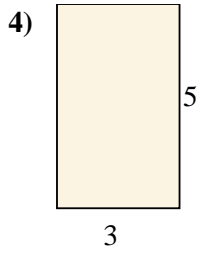
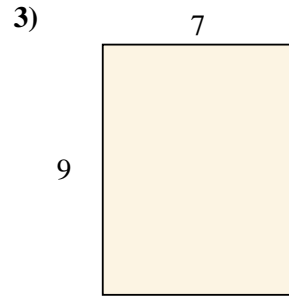
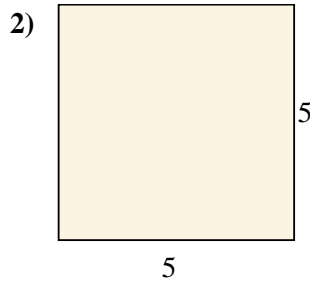
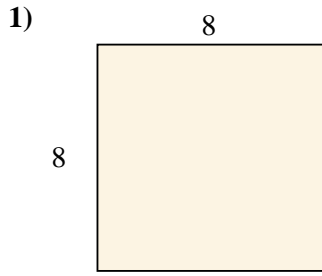
13. \_\_\_\_\_

14. \_\_\_\_\_

15. \_\_\_\_\_



Find the area (in cm) of the rectangles shown.



Answers

1. 64 cm<sup>2</sup>

2. 25 cm<sup>2</sup>

3. 63 cm<sup>2</sup>

4. 15 cm<sup>2</sup>

5. 36 cm<sup>2</sup>

6. 30 cm<sup>2</sup>

7. 48 cm<sup>2</sup>

8. 6 cm<sup>2</sup>

9. 8 cm<sup>2</sup>

10. 54 cm<sup>2</sup>

11. 12 cm<sup>2</sup>

12. 16 cm<sup>2</sup>

13. 12 cm<sup>2</sup>

14. 63 cm<sup>2</sup>

15. 35 cm<sup>2</sup>