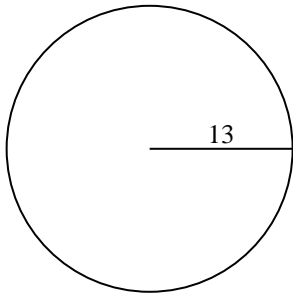


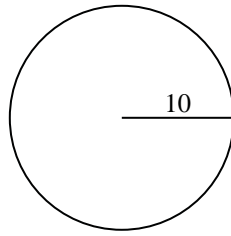


Find the circumference of each circle. Circles are not to scale.

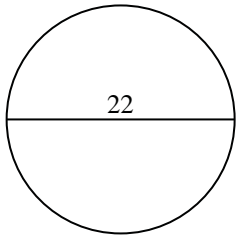
1)



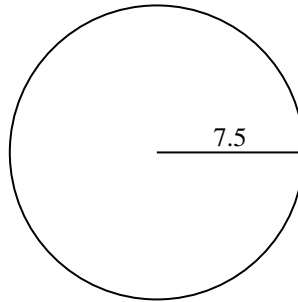
2)



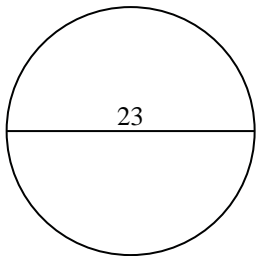
3)



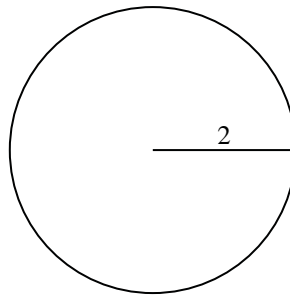
4)



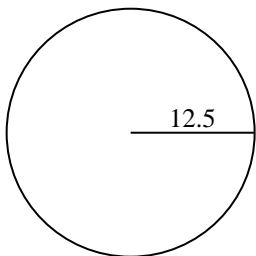
5)



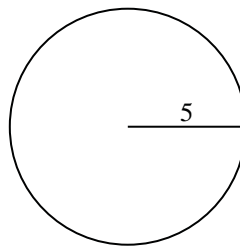
6)



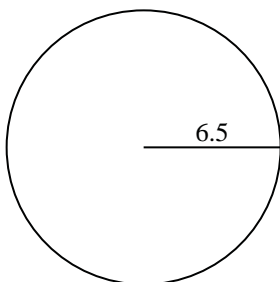
7)



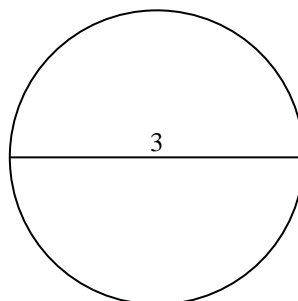
8)



9)



10)

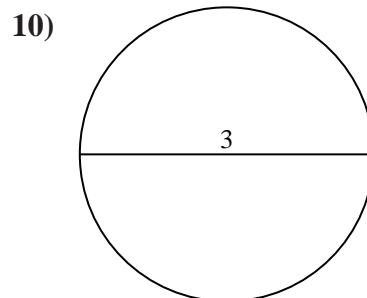
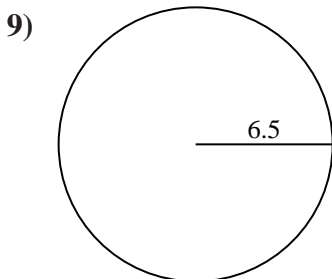
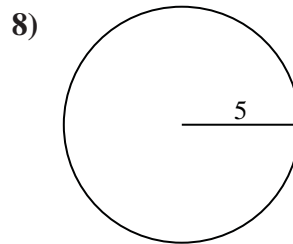
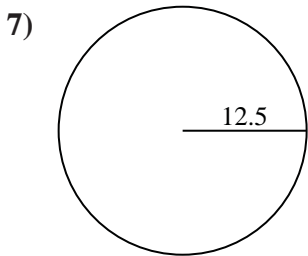
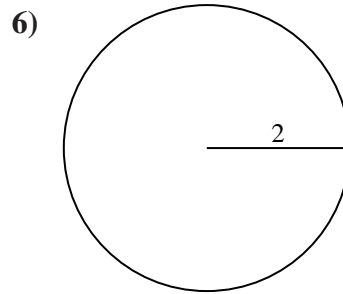
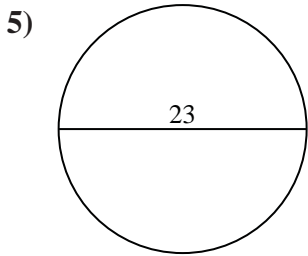
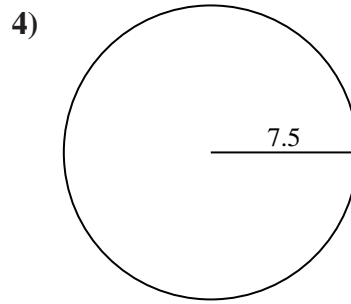
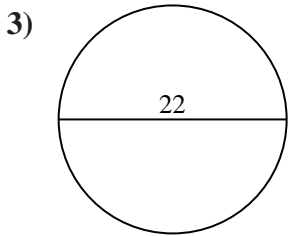
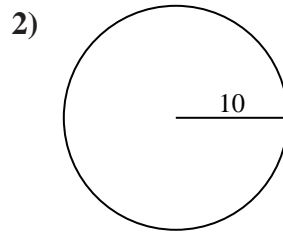
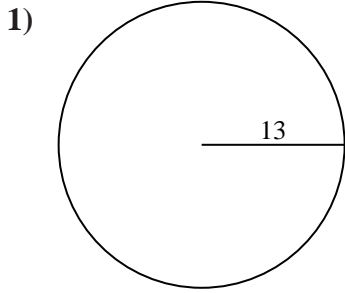


Answers

- 1. _____
- 2. _____
- 3. _____
- 4. _____
- 5. _____
- 6. _____
- 7. _____
- 8. _____
- 9. _____
- 10. _____



Find the circumference of each circle. Circles are not to scale.



Answers

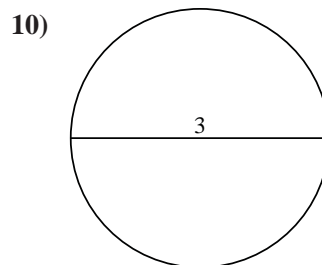
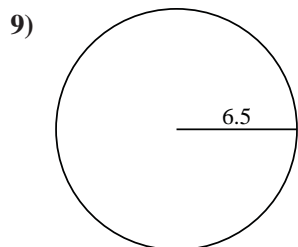
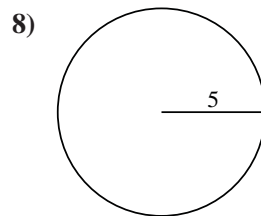
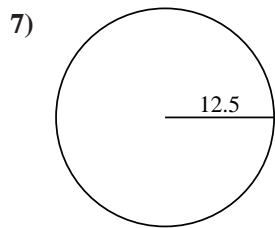
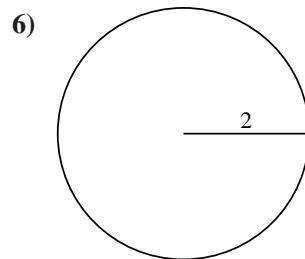
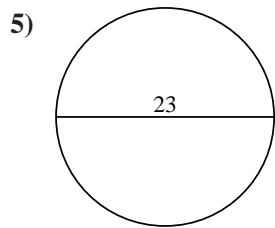
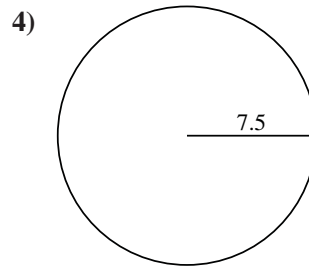
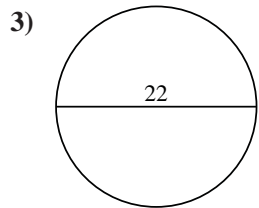
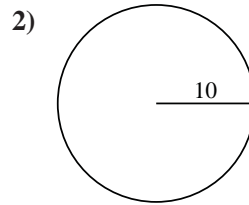
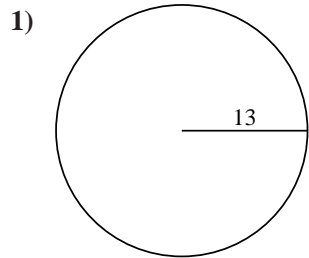
- 1. 81.68
- 2. 62.83
- 3. 69.12
- 4. 47.12
- 5. 72.26
- 6. 12.57
- 7. 78.54
- 8. 31.42
- 9. 40.84
- 10. 9.42



Find the circumference of each circle. Circles are not to scale.

Answers

31.42	81.68	72.26	12.57	69.12
47.12	9.42	40.84	78.54	62.83



1. _____
2. _____
3. _____
4. _____
5. _____
6. _____
7. _____
8. _____
9. _____
10. _____