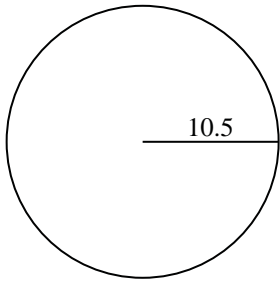


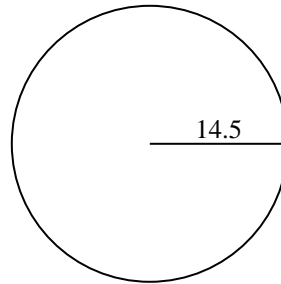


Find the circumference of each circle. Circles are not to scale.

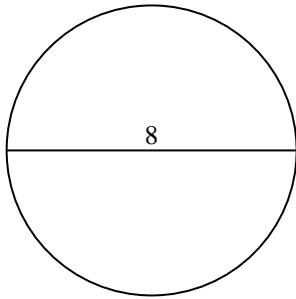
1)



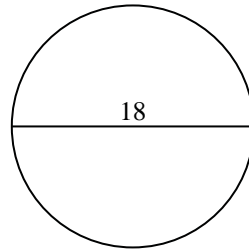
2)



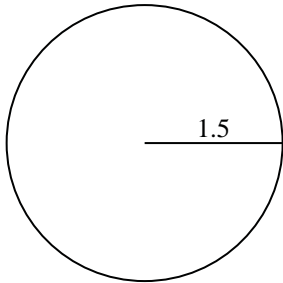
3)



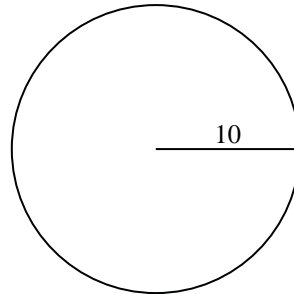
4)



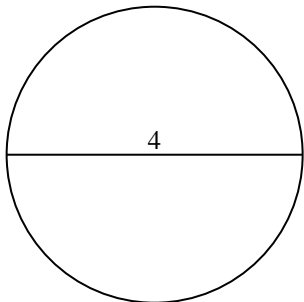
5)



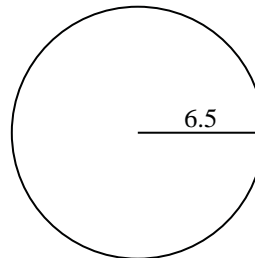
6)



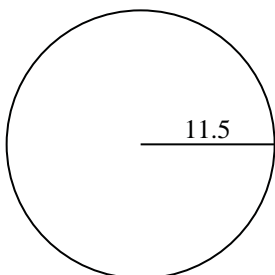
7)



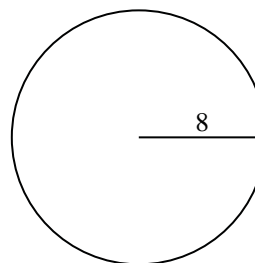
8)



9)



10)



Answers

1. \_\_\_\_\_

2. \_\_\_\_\_

3. \_\_\_\_\_

4. \_\_\_\_\_

5. \_\_\_\_\_

6. \_\_\_\_\_

7. \_\_\_\_\_

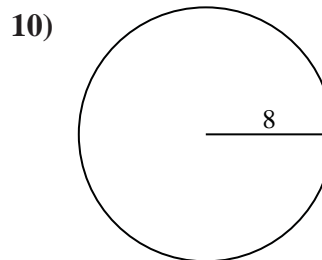
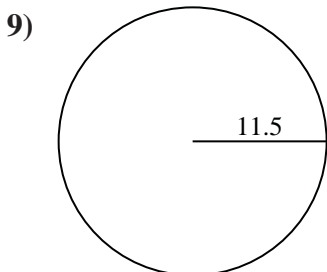
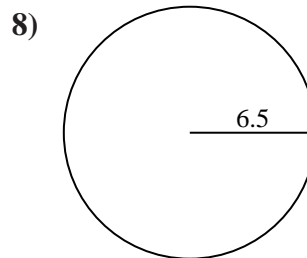
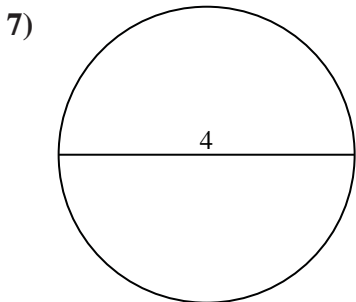
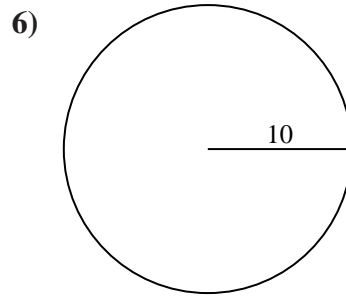
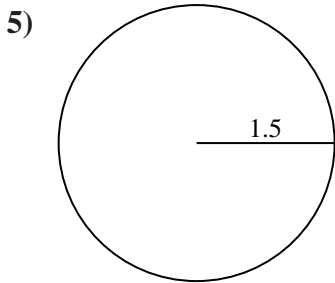
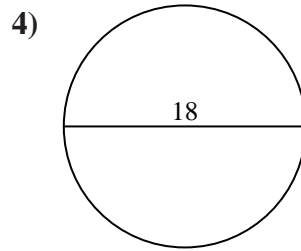
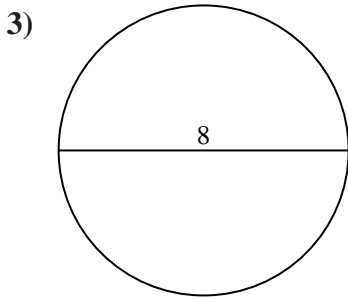
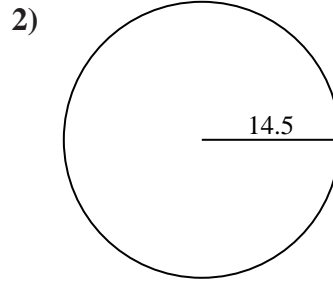
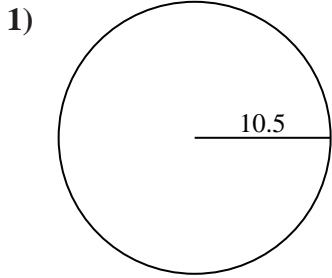
8. \_\_\_\_\_

9. \_\_\_\_\_

10. \_\_\_\_\_



Find the circumference of each circle. Circles are not to scale.



Answers

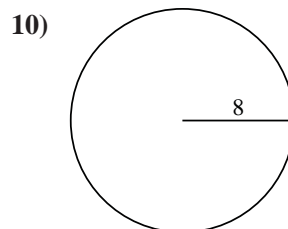
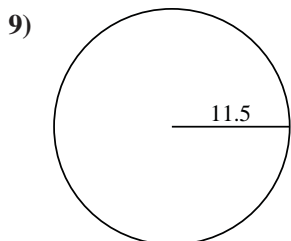
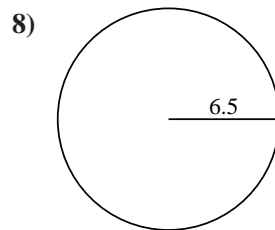
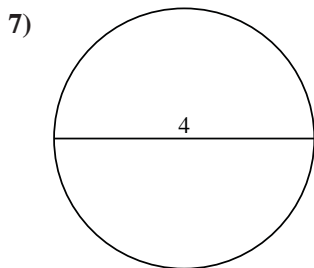
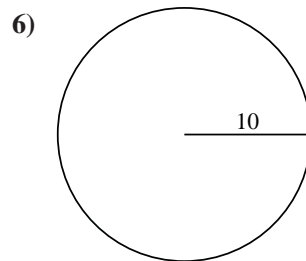
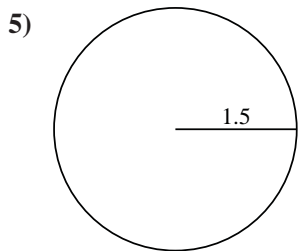
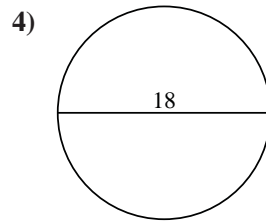
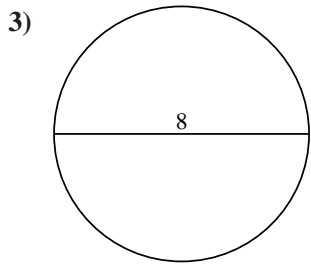
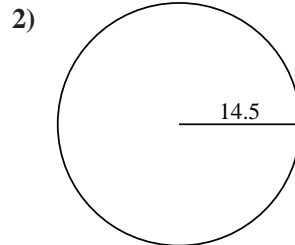
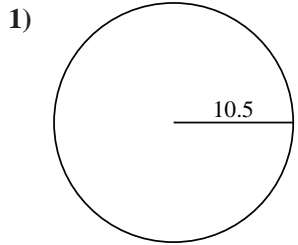
- 1. 65.97
- 2. 91.11
- 3. 25.13
- 4. 56.55
- 5. 9.42
- 6. 62.83
- 7. 12.57
- 8. 40.84
- 9. 72.26
- 10. 50.27



Find the circumference of each circle. Circles are not to scale.

**Answers**

72.26	50.27	62.83	56.55	9.42
40.84	65.97	12.57	91.11	25.13



1. \_\_\_\_\_
2. \_\_\_\_\_
3. \_\_\_\_\_
4. \_\_\_\_\_
5. \_\_\_\_\_
6. \_\_\_\_\_
7. \_\_\_\_\_
8. \_\_\_\_\_
9. \_\_\_\_\_
10. \_\_\_\_\_