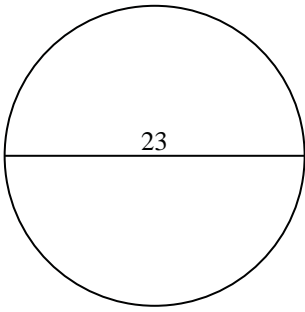


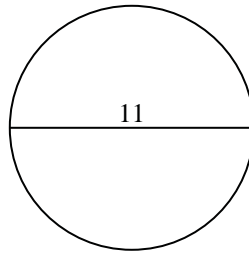


Find the circumference of each circle. Circles are not to scale.

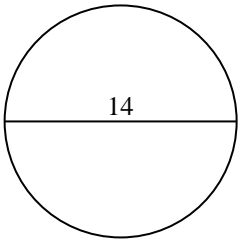
1)



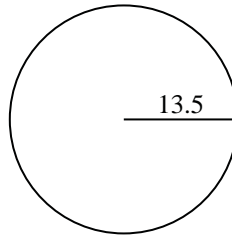
2)



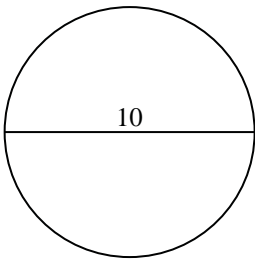
3)



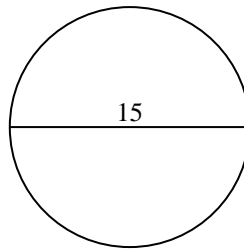
4)



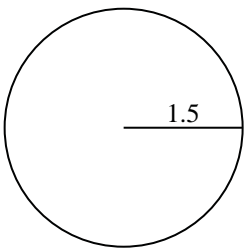
5)



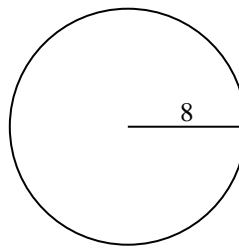
6)



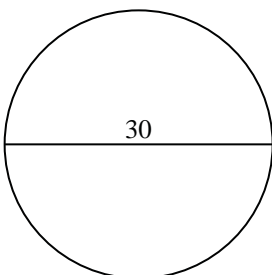
7)



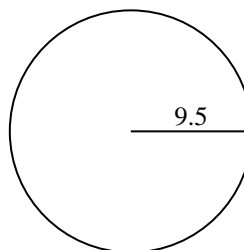
8)



9)



10)



Answers

1. _____

2. _____

3. _____

4. _____

5. _____

6. _____

7. _____

8. _____

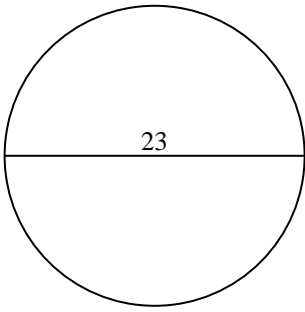
9. _____

10. _____

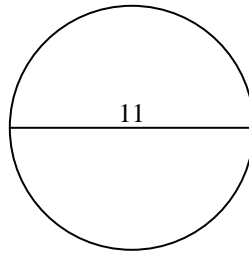


Find the circumference of each circle. Circles are not to scale.

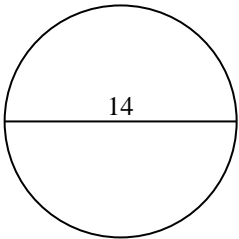
1)



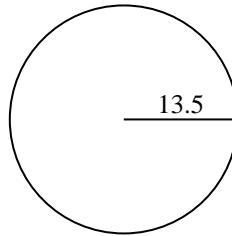
2)



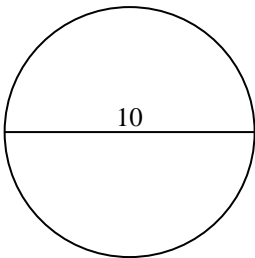
3)



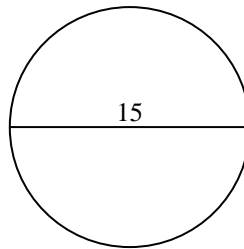
4)



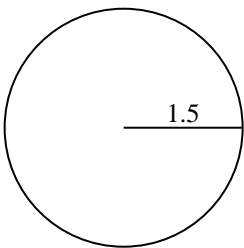
5)



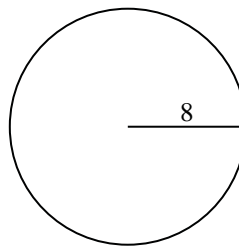
6)



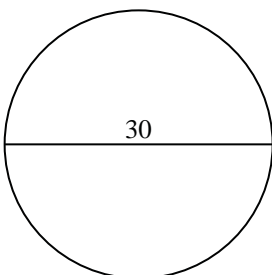
7)



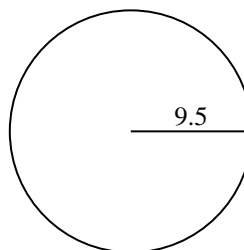
8)



9)



10)



Answers

1. 72.26

2. 34.56

3. 43.98

4. 84.82

5. 31.42

6. 47.12

7. 9.42

8. 50.27

9. 94.25

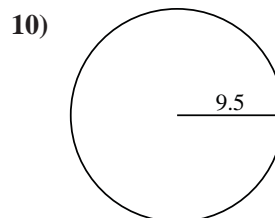
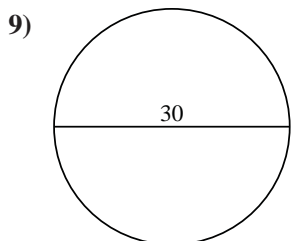
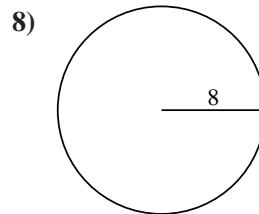
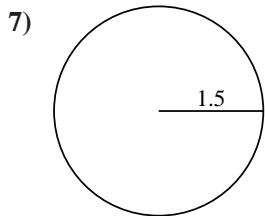
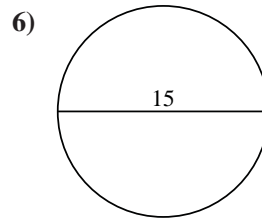
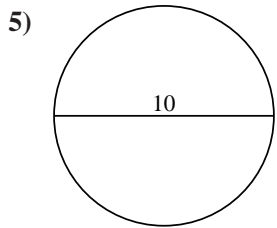
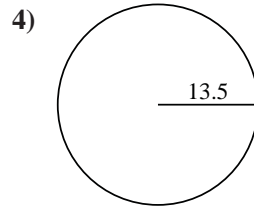
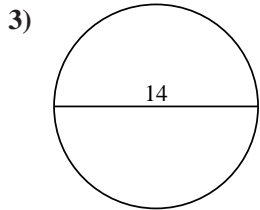
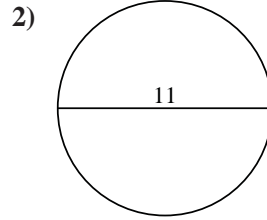
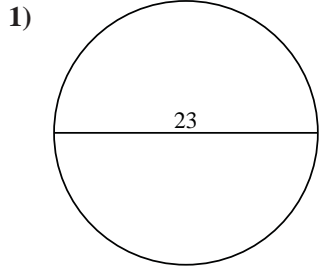
10. 59.69



Find the circumference of each circle. Circles are not to scale.

Answers

| | | | | |
|-------|-------|-------|-------|-------|
| 31.42 | 47.12 | 9.42 | 43.98 | 72.26 |
| 84.82 | 94.25 | 50.27 | 34.56 | 59.69 |



1. _____
2. _____
3. _____
4. _____
5. _____
6. _____
7. _____
8. _____
9. _____
10. _____