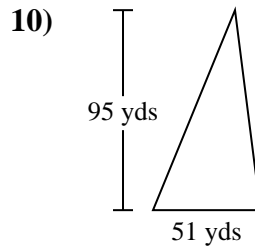
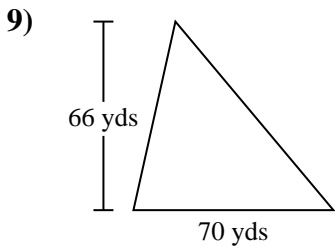
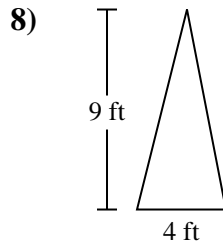
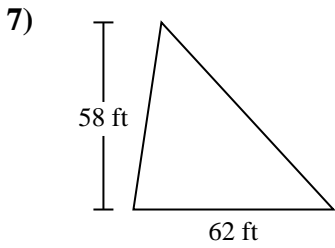
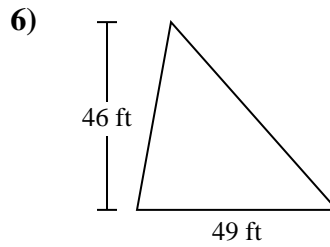
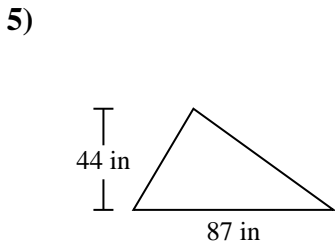
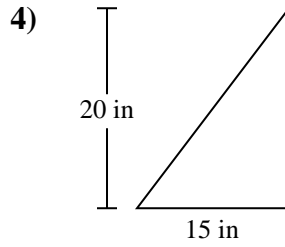
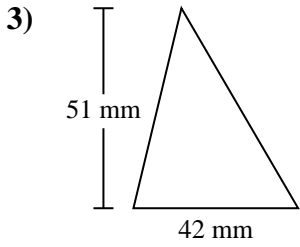
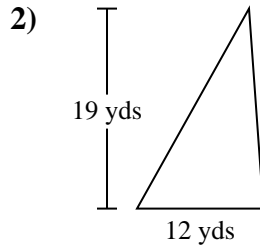
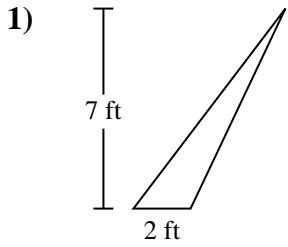




Find the area of each triangle. Units are not to scale.

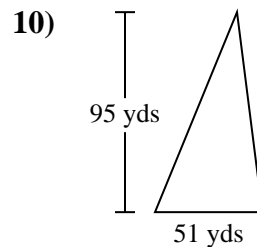
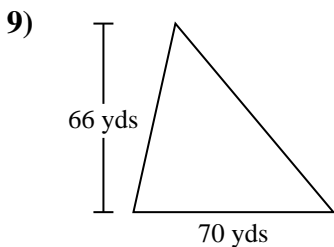
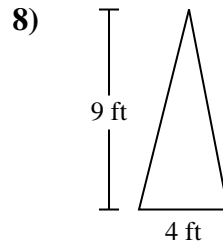
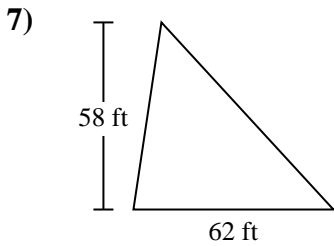
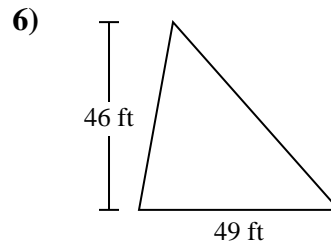
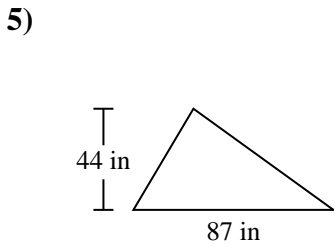
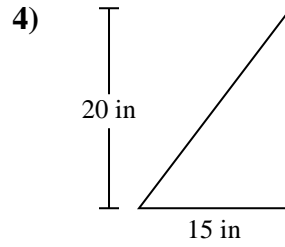
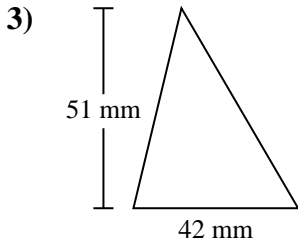
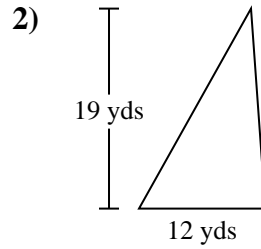
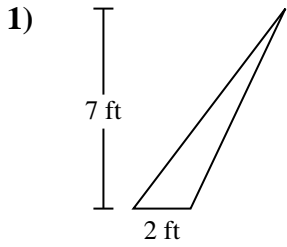


Answers

1. _____
2. _____
3. _____
4. _____
5. _____
6. _____
7. _____
8. _____
9. _____
10. _____



Find the area of each triangle. Units are not to scale.

**Answers**

1. 7 ft²
2. 114 yds²
3. 1,071 mm²
4. 150 in²
5. 1,914 in²
6. 1,127 ft²
7. 1,798 ft²
8. 18 ft²
9. 2,310 yds²
10. 2,422.5 yds²



Find the area of each triangle. Units are not to scale.

Answers

1,071	7	2,310	2,422.5
114	150	1,127	18
1,798	1,914		

1. _____
2. _____
3. _____
4. _____
5. _____
6. _____
7. _____
8. _____
9. _____
10. _____

