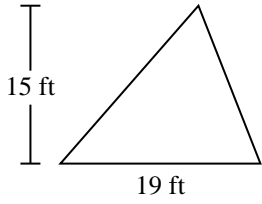


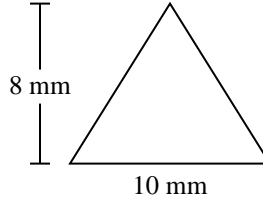


Find the area of each triangle. Units are not to scale.

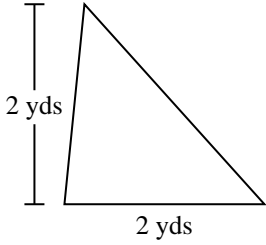
1)



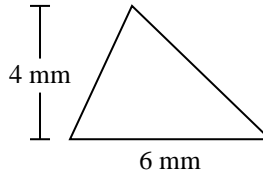
2)



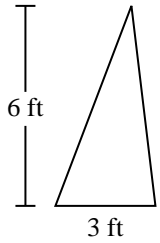
3)



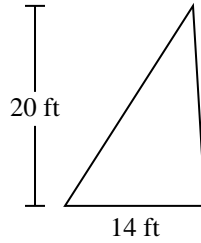
4)



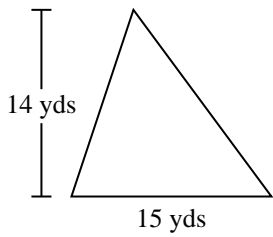
5)



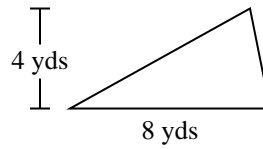
6)



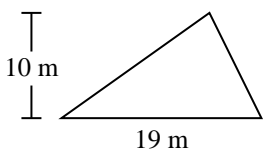
7)



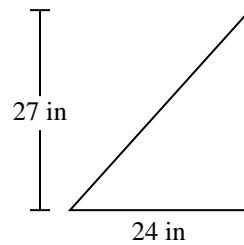
8)



9)



10)



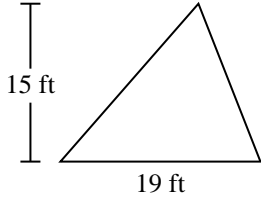
Answers

- 1. _____
- 2. _____
- 3. _____
- 4. _____
- 5. _____
- 6. _____
- 7. _____
- 8. _____
- 9. _____
- 10. _____

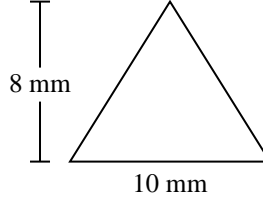


Find the area of each triangle. Units are not to scale.

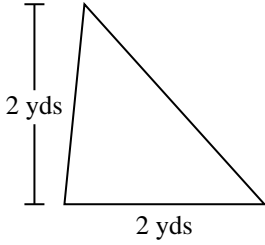
1)



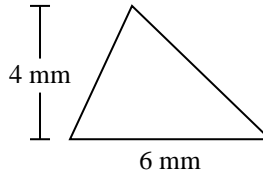
2)



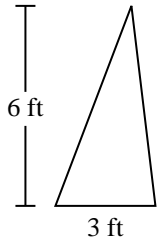
3)



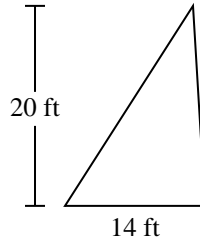
4)



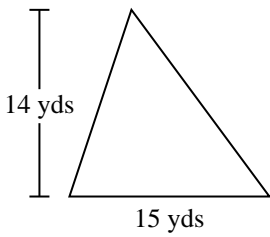
5)



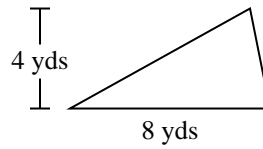
6)



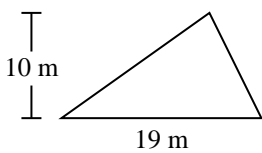
7)



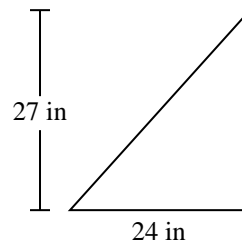
8)



9)



10)



Answers

1. 142.5 ft²

2. 40 mm²

3. 2 yds²

4. 12 mm²

5. 9 ft²

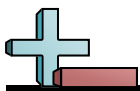
6. 140 ft²

7. 105 yds²

8. 16 yds²

9. 95 m²

10. 324 in²



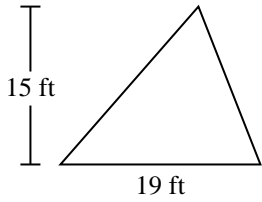
Find the area of each triangle. Units are not to scale.

Answers

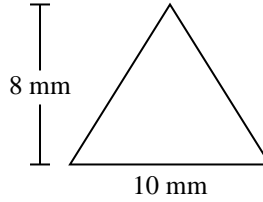
40	9	142.5	324
140	95	105	12
2	16		

1. _____
2. _____
3. _____
4. _____
5. _____
6. _____
7. _____
8. _____
9. _____
10. _____

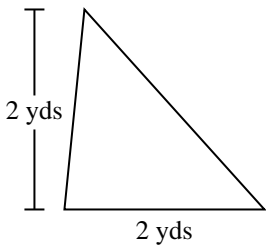
1)



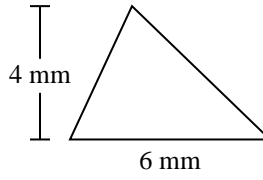
2)



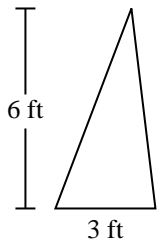
3)



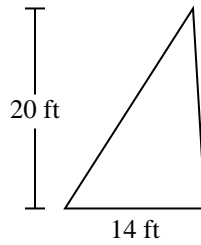
4)



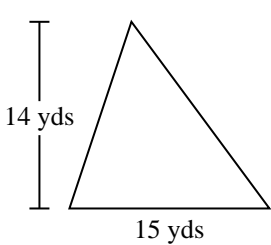
5)



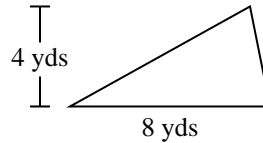
6)



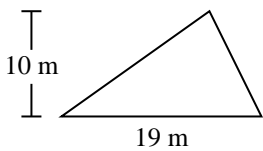
7)



8)



9)



10)

