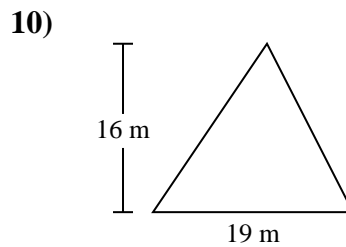
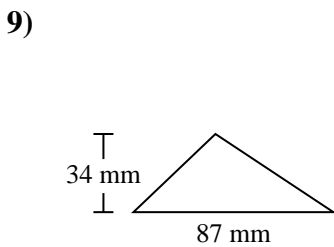
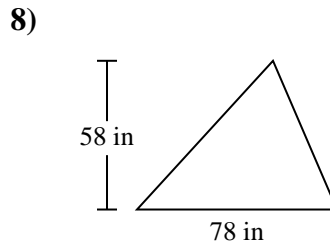
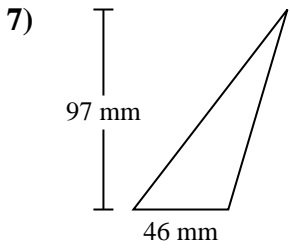
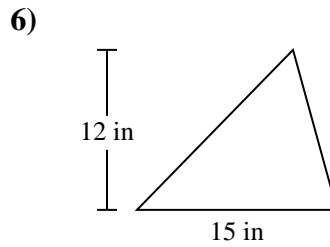
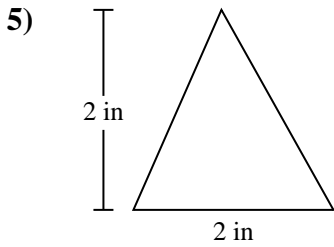
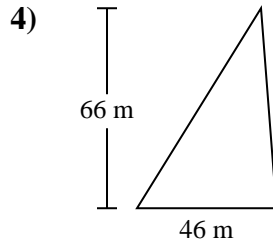
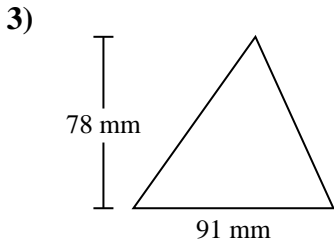
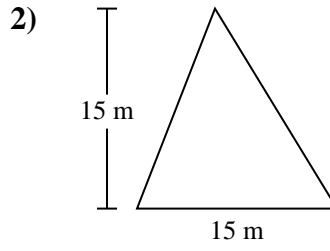
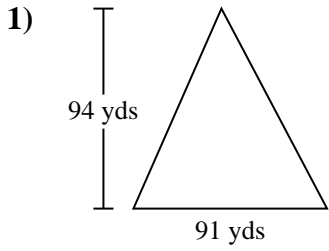




Find the area of each triangle. Units are not to scale.

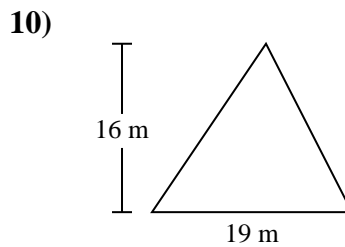
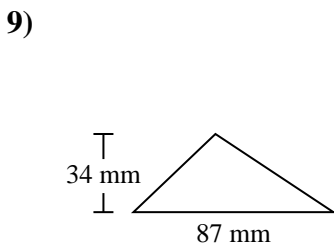
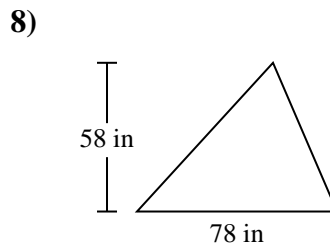
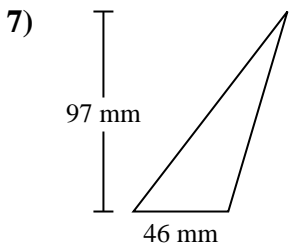
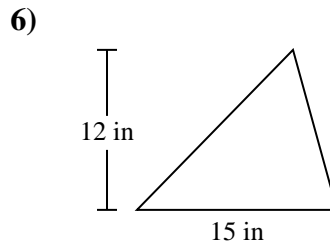
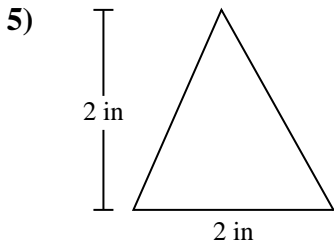
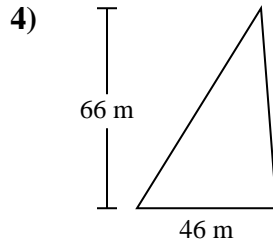
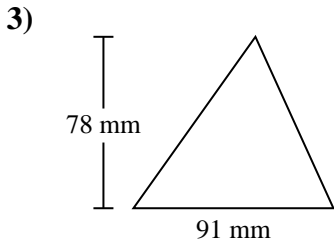
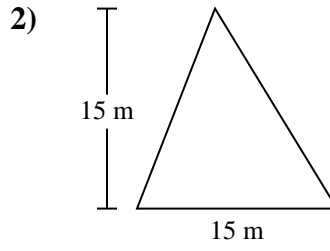
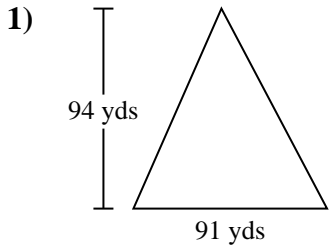


Answers

- 1. _____
- 2. _____
- 3. _____
- 4. _____
- 5. _____
- 6. _____
- 7. _____
- 8. _____
- 9. _____
- 10. _____



Find the area of each triangle. Units are not to scale.



Answers

1. 4,277 yds²

2. 112.5 m²

3. 3,549 mm²

4. 1,518 m²

5. 2 in²

6. 90 in²

7. 2,231 mm²

8. 2,262 in²

9. 1,479 mm²

10. 152 m²



Find the area of each triangle. Units are not to scale.

Answers

3,549	1,479	2,262	90
2	152	2,231	1,518
112.5	4,277		

1. _____
2. _____
3. _____
4. _____
5. _____
6. _____
7. _____
8. _____
9. _____
10. _____

