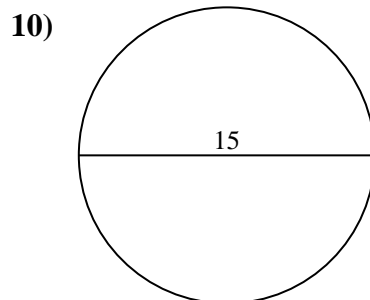
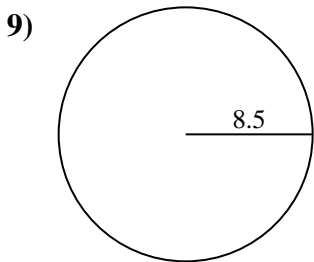
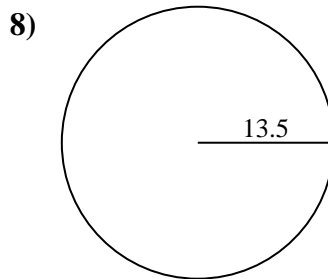
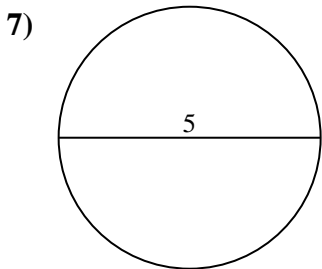
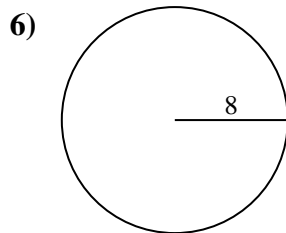
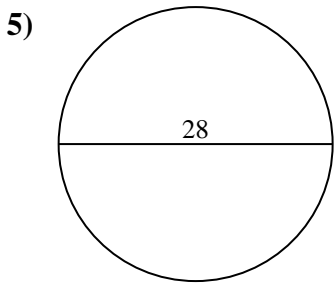
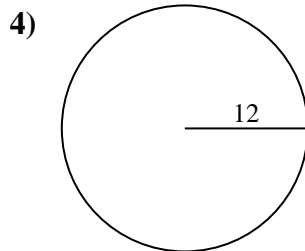
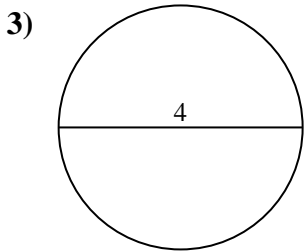
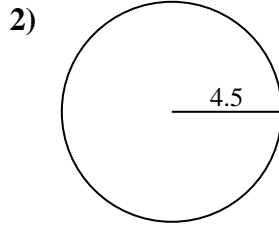
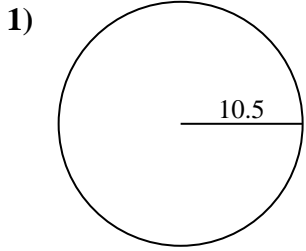




Find the area of each circle. Circles are not to scale.

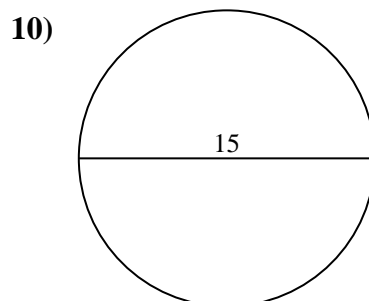
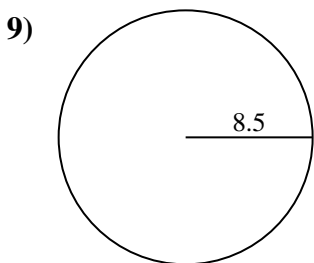
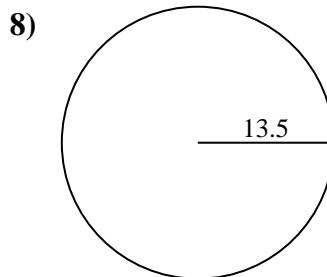
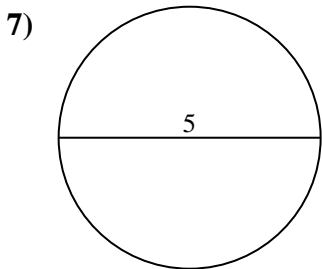
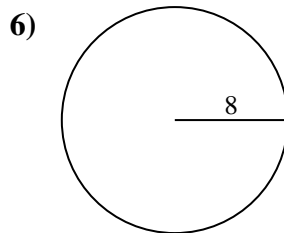
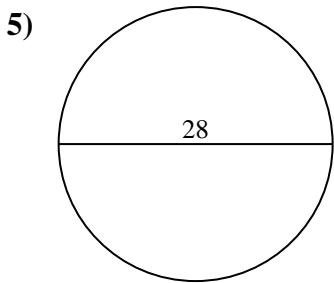
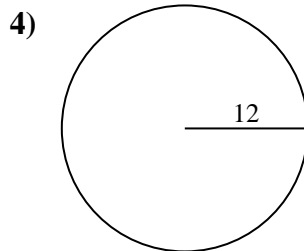
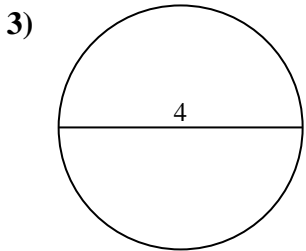
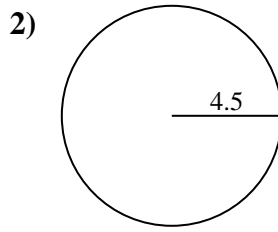
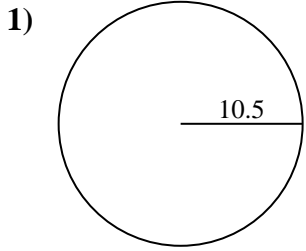


Answers

1. _____
2. _____
3. _____
4. _____
5. _____
6. _____
7. _____
8. _____
9. _____
10. _____



Find the area of each circle. Circles are not to scale.



Answers

1. 346.36
2. 63.62
3. 12.57
4. 452.39
5. 615.75
6. 201.06
7. 19.63
8. 572.56
9. 226.98
10. 176.71



Find the area of each circle. Circles are not to scale.

572.56	201.06	226.98	19.63	63.62
346.36	615.75	452.39	176.71	12.57

Answers

1. _____
2. _____
3. _____
4. _____
5. _____
6. _____
7. _____
8. _____
9. _____
10. _____

