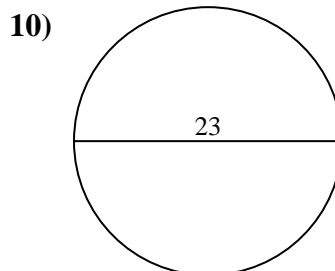
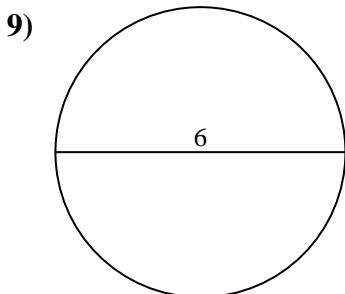
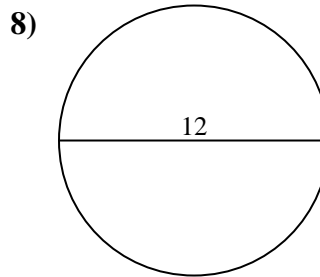
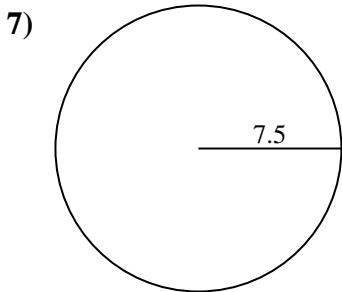
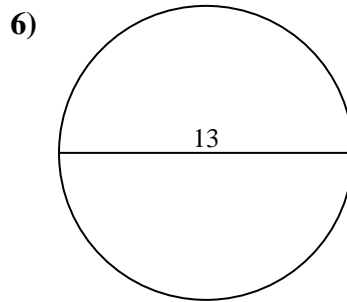
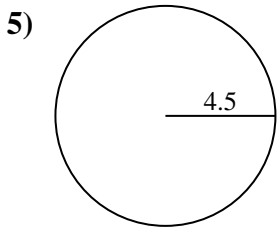
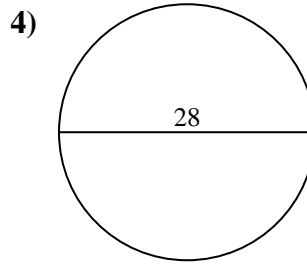
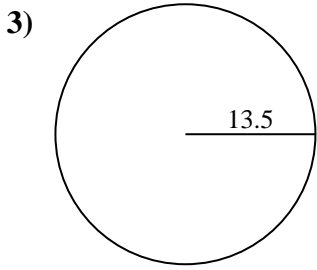
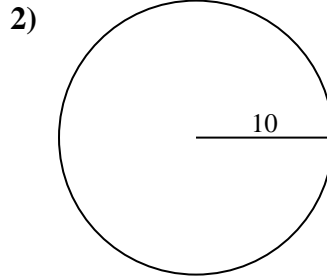
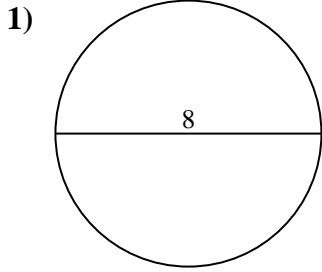




Find the area of each circle. Circles are not to scale.

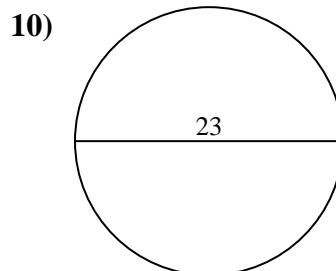
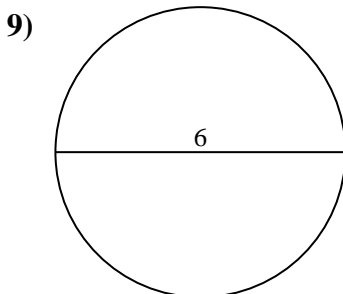
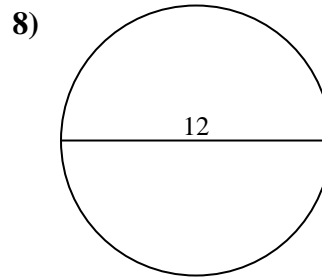
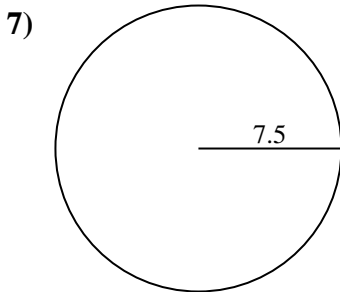
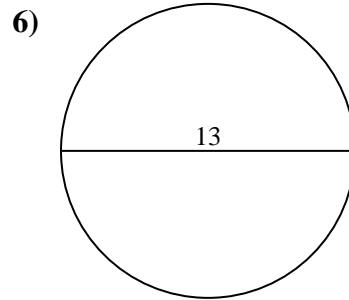
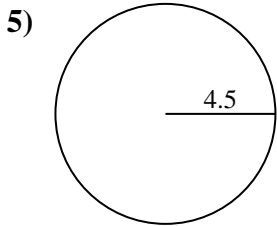
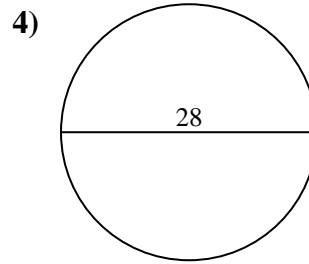
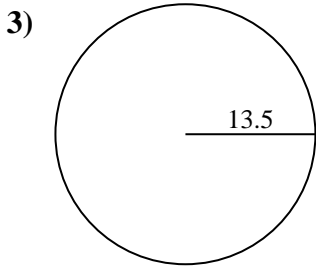
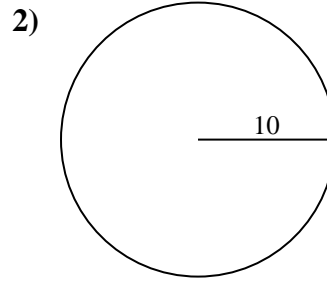
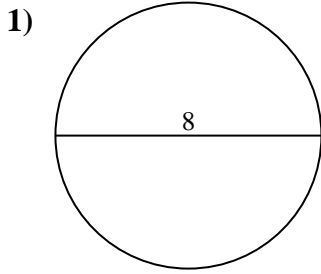


Answers

- 1. \_\_\_\_\_
- 2. \_\_\_\_\_
- 3. \_\_\_\_\_
- 4. \_\_\_\_\_
- 5. \_\_\_\_\_
- 6. \_\_\_\_\_
- 7. \_\_\_\_\_
- 8. \_\_\_\_\_
- 9. \_\_\_\_\_
- 10. \_\_\_\_\_



Find the area of each circle. Circles are not to scale.

**Answers**

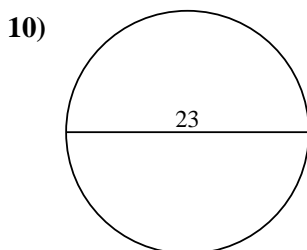
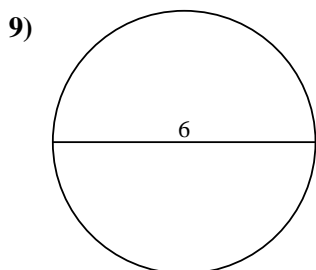
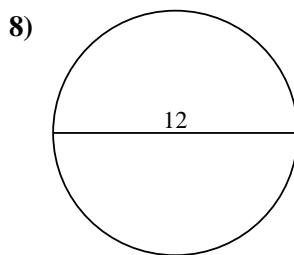
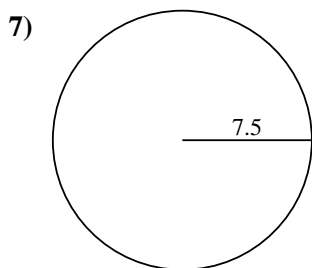
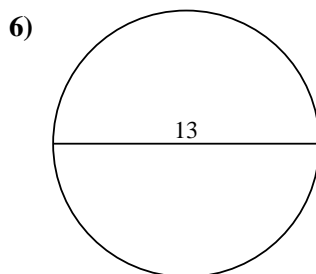
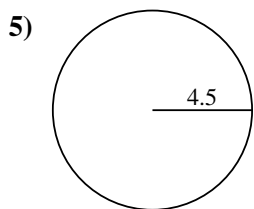
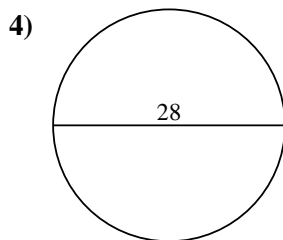
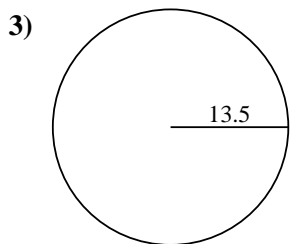
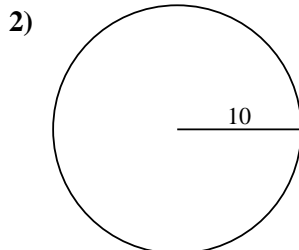
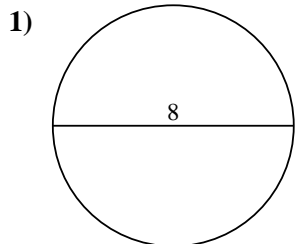
1. 50.27 cm<sup>2</sup>
2. 314.16 cm<sup>2</sup>
3. 572.56 cm<sup>2</sup>
4. 615.75 cm<sup>2</sup>
5. 63.62 cm<sup>2</sup>
6. 132.73 cm<sup>2</sup>
7. 176.71 cm<sup>2</sup>
8. 113.1 cm<sup>2</sup>
9. 28.27 cm<sup>2</sup>
10. 415.48 cm<sup>2</sup>



Find the area of each circle. Circles are not to scale.

572.56 cm<sup>2</sup>      113.1 cm<sup>2</sup>      28.27 cm<sup>2</sup>      176.71 cm<sup>2</sup>      314.16 cm<sup>2</sup>

415.48 cm<sup>2</sup>      63.62 cm<sup>2</sup>      615.75 cm<sup>2</sup>      132.73 cm<sup>2</sup>      50.27 cm<sup>2</sup>



**Answers**

1. \_\_\_\_\_

2. \_\_\_\_\_

3. \_\_\_\_\_

4. \_\_\_\_\_

5. \_\_\_\_\_

6. \_\_\_\_\_

7. \_\_\_\_\_

8. \_\_\_\_\_

9. \_\_\_\_\_

10. \_\_\_\_\_