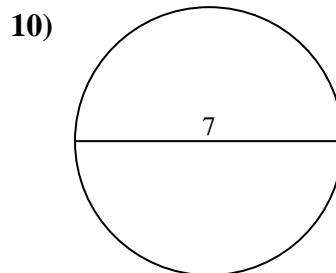
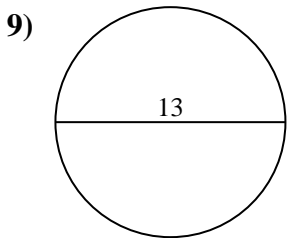
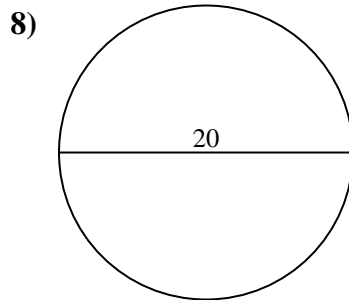
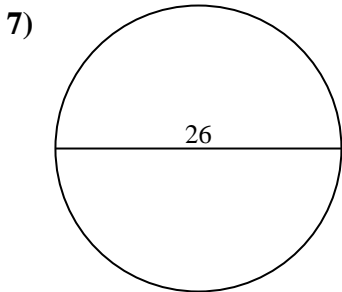
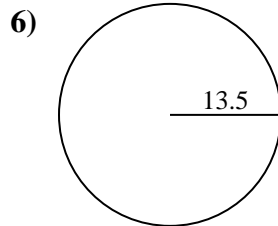
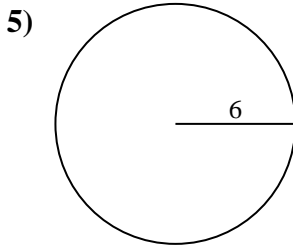
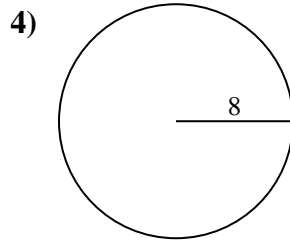
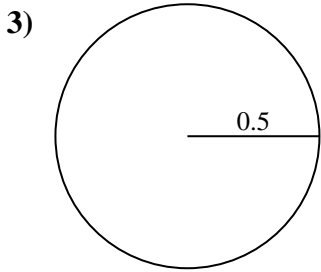
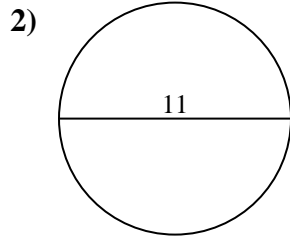
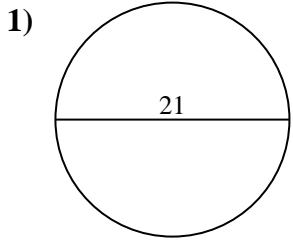




Find the area of each circle. Circles are not to scale.

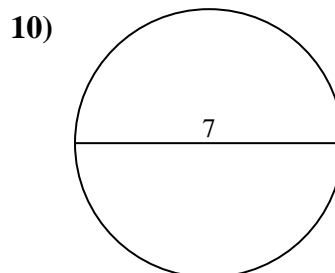
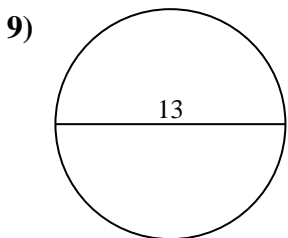
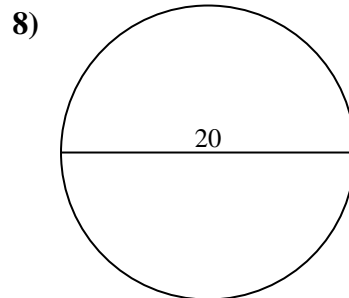
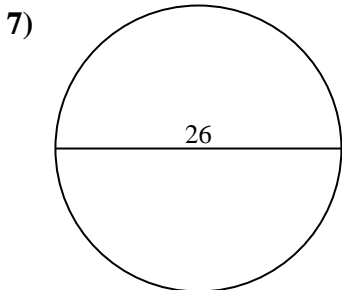
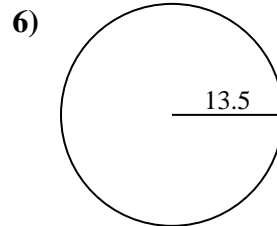
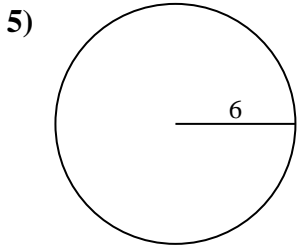
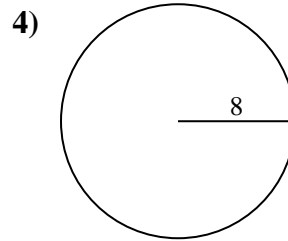
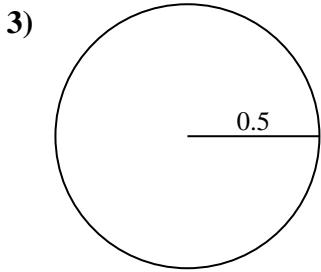
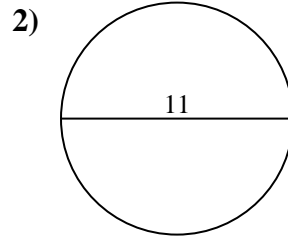
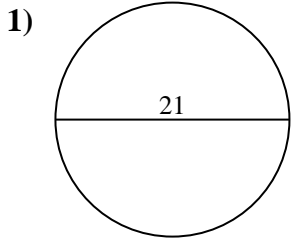


Answers

- 1. _____
- 2. _____
- 3. _____
- 4. _____
- 5. _____
- 6. _____
- 7. _____
- 8. _____
- 9. _____
- 10. _____



Find the area of each circle. Circles are not to scale.

Answers

1. 346.36 cm²
2. 95.03 cm²
3. 0.79 cm²
4. 201.06 cm²
5. 113.1 cm²
6. 572.56 cm²
7. 530.93 cm²
8. 314.16 cm²
9. 132.73 cm²
10. 38.48 cm²



Find the area of each circle. Circles are not to scale.

95.03 cm²

0.79 cm²

346.36 cm²

132.73 cm²

38.48 cm²

201.06 cm²

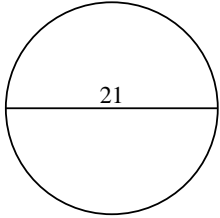
572.56 cm²

113.1 cm²

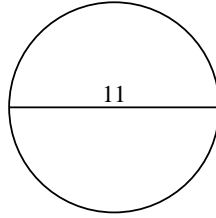
314.16 cm²

530.93 cm²

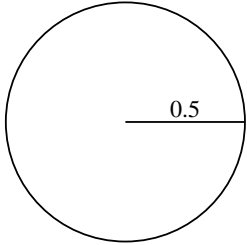
1)



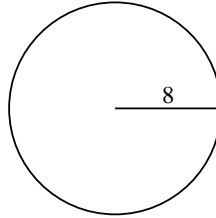
2)



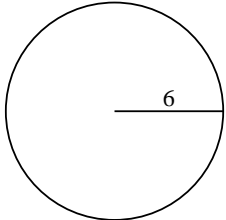
3)



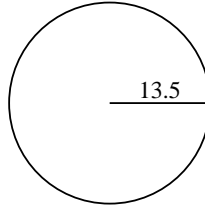
4)



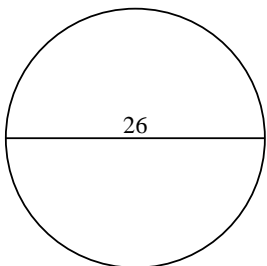
5)



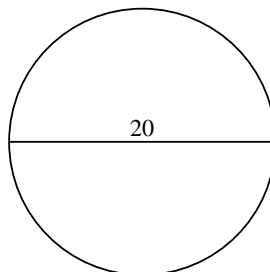
6)



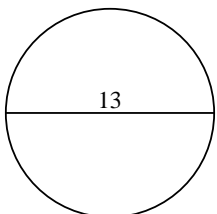
7)



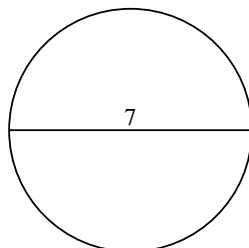
8)



9)



10)



Answers

1. _____

2. _____

3. _____

4. _____

5. _____

6. _____

7. _____

8. _____

9. _____

10. _____