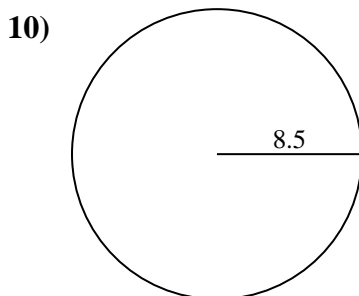
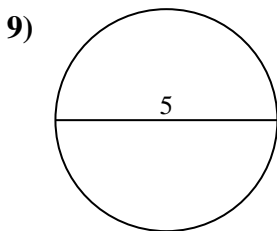
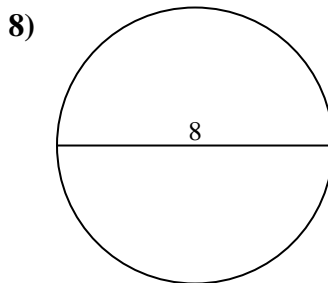
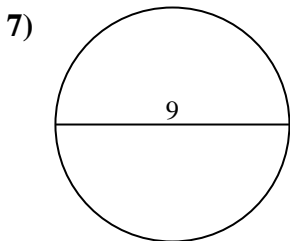
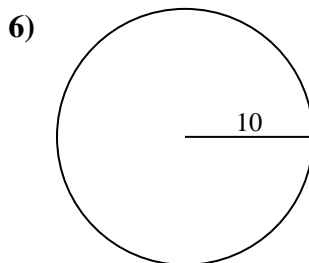
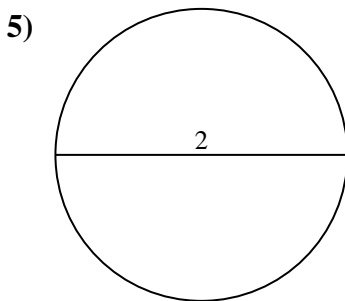
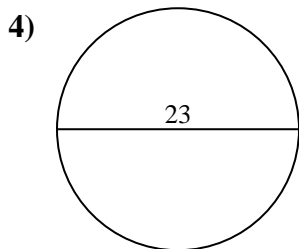
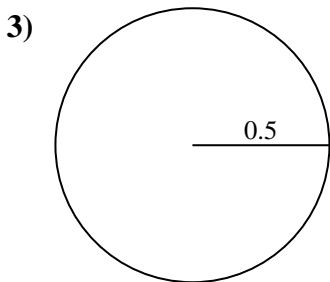
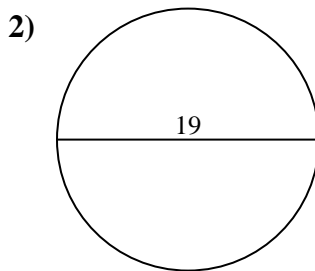
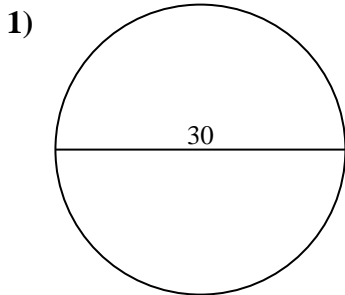




Find the area of each circle. Circles are not to scale.

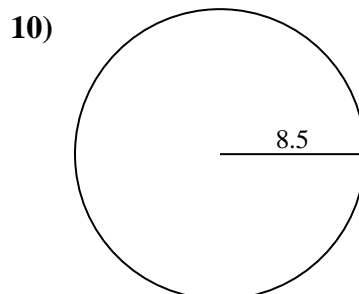
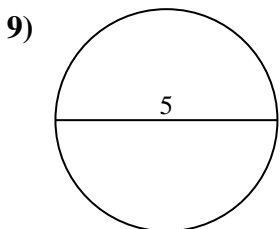
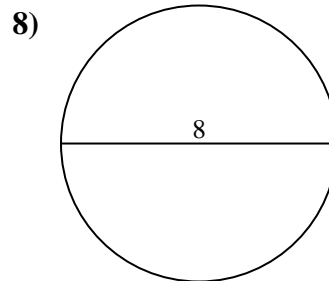
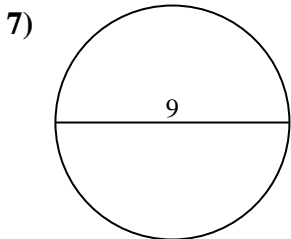
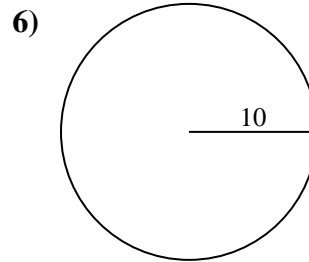
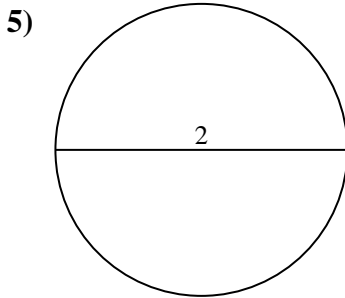
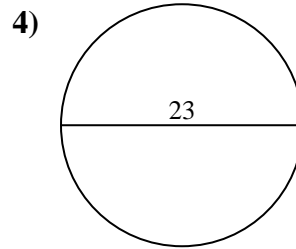
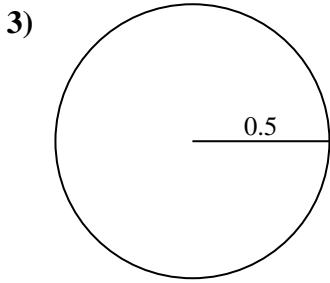
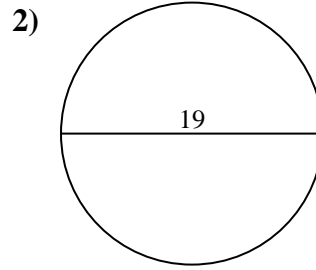
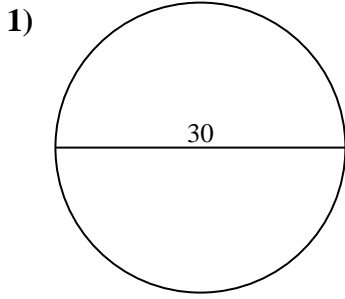


Answers

- 1. _____
- 2. _____
- 3. _____
- 4. _____
- 5. _____
- 6. _____
- 7. _____
- 8. _____
- 9. _____
- 10. _____



Find the area of each circle. Circles are not to scale.

**Answers**

1. **706.86 cm²**
2. **283.53 cm²**
3. **0.79 cm²**
4. **415.48 cm²**
5. **3.14 cm²**
6. **314.16 cm²**
7. **63.62 cm²**
8. **50.27 cm²**
9. **19.63 cm²**
10. **226.98 cm²**



Find the area of each circle. Circles are not to scale.

Answers

3.14 cm ²	63.62 cm ²	283.53 cm ²	226.98 cm ²	50.27 cm ²
314.16 cm ²	706.86 cm ²	0.79 cm ²	415.48 cm ²	19.63 cm ²

1. _____
2. _____
3. _____
4. _____
5. _____
6. _____
7. _____
8. _____
9. _____
10. _____

