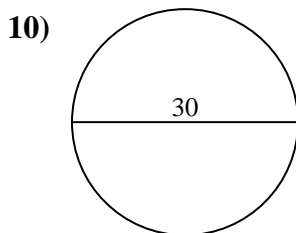
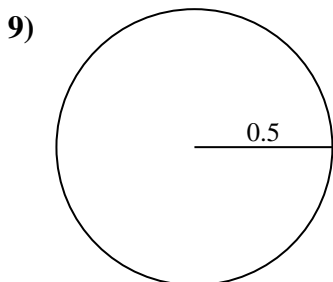
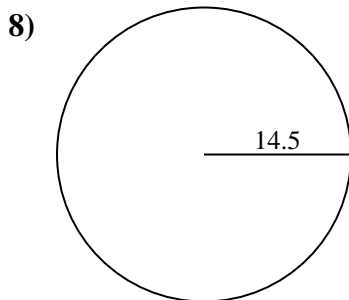
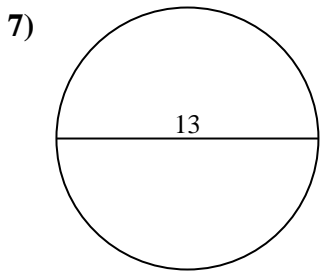
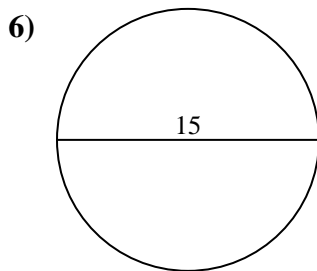
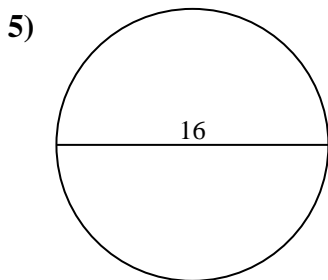
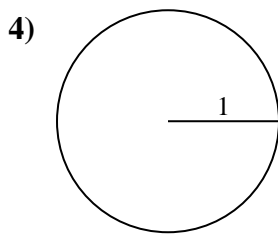
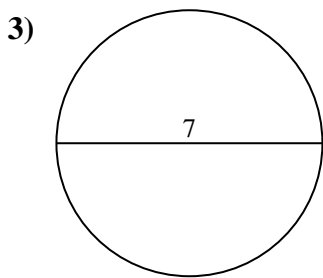
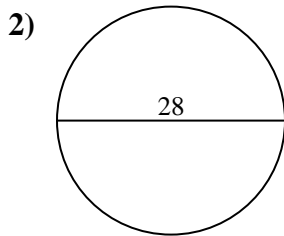
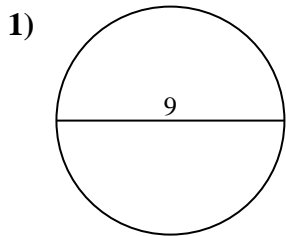




Find the area of each circle. Circles are not to scale.

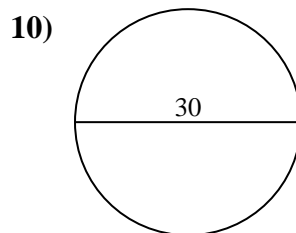
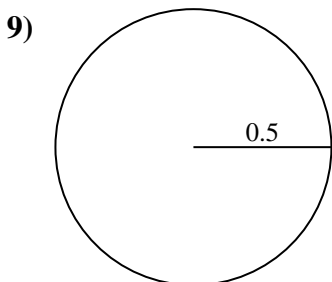
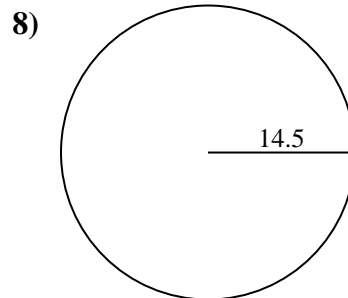
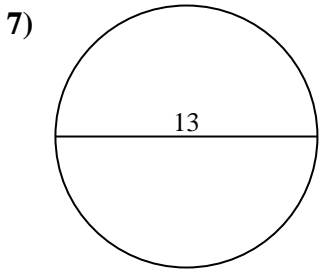
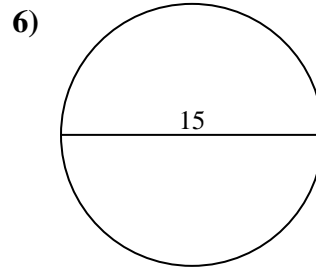
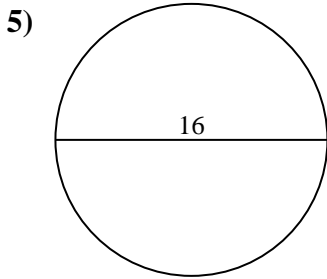
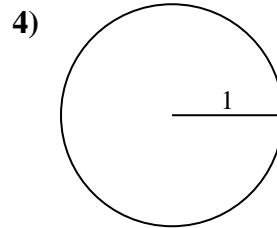
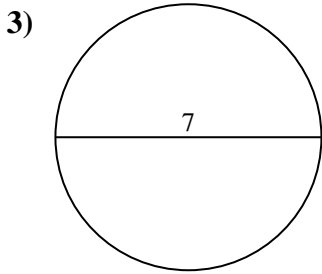
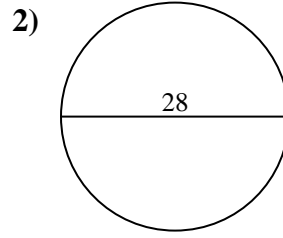
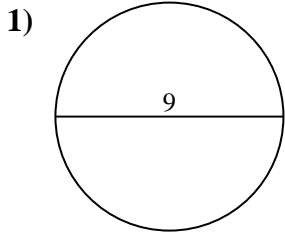


Answers

- 1. _____
- 2. _____
- 3. _____
- 4. _____
- 5. _____
- 6. _____
- 7. _____
- 8. _____
- 9. _____
- 10. _____



Find the area of each circle. Circles are not to scale.

**Answers**

1. 63.62 cm²
2. 615.75 cm²
3. 38.48 cm²
4. 3.14 cm²
5. 201.06 cm²
6. 176.71 cm²
7. 132.73 cm²
8. 660.52 cm²
9. 0.79 cm²
10. 706.86 cm²



Find the area of each circle. Circles are not to scale.

Answers

38.48 cm²

660.52 cm²

615.75 cm²

132.73 cm²

3.14 cm²

706.86 cm²

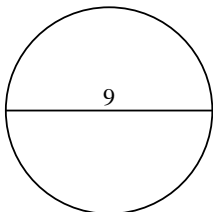
0.79 cm²

201.06 cm²

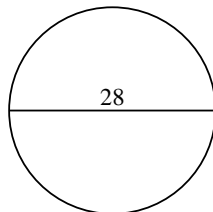
176.71 cm²

63.62 cm²

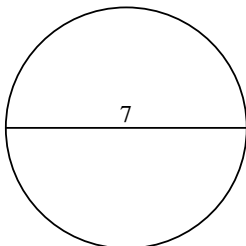
1)



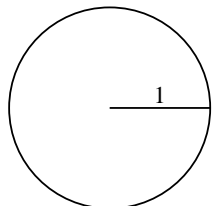
2)



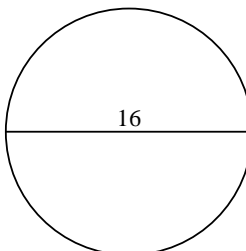
3)



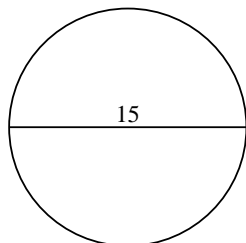
4)



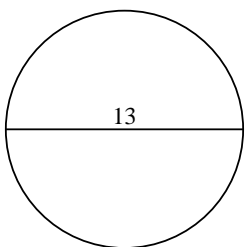
5)



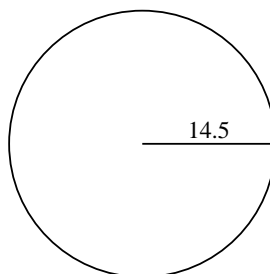
6)



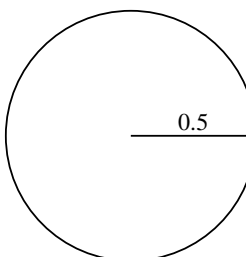
7)



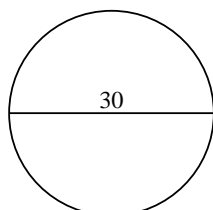
8)



9)



10)



1. _____

2. _____

3. _____

4. _____

5. _____

6. _____

7. _____

8. _____

9. _____

10. _____