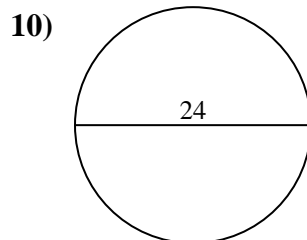
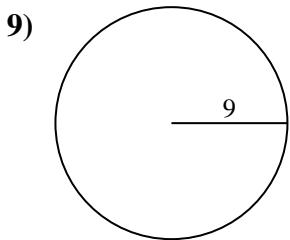
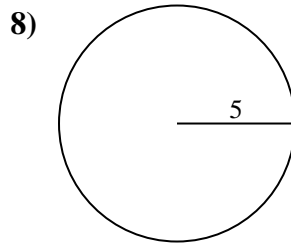
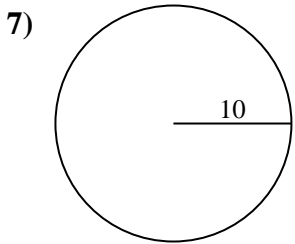
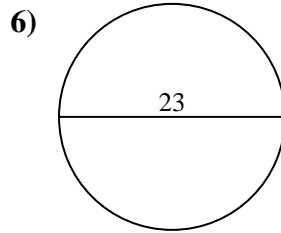
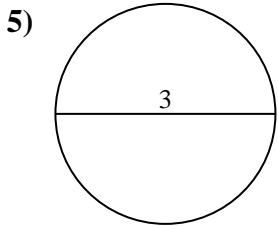
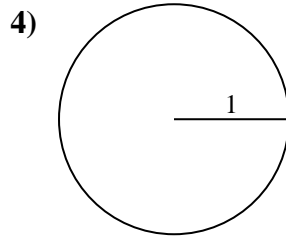
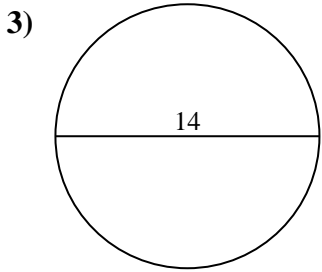
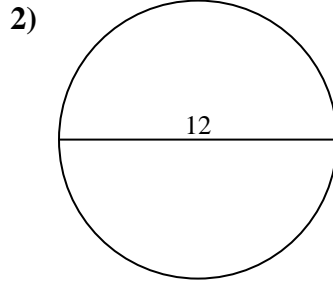
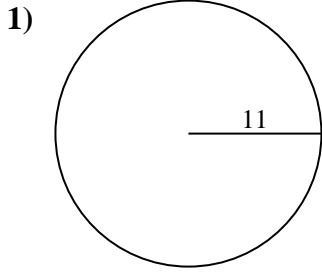




Find the area of each circle. Circles are not to scale.

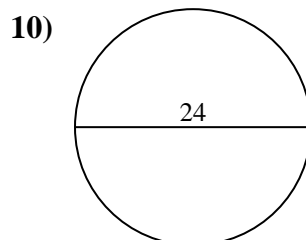
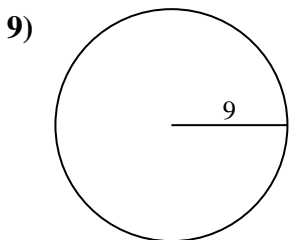
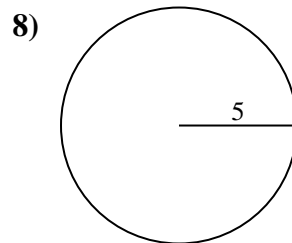
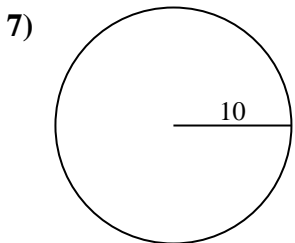
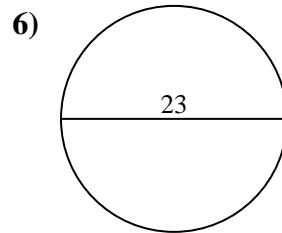
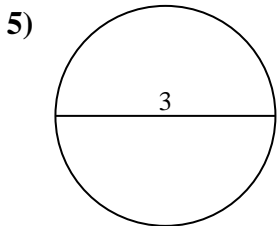
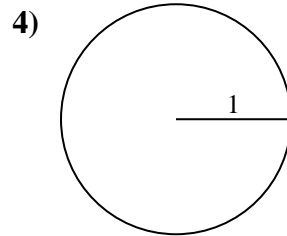
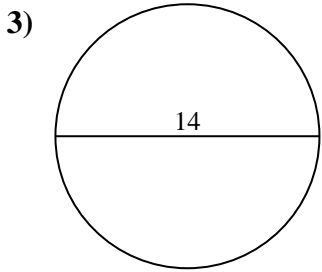
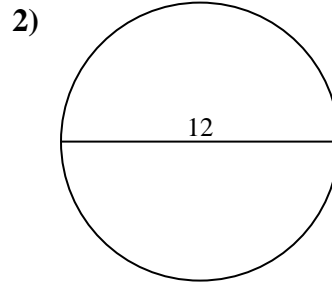
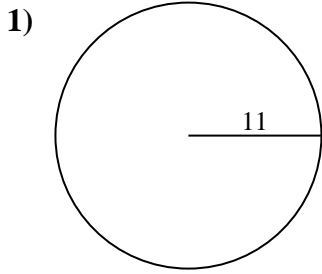


Answers

- 1. _____
- 2. _____
- 3. _____
- 4. _____
- 5. _____
- 6. _____
- 7. _____
- 8. _____
- 9. _____
- 10. _____



Find the area of each circle. Circles are not to scale.

Answers

1. **380.13 cm²**
2. **113.1 cm²**
3. **153.94 cm²**
4. **3.14 cm²**
5. **7.07 cm²**
6. **415.48 cm²**
7. **314.16 cm²**
8. **78.54 cm²**
9. **254.47 cm²**
10. **452.39 cm²**



Find the area of each circle. Circles are not to scale.

415.48 cm²

153.94 cm²

3.14 cm²

78.54 cm²

314.16 cm²

7.07 cm²

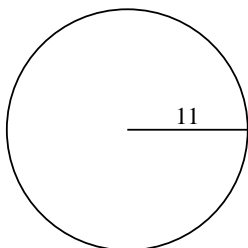
380.13 cm²

113.1 cm²

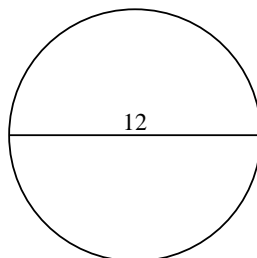
452.39 cm²

254.47 cm²

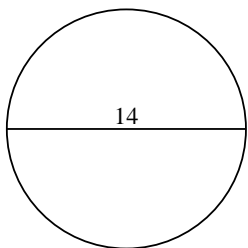
1)



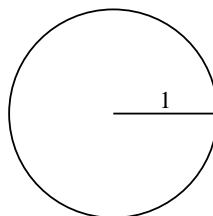
2)



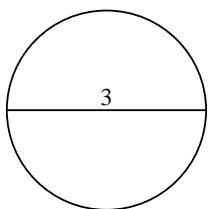
3)



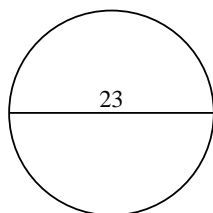
4)



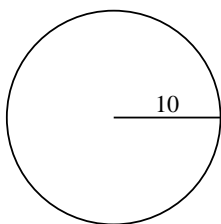
5)



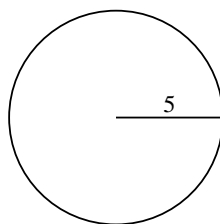
6)



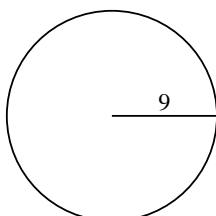
7)



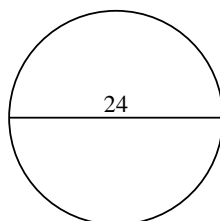
8)



9)



10)



Answers

1. _____

2. _____

3. _____

4. _____

5. _____

6. _____

7. _____

8. _____

9. _____

10. _____