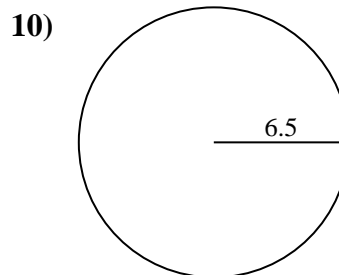
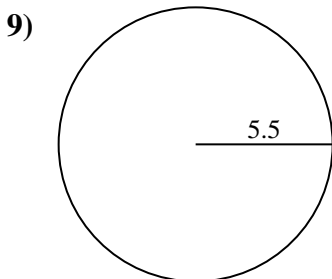
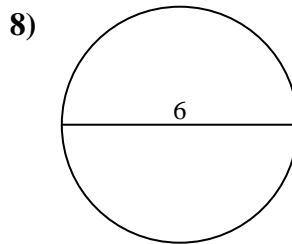
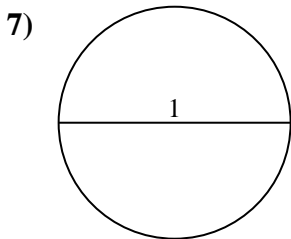
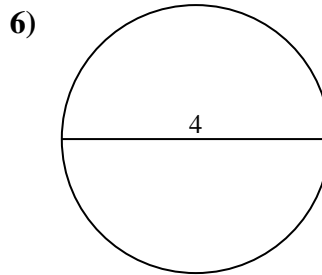
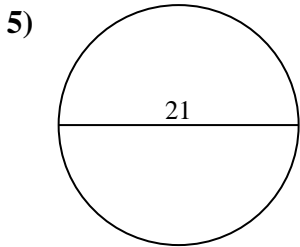
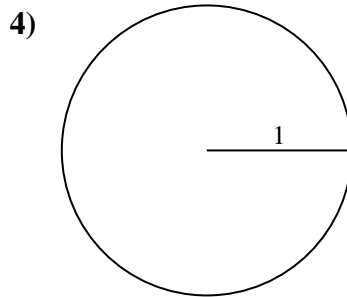
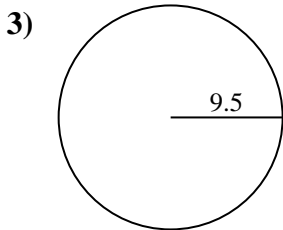
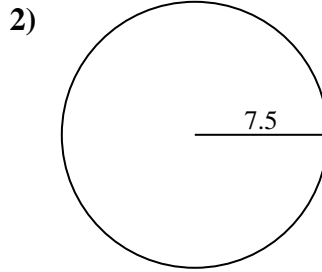
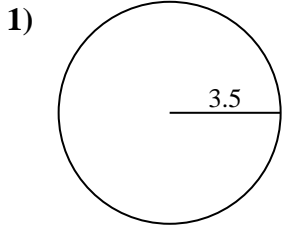




Find the area and circumference of each circle. Circles are not to scale.



Answers

1a. \_\_\_\_\_

1c. \_\_\_\_\_

2a. \_\_\_\_\_

2c. \_\_\_\_\_

3a. \_\_\_\_\_

3c. \_\_\_\_\_

4a. \_\_\_\_\_

4c. \_\_\_\_\_

5a. \_\_\_\_\_

5c. \_\_\_\_\_

6a. \_\_\_\_\_

6c. \_\_\_\_\_

7a. \_\_\_\_\_

7c. \_\_\_\_\_

8a. \_\_\_\_\_

8c. \_\_\_\_\_

9a. \_\_\_\_\_

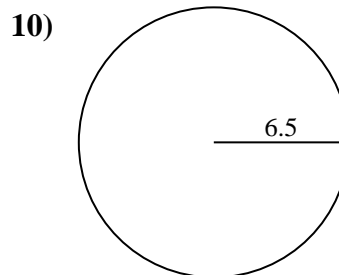
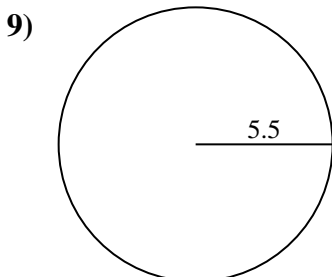
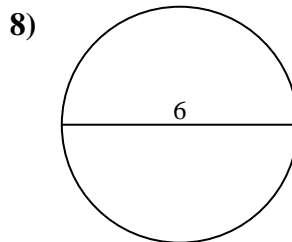
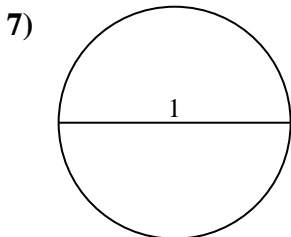
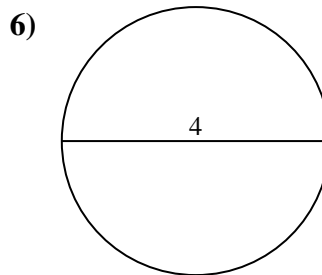
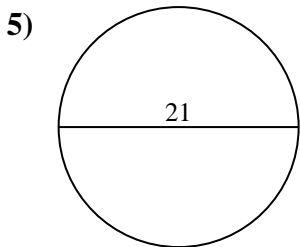
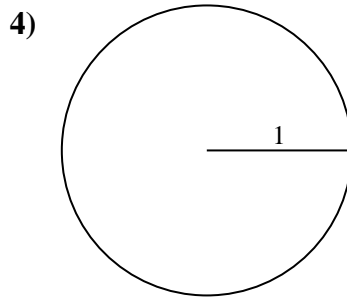
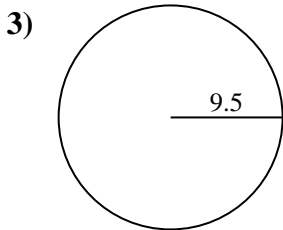
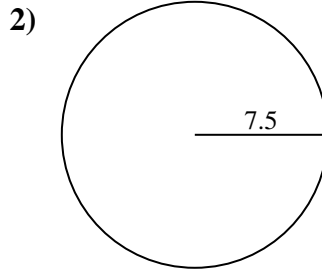
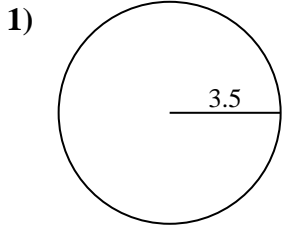
9c. \_\_\_\_\_

10a. \_\_\_\_\_

10c. \_\_\_\_\_



Find the area and circumference of each circle. Circles are not to scale.



Answers

1a. 38.48

1c. 21.99

2a. 176.71

2c. 47.12

3a. 283.53

3c. 59.69

4a. 3.14

4c. 6.28

5a. 346.36

5c. 65.97

6a. 12.57

6c. 12.57

7a. 0.79

7c. 3.14

8a. 28.27

8c. 18.85

9a. 95.03

9c. 34.56

10a. 132.73

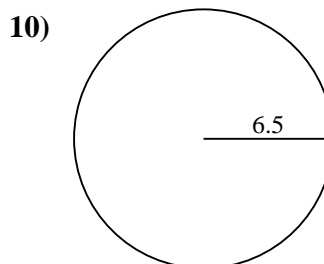
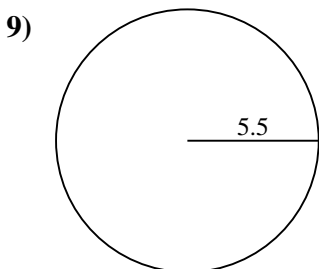
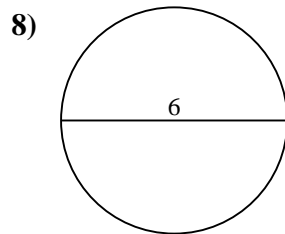
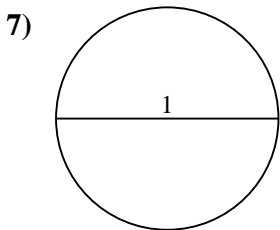
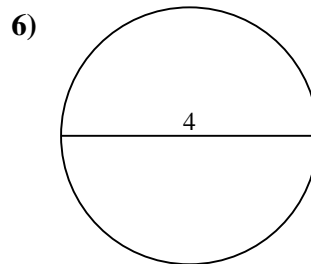
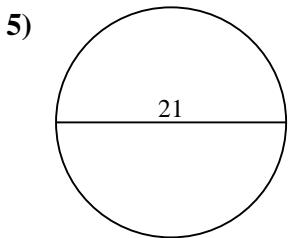
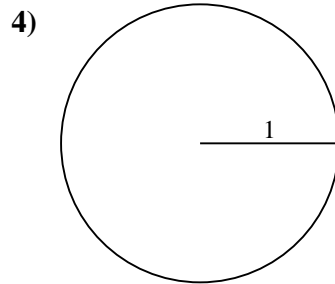
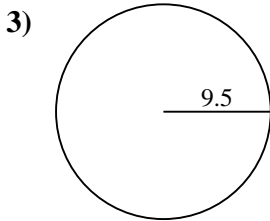
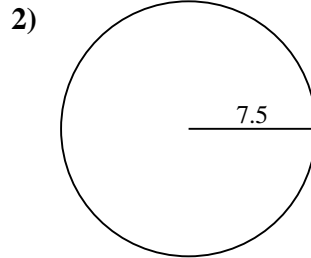
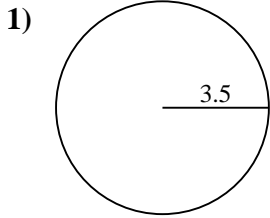
10c. 40.84



Find the area and circumference of each circle. Circles are not to scale.

38.48	3.14	21.99	65.97	18.85
59.69	34.56	12.57	346.36	283.53
176.71	47.12	3.14	12.57	0.79
6.28	28.27	40.84	132.73	95.03

**Answers**



1a. \_\_\_\_\_

1c. \_\_\_\_\_

2a. \_\_\_\_\_

2c. \_\_\_\_\_

3a. \_\_\_\_\_

3c. \_\_\_\_\_

4a. \_\_\_\_\_

4c. \_\_\_\_\_

5a. \_\_\_\_\_

5c. \_\_\_\_\_

6a. \_\_\_\_\_

6c. \_\_\_\_\_

7a. \_\_\_\_\_

7c. \_\_\_\_\_

8a. \_\_\_\_\_

8c. \_\_\_\_\_

9a. \_\_\_\_\_

9c. \_\_\_\_\_

10a. \_\_\_\_\_

10c. \_\_\_\_\_