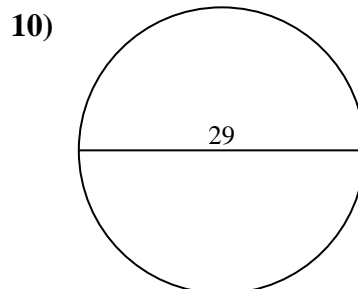
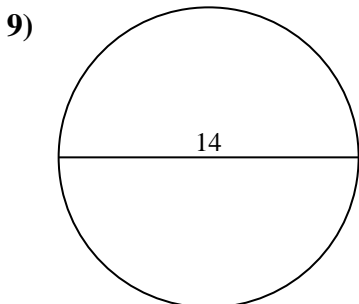
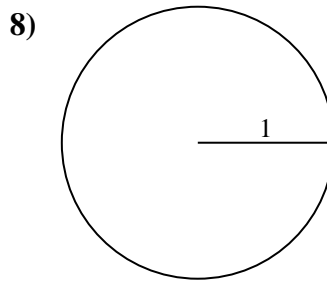
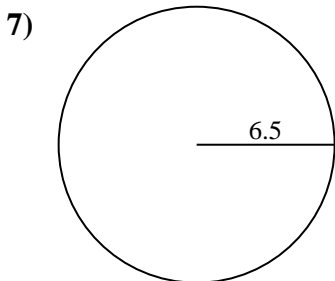
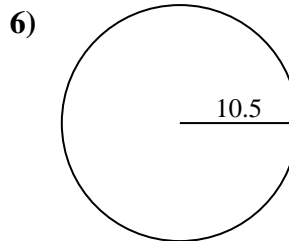
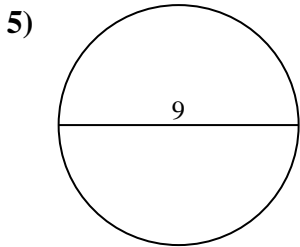
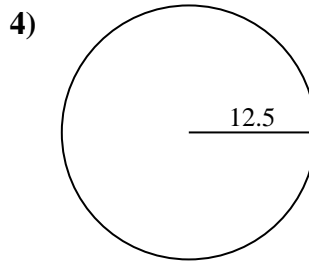
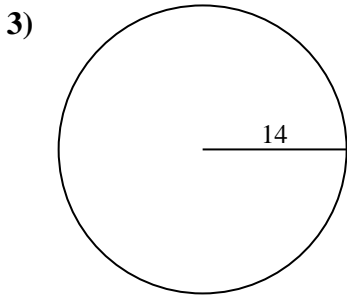
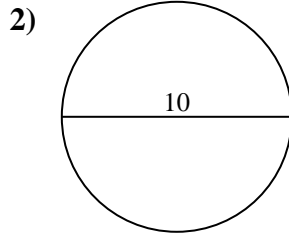
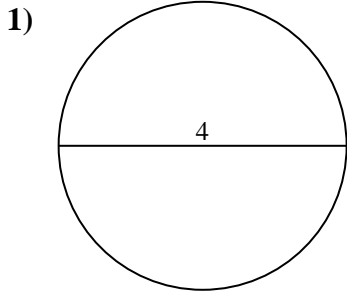




Find the area and circumference of each circle. Circles are not to scale.



Answers

1a. \_\_\_\_\_

1c. \_\_\_\_\_

2a. \_\_\_\_\_

2c. \_\_\_\_\_

3a. \_\_\_\_\_

3c. \_\_\_\_\_

4a. \_\_\_\_\_

4c. \_\_\_\_\_

5a. \_\_\_\_\_

5c. \_\_\_\_\_

6a. \_\_\_\_\_

6c. \_\_\_\_\_

7a. \_\_\_\_\_

7c. \_\_\_\_\_

8a. \_\_\_\_\_

8c. \_\_\_\_\_

9a. \_\_\_\_\_

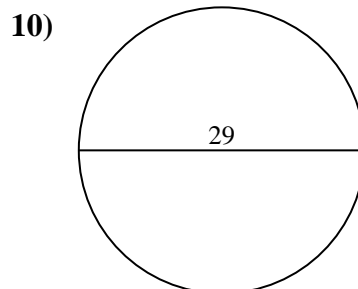
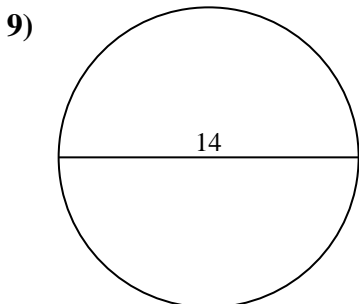
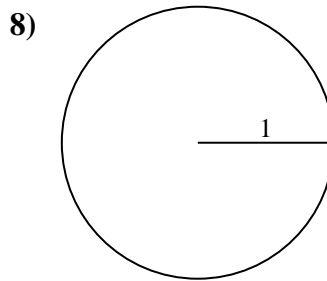
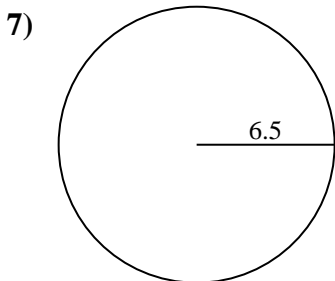
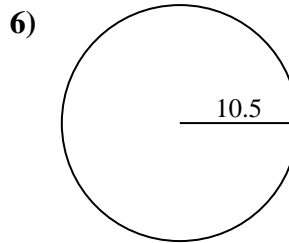
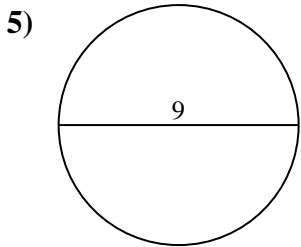
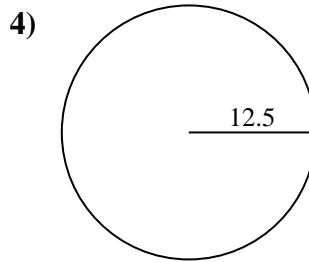
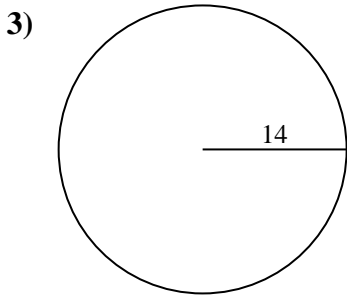
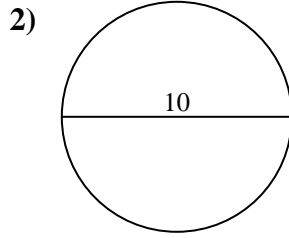
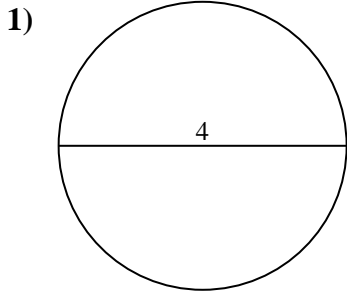
9c. \_\_\_\_\_

10a. \_\_\_\_\_

10c. \_\_\_\_\_



Find the area and circumference of each circle. Circles are not to scale.



**Answers**

1a. 12.57

1c. 12.57

2a. 78.54

2c. 31.42

3a. 615.75

3c. 87.96

4a. 490.87

4c. 78.54

5a. 63.62

5c. 28.27

6a. 346.36

6c. 65.97

7a. 132.73

7c. 40.84

8a. 3.14

8c. 6.28

9a. 153.94

9c. 43.98

10a. 660.52

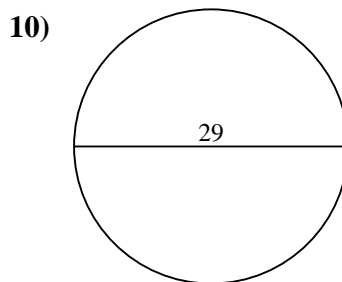
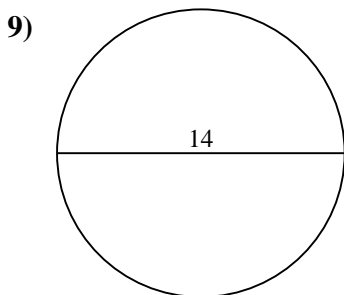
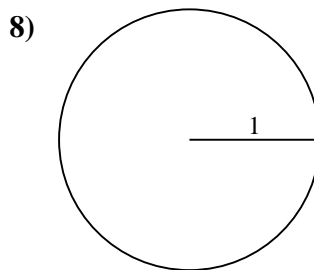
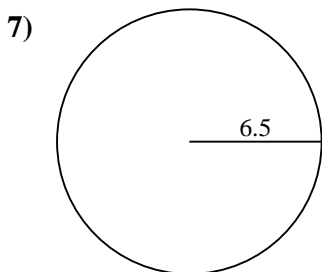
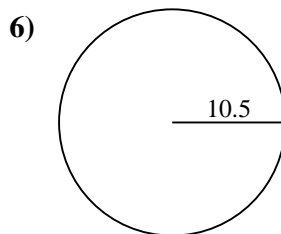
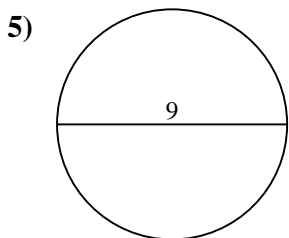
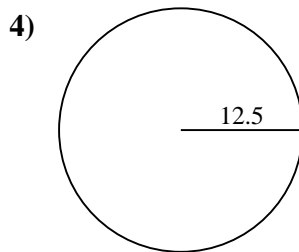
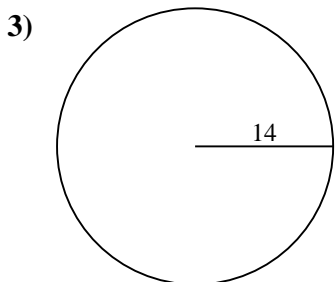
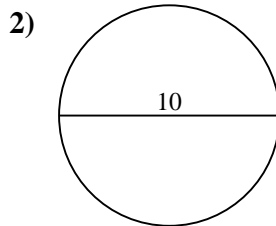
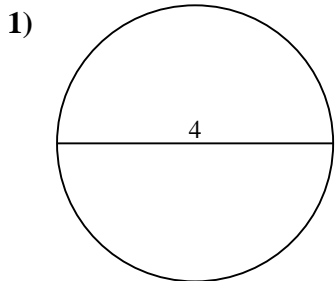
10c. 91.11



Find the area and circumference of each circle. Circles are not to scale.

**Answers**

65.97	63.62	31.42	43.98	78.54
132.73	660.52	346.36	28.27	87.96
12.57	91.11	78.54	153.94	6.28
40.84	3.14	490.87	615.75	12.57



1a. \_\_\_\_\_

1c. \_\_\_\_\_

2a. \_\_\_\_\_

2c. \_\_\_\_\_

3a. \_\_\_\_\_

3c. \_\_\_\_\_

4a. \_\_\_\_\_

4c. \_\_\_\_\_

5a. \_\_\_\_\_

5c. \_\_\_\_\_

6a. \_\_\_\_\_

6c. \_\_\_\_\_

7a. \_\_\_\_\_

7c. \_\_\_\_\_

8a. \_\_\_\_\_

8c. \_\_\_\_\_

9a. \_\_\_\_\_

9c. \_\_\_\_\_

10a. \_\_\_\_\_

10c. \_\_\_\_\_