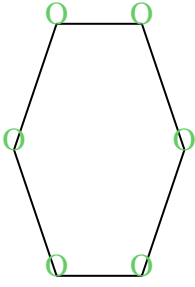


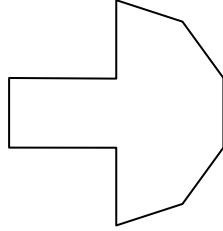


Count the number of Acute, Obtuse and Right and Reflex angles in each shape.

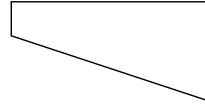
Ex)



1)



2)



Answers

A O R X

Ex. 0 6 0 0

1. _____

2. _____

3. _____

4. _____

5. _____

6. _____

7. _____


8. _____

9. _____

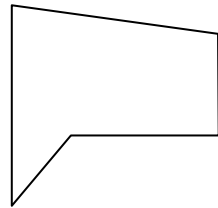
10. _____

11. _____

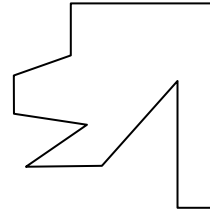
3)



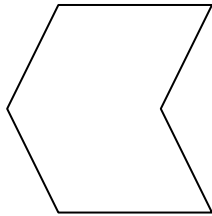
4)



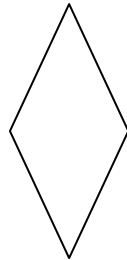
5)



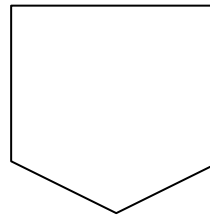
6)



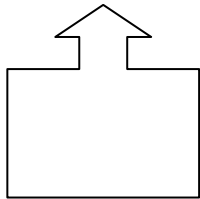
7)



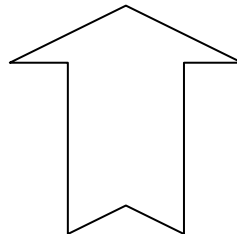
8)



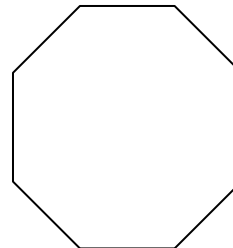
9)



10)



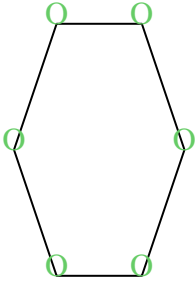
11)



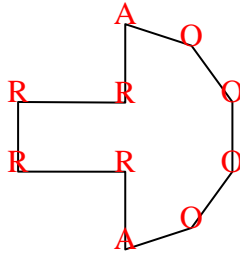


Count the number of Acute, Obtuse and Right and Reflex angles in each shape.

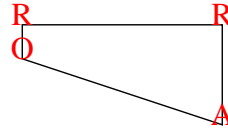
Ex)



1)



2)



Answers

A O R X

Ex. 0 6 0 0

1. 2 4 4 0

2. 1 1 2 0

3. 2 4 1 2

4. 2 1 1 1

5. 1 3 4 3

6. 2 3 0 1

7. 2 2 0 0

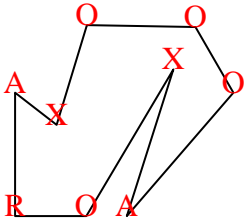
8. 0 3 2 0

9. 2 1 4 4

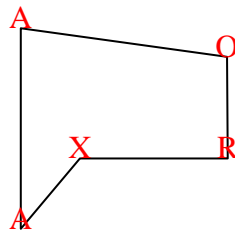
10. 4 1 0 3

11. 0 8 0 0

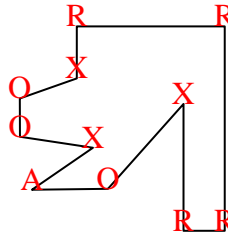
3)



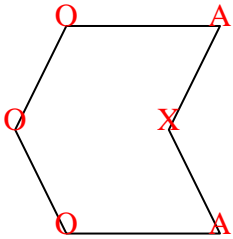
4)



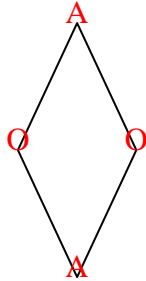
5)



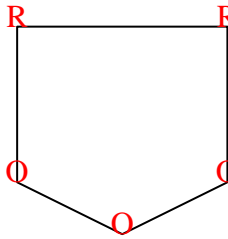
6)



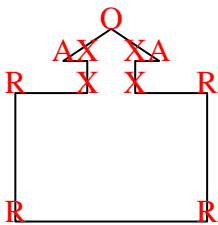
7)



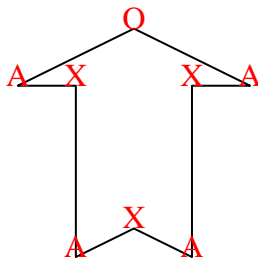
8)



9)



10)



11)

