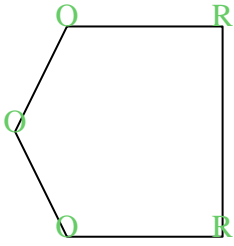




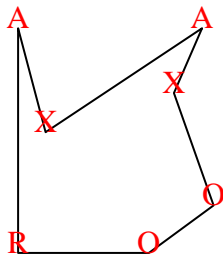


Count the number of Acute, Obtuse and Right and Reflex angles in each shape.

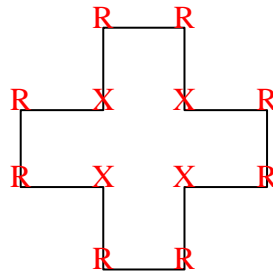
Ex)



1)



2)



**Answers**

A O R X

Ex. 0 3 2 0

1. 2 2 1 2

2. 0 0 8 4

3. 2 0 1 0

4. 4 1 0 3

5. 2 4 4 0

6. 0 0 4 0

7. 2 2 0 1

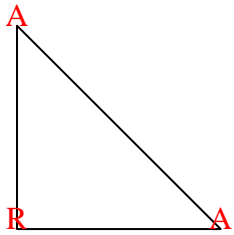
8. 4 2 0 4

9. 0 2 3 0

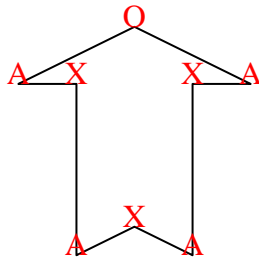
10. 1 2 1 0

11. 0 6 0 0

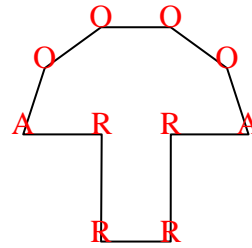
3)




4)



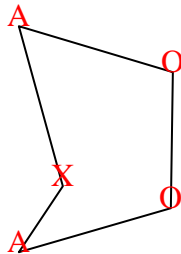
5)



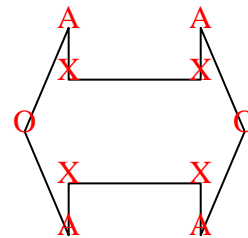
6)



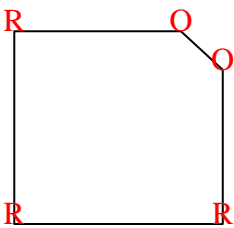
7)



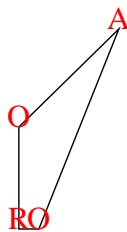
8)



9)



10)



11)

