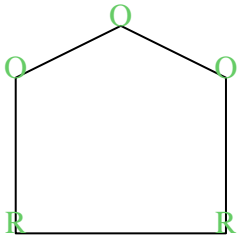





Count the number of Acute, Obtuse and Right and Reflex angles in each shape.

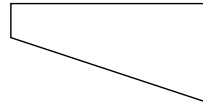
Ex)



1)



2)



Answers

A O R X

Ex. 0 3 2 0

1. _____

2. _____

3. _____

4. _____

5. _____

6. _____

7. _____

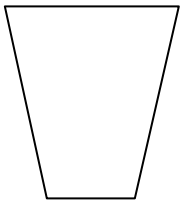
8. _____

9. _____

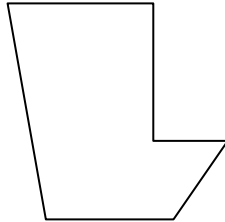
10. _____

11. _____


3)



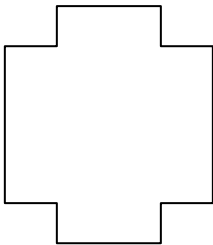
4)



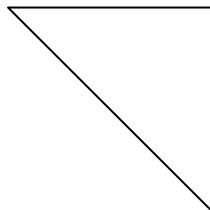
5)



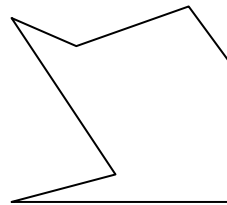
6)



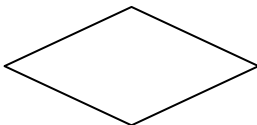
7)



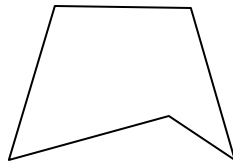
8)



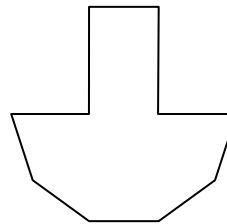
9)



10)



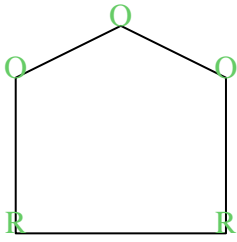
11)



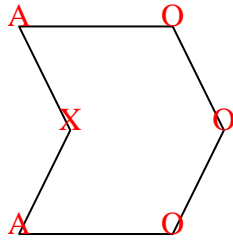


Count the number of Acute, Obtuse and Right and Reflex angles in each shape.

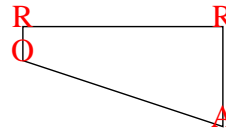
Ex)



1)



2)



Answers

A O R X

Ex. 0 3 2 0

1. 2 3 0 1

2. 1 1 2 0

3. 2 2 0 0

4. 2 2 1 1

5. 0 0 4 0

6. 0 0 8 4

7. 2 0 1 0

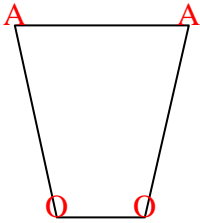
8. 2 2 1 2

9. 2 2 0 0

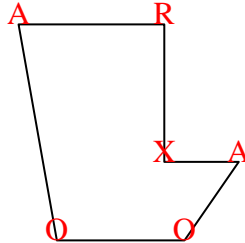
10. 2 2 0 1

11. 2 4 4 0


3)



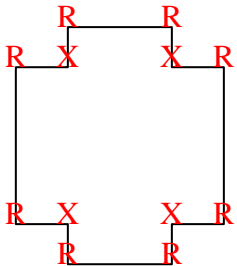
4)



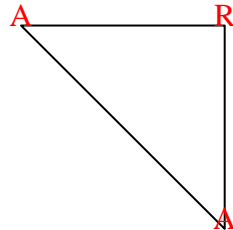
5)



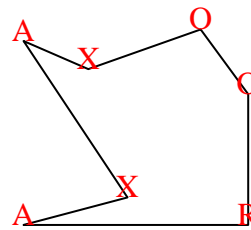
6)



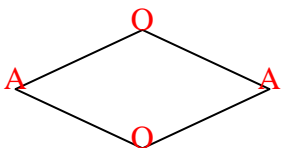
7)



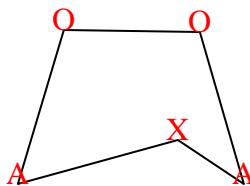
8)



9)



10)



11)

