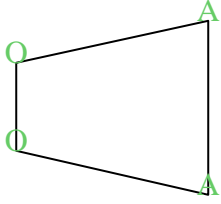





Count the number of Acute, Obtuse and Right and Reflex angles in each shape.

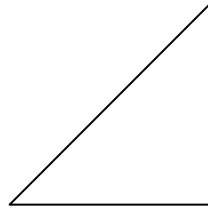
Ex)



1)



2)



Answers

A O R X

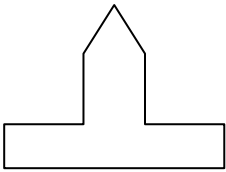
Ex. 2 2 0 0

1. _____

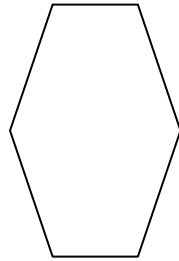
2. _____

3. _____

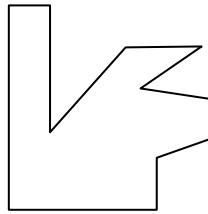
3)



4)



5)



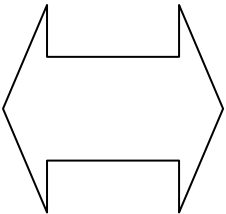
4. _____

5. _____

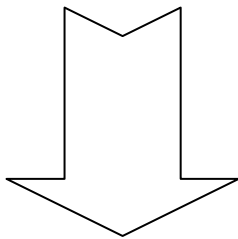
6. _____

7. _____


6)



7)



8)



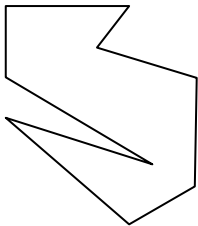
8. _____

9. _____

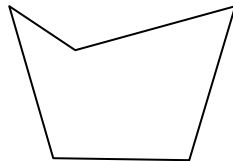
10. _____

11. _____


9)



10)



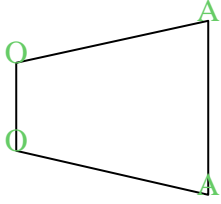
11)



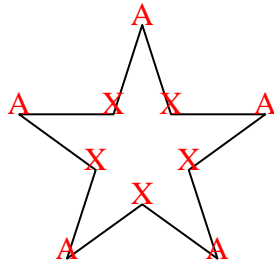


Count the number of Acute, Obtuse and Right and Reflex angles in each shape.

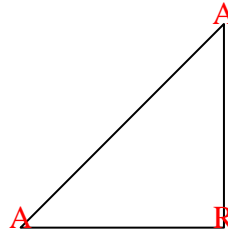
Ex)



1)



2)



Answers

A O R X

Ex. 2 2 0 0

1. 5 0 0 5

2. 2 0 1 0

3. 1 2 4 2

4. 0 6 0 0

5. 1 3 4 3

6. 4 2 0 4

7. 4 1 0 3

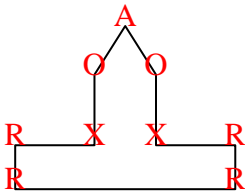
8. 0 0 4 0

9. 2 4 1 2

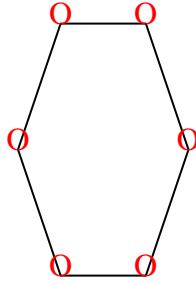
10. 2 2 0 1

11. 0 0 4 0

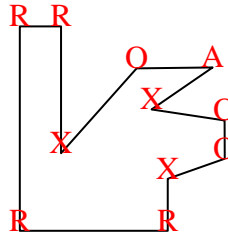
3)



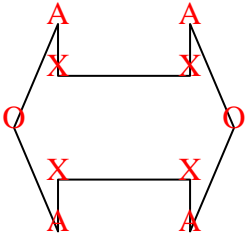
4)



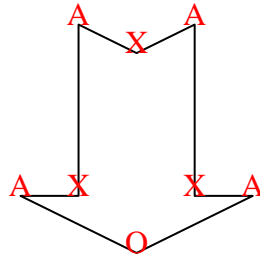
5)




6)



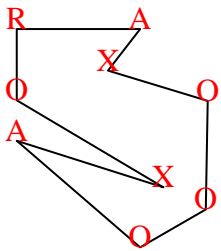
7)



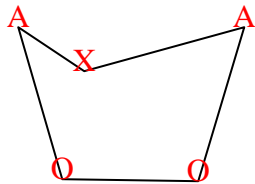
8)



9)



10)



11)

