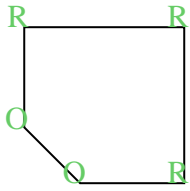


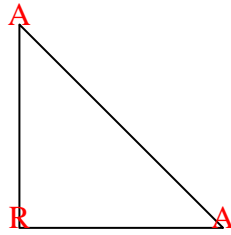


Count the number of Acute, Obtuse and Right angles inside each shape.

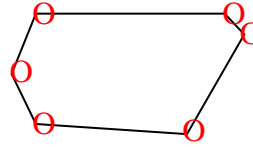
Ex)



1)



2)

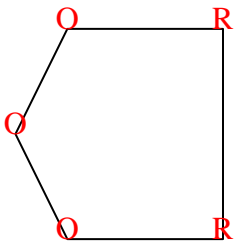


Answers

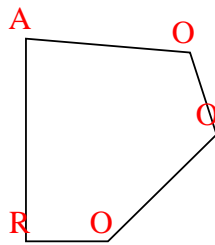
A O R

	A	O	R
Ex.	0	2	3
1.	2	0	1
2.	0	6	0
3.	0	3	2
4.	1	3	1
5.	1	1	2
6.	0	8	0
7.	0	0	4
8.	0	0	4
9.	0	2	3
10.	1	4	0
11.	2	2	0

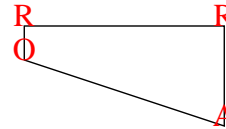
3)



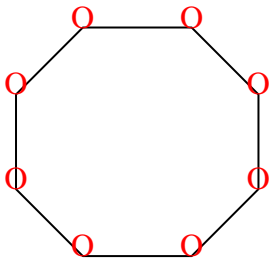
4)



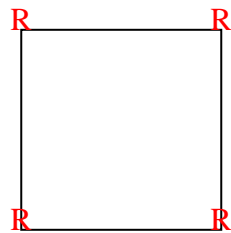
5)




6)



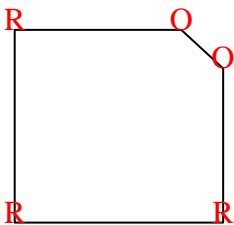
7)



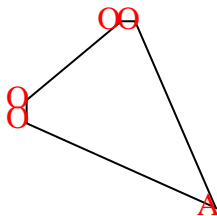
8)



9)



10)



11)

