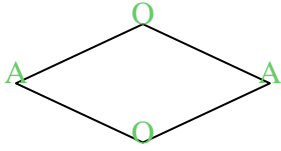




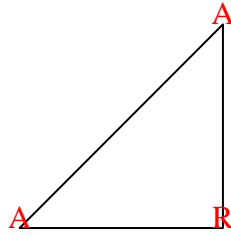


Count the number of Acute, Obtuse and Right angles inside each shape.

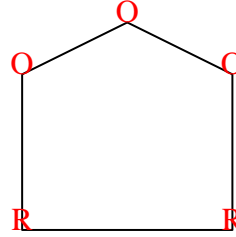
Ex)



1)



2)



Answers

A O R

Ex. 2 2 0

1. 2 0 1

2. 0 3 2

3. 0 6 0

4. 0 4 2

5. 0 2 3

6. 0 0 4

7. 1 2 1

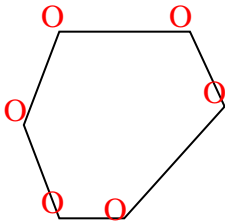
8. 0 7 0

9. 1 4 0

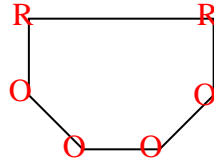
10. 1 1 2

11. 3 0 0

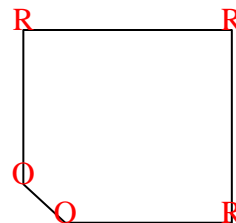
3)




4)



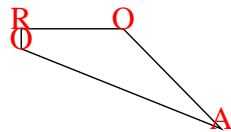
5)



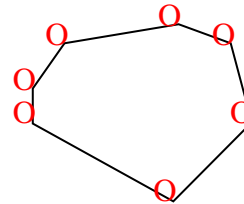
6)



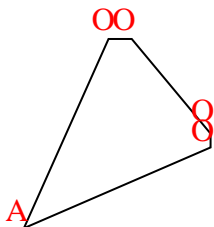
7)



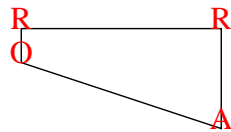
8)



9)



10)



11)

