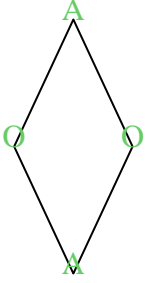


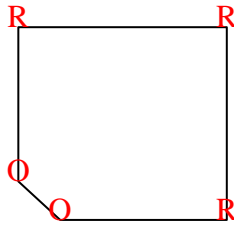


Count the number of Acute, Obtuse and Right angles inside each shape.

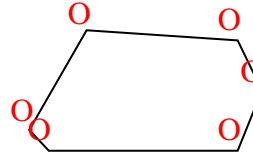
Ex)



1)



2)

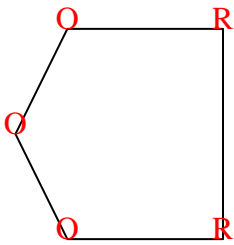


Answers

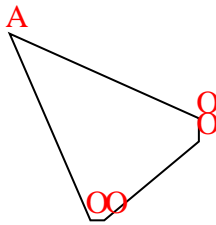
A O R

	A	O	R
Ex.	2	2	0
1.	0	2	3
2.	0	6	0
3.	0	3	2
4.	1	4	0
5.	1	3	1
6.	1	1	2
7.	2	0	1
8.	3	0	0
9.	1	2	1
10.	0	4	2
11.	0	6	0

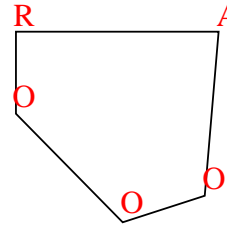
3)



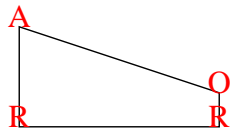
4)



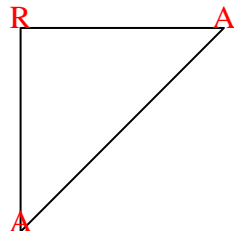
5)



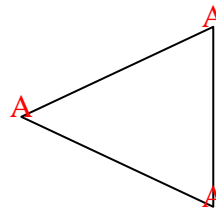
6)



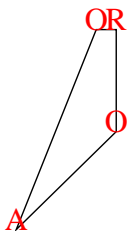
7)



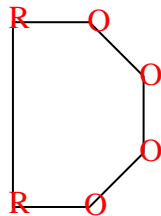
8)



9)



10)



11)

