



Determine if the angle shown is acute, obtuse, right or straight.

Answers

Ex)



1)



2)



Ex. acute

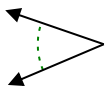
1. _____

2. _____

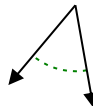
3)



4)



5)

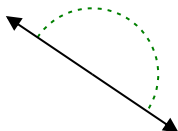


3. _____

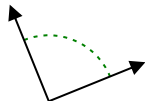
4. _____

5. _____

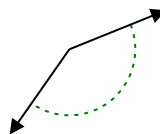
6)



7)



8)

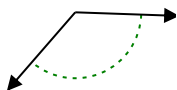


6. _____

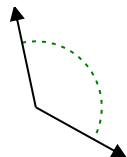
7. _____

8. _____

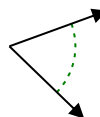
9)



10)



11)

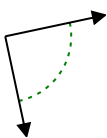


9. _____

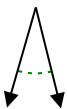
10. _____

11. _____

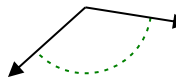
12)



13)



14)

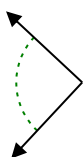


12. _____

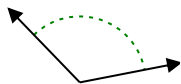
13. _____

14. _____

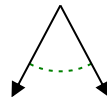
15)



16)



17)



15. _____

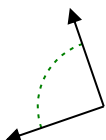
16. _____

17. _____

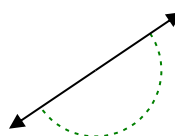
18)



19)



20)



18. _____

19. _____

20. _____



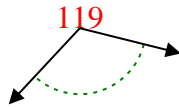
Determine if the angle shown is acute, obtuse, right or straight.

Answers

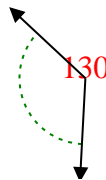
Ex)



1)



2)



Ex.

acute

1.

obtuse

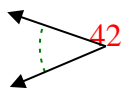
2.

obtuse

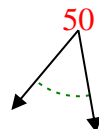
3)



4)



5)



3.

acute

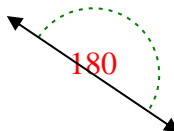
4.

acute

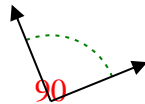
5.

acute

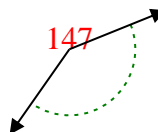
6)



7)



8)



6.

straight

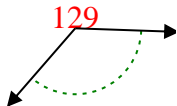
7.

right

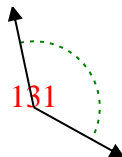
8.

obtuse

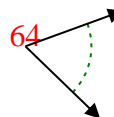
9)



10)



11)



9.

obtuse

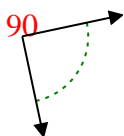
10.

obtuse

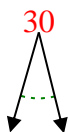
11.

acute

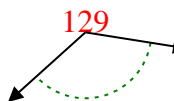
12)



13)



14)



12.

right

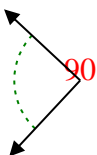
13.

acute

14.

obtuse

15)



16)



17)



15.

right

16.

obtuse

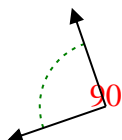
17.

acute

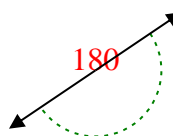
18)



19)



20)



18.

acute

19.

right

20.

straight