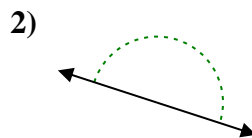
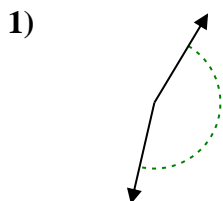
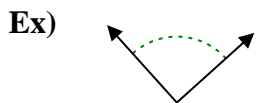




Determine if the angle shown is acute, obtuse, right or straight.



Answers

Ex. right

1. _____

2. _____

3. _____

4. _____

5. _____

6. _____

7. _____

8. _____

9. _____

10. _____

11. _____

12. _____

13. _____

14. _____

15. _____

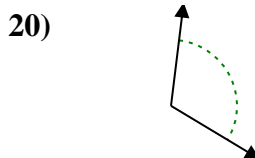
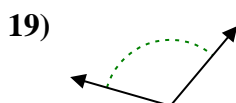
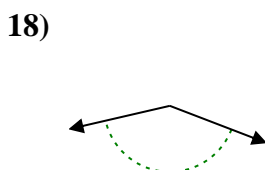
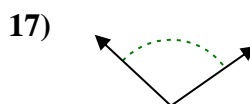
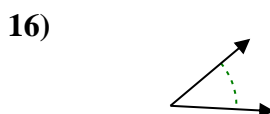
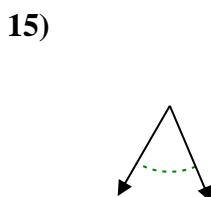
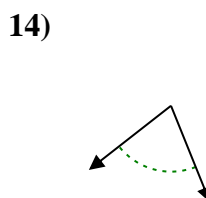
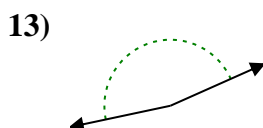
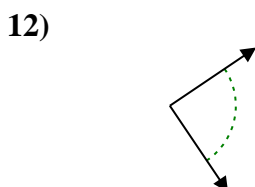
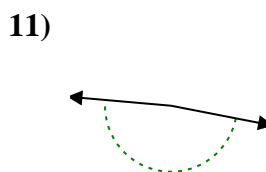
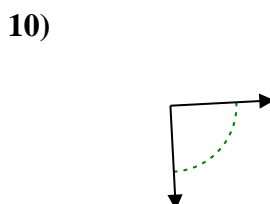
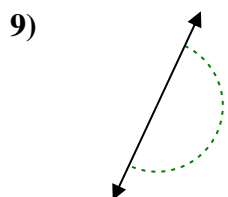
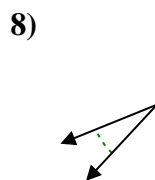
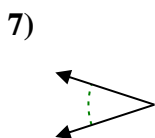
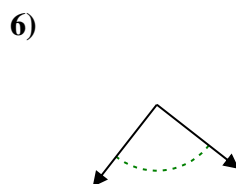
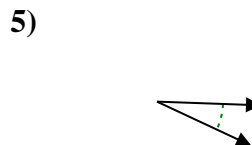
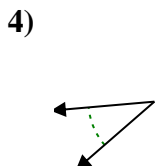
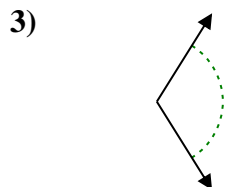
16. _____

17. _____

18. _____

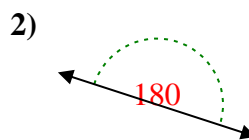
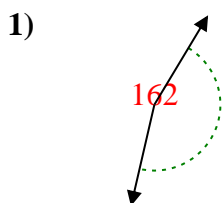
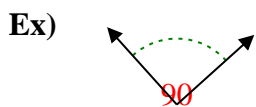
19. _____

20. _____





Determine if the angle shown is acute, obtuse, right or straight.



Answers

Ex. right

1. obtuse

2. straight

3. obtuse

4. acute

5. acute

6. right

7. acute

8. acute

9. straight

10. right

11. obtuse

12. right

13. obtuse

14. acute

15. acute

16. acute

17. obtuse

18. obtuse

19. obtuse

20. obtuse

