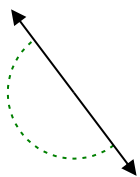


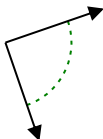


Determine if the angle shown is acute, obtuse, right or straight.

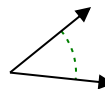
Ex)



1)



2)

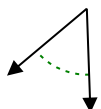


Ex. straight

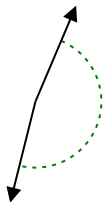
1. _____

2. _____

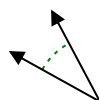
3)



4)



5)



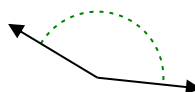
3. _____

4. _____

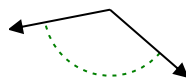
6)



7)



8)



5. _____

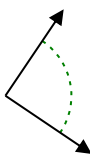
6. _____

7. _____

9)



10)



11)



8. _____

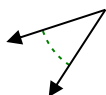
9. _____

10. _____

12)



13)



14)

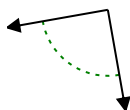


11. _____

12. _____

13. _____

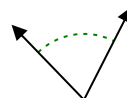
15)



16)



17)



14. _____

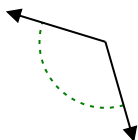
15. _____

16. _____

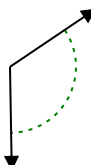
18)



19)



20)



17. _____

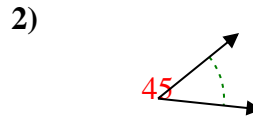
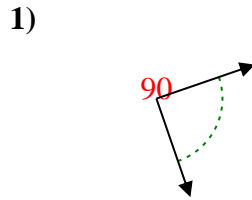
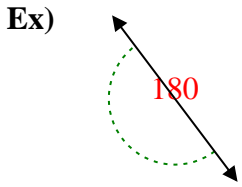
18. _____

19. _____

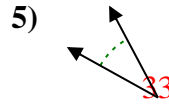
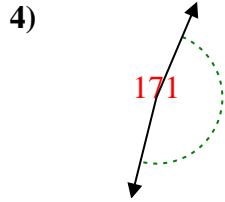
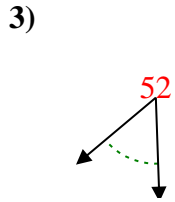
20. _____



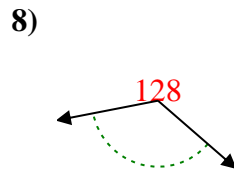
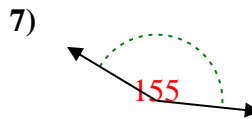
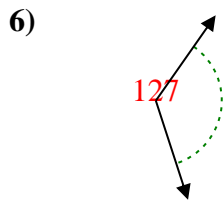
Determine if the angle shown is acute, obtuse, right or straight.



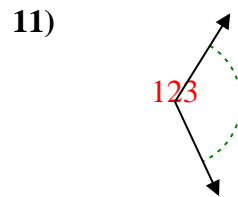
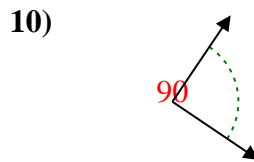
Answers
Ex. straight



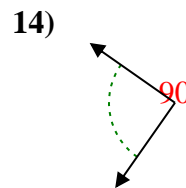
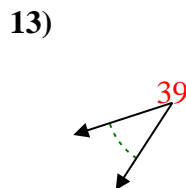
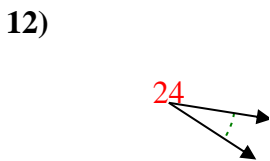
1. right



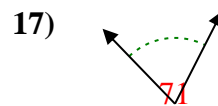
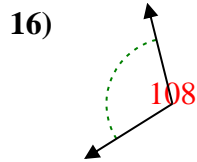
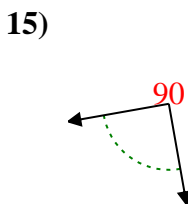
2. acute



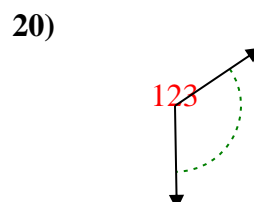
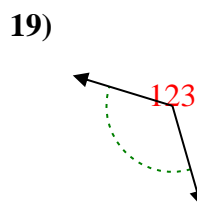
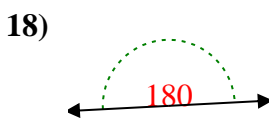
3. acute



4. obtuse



5. acute



6. obtuse

7. obtuse

8. obtuse

9. acute

10. right

11. obtuse

12. acute

13. acute

14. right

15. right

16. obtuse

17. acute

18. straight

19. obtuse

20. obtuse