



Determine if the angle shown is 'less', 'more' or 'equal' to 90°.

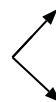
Ex)



1)



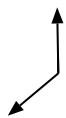
2)



Ex.

less

3)



4)



5)



6)



7)



8)



9)



10)



11)



12)



13)



14)



15)



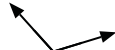
16)



17)



18)



19)



20)



- 1. \_\_\_\_\_
- 2. \_\_\_\_\_
- 3. \_\_\_\_\_
- 4. \_\_\_\_\_
- 5. \_\_\_\_\_
- 6. \_\_\_\_\_
- 7. \_\_\_\_\_
- 8. \_\_\_\_\_
- 9. \_\_\_\_\_
- 10. \_\_\_\_\_
- 11. \_\_\_\_\_
- 12. \_\_\_\_\_
- 13. \_\_\_\_\_
- 14. \_\_\_\_\_
- 15. \_\_\_\_\_
- 16. \_\_\_\_\_
- 17. \_\_\_\_\_
- 18. \_\_\_\_\_
- 19. \_\_\_\_\_
- 20. \_\_\_\_\_



Determine if the angle shown is 'less', 'more' or 'equal' to 90°.

Ex)



1)



2)



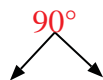
Answers

Ex. less

3)



4)



5)



1. more

6)



7)



8)



2. equal

3. more

9)



10)



11)



4. equal

5. equal

6. less

7. equal

8. less

9. less

10. less

11. equal

12)



13)



14)



12. equal

13. more

14. more

15)



16)



17)



15. less

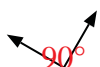
16. less

17. more

18)



19)



20)



18. more

19. equal

20. equal