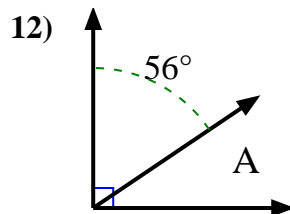
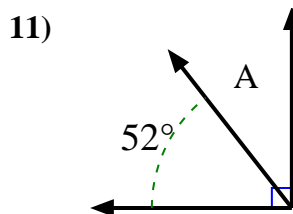
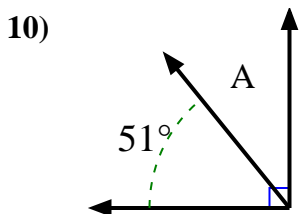
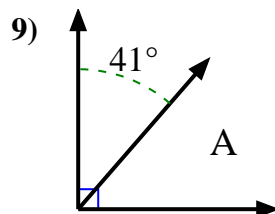
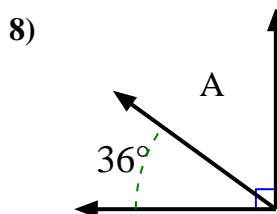
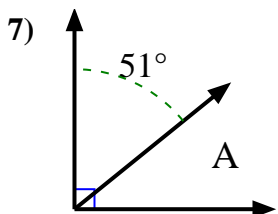
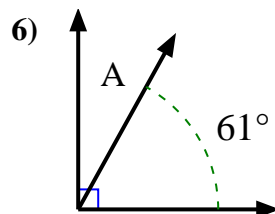
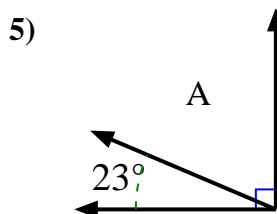
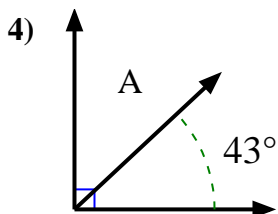
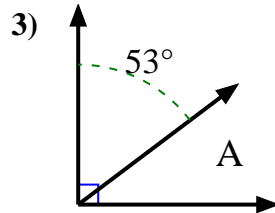
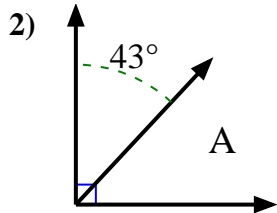
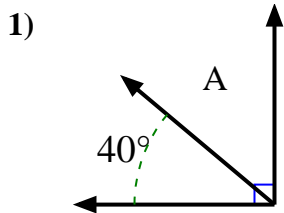




Find the value of 'A' in the set of complementary angles.



Answers

1. \_\_\_\_\_

2. \_\_\_\_\_

3. \_\_\_\_\_

4. \_\_\_\_\_

5. \_\_\_\_\_

6. \_\_\_\_\_

7. \_\_\_\_\_

8. \_\_\_\_\_

9. \_\_\_\_\_

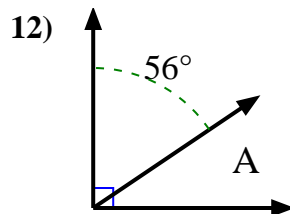
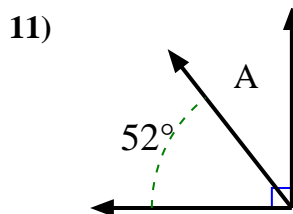
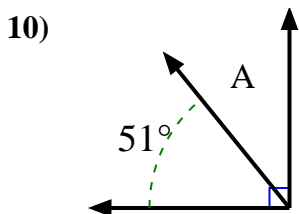
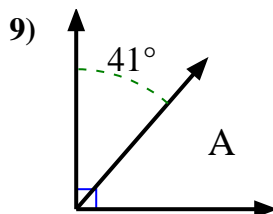
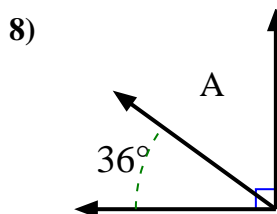
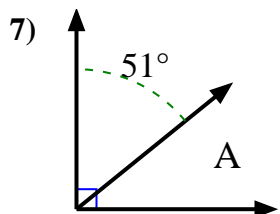
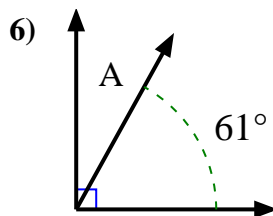
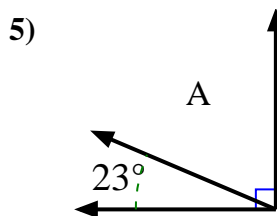
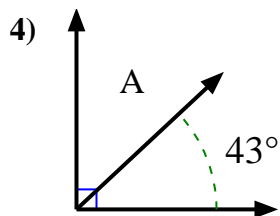
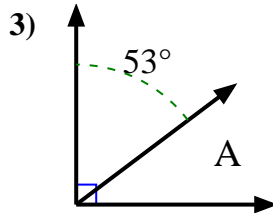
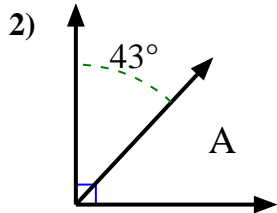
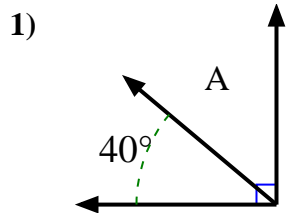
10. \_\_\_\_\_

11. \_\_\_\_\_

12. \_\_\_\_\_



Find the value of 'A' in the set of complementary angles.



Answers

1. 50°

2. 47°

3. 37°

4. 47°

5. 67°

6. 29°

7. 39°

8. 54°

9. 49°

10. 39°

11. 38°

12. 34°