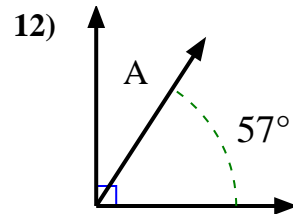
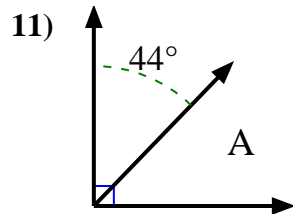
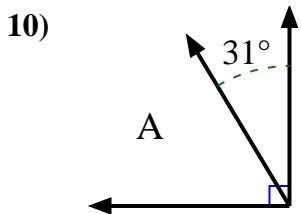
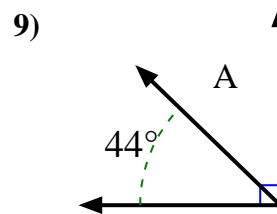
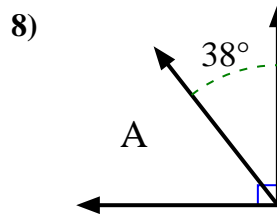
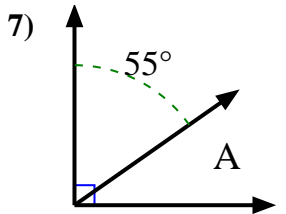
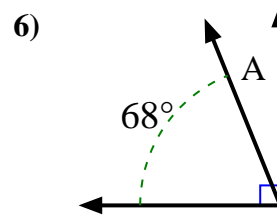
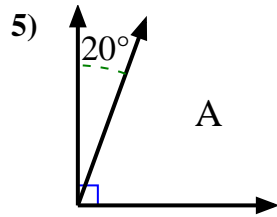
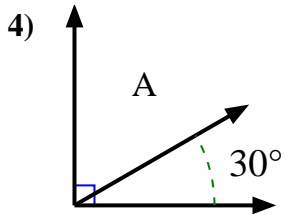
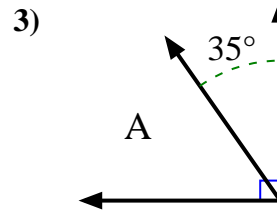
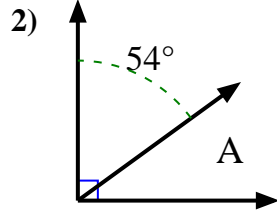
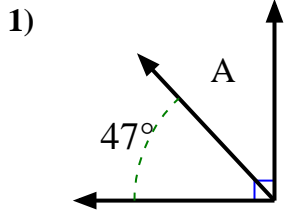




Find the value of 'A' in the set of complementary angles.

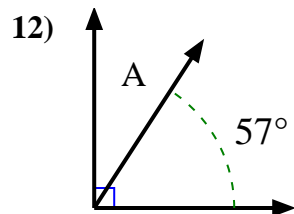
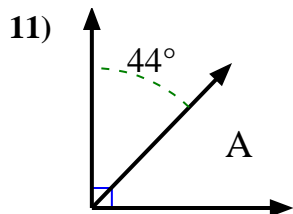
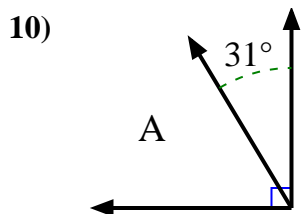
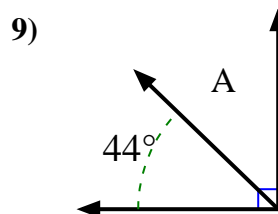
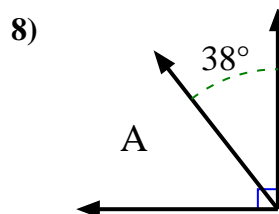
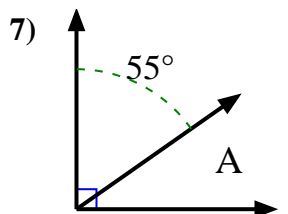
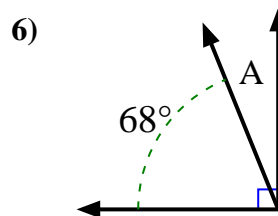
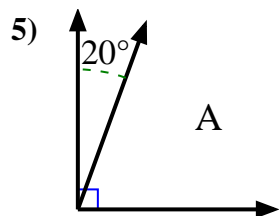
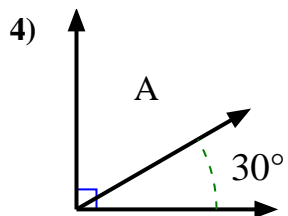
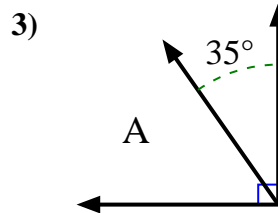
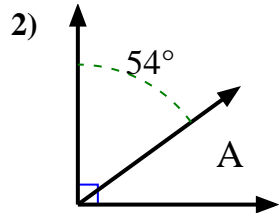
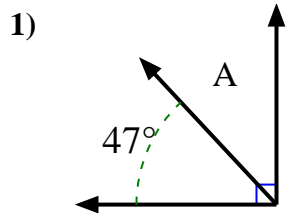


Answers

1. \_\_\_\_\_
2. \_\_\_\_\_
3. \_\_\_\_\_
4. \_\_\_\_\_
5. \_\_\_\_\_
6. \_\_\_\_\_
7. \_\_\_\_\_
8. \_\_\_\_\_
9. \_\_\_\_\_
10. \_\_\_\_\_
11. \_\_\_\_\_
12. \_\_\_\_\_



Find the value of 'A' in the set of complementary angles.



Answers

1. 43°

2. 36°

3. 55°

4. 60°

5. 70°

6. 22°

7. 35°

8. 52°

9. 46°

10. 59°

11. 46°

12. 33°