




Solve each problem.

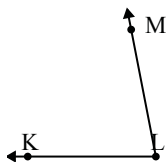
1)



Which choice best represents $\angle ABC$?

- A. 67°
- B. 142°
- C. 100°
- D. 15°

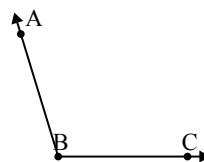
2)



Which choice best represents $\angle KLM$?

- A. 176°
- B. 79°
- C. 138°
- D. 21°

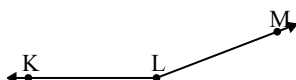
3)



Which choice best represents $\angle ABC$?

- A. 107°
- B. 180°
- C. 1°
- D. 41°

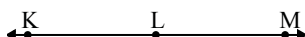
4)



Which choice best represents $\angle KLM$?

- A. 107°
- B. 82°
- C. 159°
- D. 0°

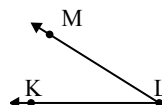
5)



Which choice best represents $\angle KLM$?

- A. 180°
- B. 51°
- C. 21°
- D. 84°

6)



Which choice best represents $\angle KLM$?

- A. 10°
- B. 62°
- C. 160°
- D. 32°

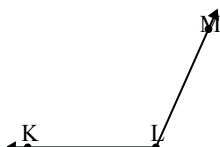
7)



Which choice best represents $\angle ABC$?

- A. 127°
- B. 18°
- C. 180°
- D. 98°

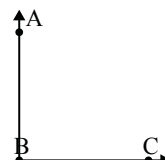
8)



Which choice best represents $\angle KLM$?

- A. 21°
- B. 160°
- C. 114°
- D. 0°

9)



Which choice best represents $\angle ABC$?

- A. 90°
- B. 115°
- C. 51°
- D. 30°


Answers

1. _____
2. _____
3. _____
4. _____
5. _____
6. _____
7. _____
8. _____
9. _____



Solve each problem.

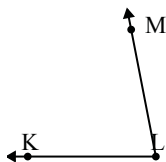
1)



Which choice best represents $\angle ABC$?

- A. 67°
- B. 142°
- C. 100°
- D. 15°

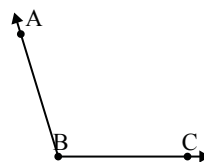
2)



Which choice best represents $\angle KLM$?

- A. 176°
- B. 79°
- C. 138°
- D. 21°

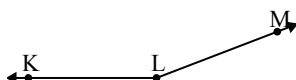
3)



Which choice best represents $\angle ABC$?

- A. 107°
- B. 180°
- C. 1°
- D. 41°

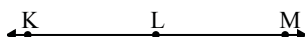
4)



Which choice best represents $\angle KLM$?

- A. 107°
- B. 82°
- C. 159°
- D. 0°

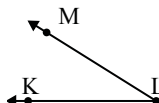
5)



Which choice best represents $\angle KLM$?

- A. 180°
- B. 51°
- C. 21°
- D. 84°

6)



Which choice best represents $\angle KLM$?

- A. 10°
- B. 62°
- C. 160°
- D. 32°

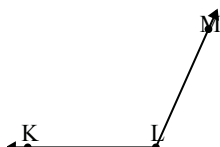
7)



Which choice best represents $\angle ABC$?

- A. 127°
- B. 18°
- C. 180°
- D. 98°

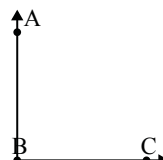
8)



Which choice best represents $\angle KLM$?

- A. 21°
- B. 160°
- C. 114°
- D. 0°

9)



Which choice best represents $\angle ABC$?

- A. 90°
- B. 115°
- C. 51°
- D. 30°

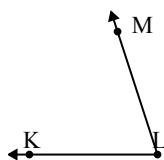
Answers

1. **D**
2. **B**
3. **A**
4. **C**
5. **A**
6. **D**
7. **B**
8. **C**
9. **A**



Solve each problem.

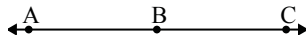
1)



Which choice best represents $\angle KLM$?

- A. 102°
- B. 72°
- C. 38°
- D. 136°

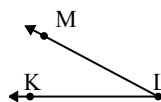
2)



Which choice best represents $\angle ABC$?

- A. 156°
- B. 24°
- C. 180°
- D. 60°

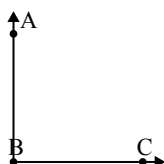
3)



Which choice best represents $\angle KLM$?

- A. 107°
- B. 145°
- C. 71°
- D. 28°

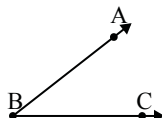
4)



Which choice best represents $\angle ABC$?

- A. 1°
- B. 46°
- C. 90°
- D. 174°

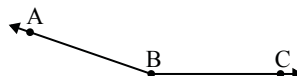
5)



Which choice best represents $\angle ABC$?

- A. 109°
- B. 12°
- C. 77°
- D. 38°

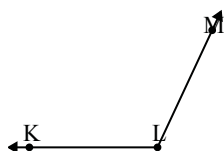
6)



Which choice best represents $\angle ABC$?

- A. 44°
- B. 95°
- C. 161°
- D. 130°

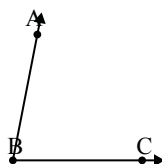
7)



Which choice best represents $\angle KLM$?

- A. 16°
- B. 50°
- C. 115°
- D. 137°

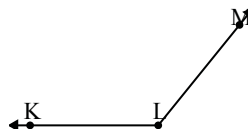
8)



Which choice best represents $\angle ABC$?

- A. 14°
- B. 163°
- C. 79°
- D. 58°

9)



Which choice best represents $\angle KLM$?

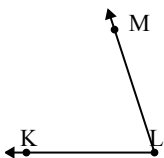
- A. 28°
- B. 76°
- C. 108°
- D. 129°

Answers

1. _____
2. _____
3. _____
4. _____
5. _____
6. _____
7. _____
8. _____
9. _____

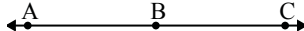


Solve each problem.

1) 

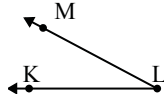
Which choice best represents $\angle KLM$?

A. 102°
 B. 72°
 C. 38°
 D. 136°

2) 

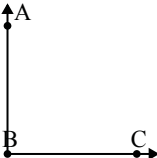
Which choice best represents $\angle ABC$?

A. 156°
 B. 24°
 C. 180°
 D. 60°

3) 

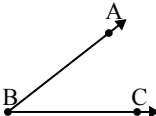
Which choice best represents $\angle KLM$?

A. 107°
 B. 145°
 C. 71°
 D. 28°

4) 

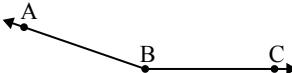
Which choice best represents $\angle ABC$?

A. 1°
 B. 46°
 C. 90°
 D. 174°

5) 

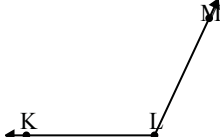
Which choice best represents $\angle ABC$?

A. 109°
 B. 12°
 C. 77°
 D. 38°

6) 

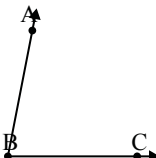
Which choice best represents $\angle ABC$?

A. 44°
 B. 95°
 C. 161°
 D. 130°

7) 

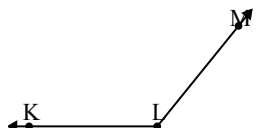
Which choice best represents $\angle KLM$?

A. 16°
 B. 50°
 C. 115°
 D. 137°

8) 

Which choice best represents $\angle ABC$?

A. 14°
 B. 163°
 C. 79°
 D. 58°

9) 

Which choice best represents $\angle KLM$?

A. 28°
 B. 76°
 C. 108°
 D. 129°

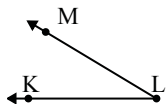
Answers

1. **B**
2. **C**
3. **D**
4. **C**
5. **D**
6. **C**
7. **C**
8. **C**
9. **D**



Solve each problem.

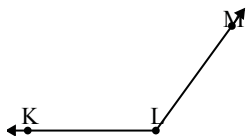
1)



Which choice best represents $\angle KLM$?

- A. 180°
- B. 57°
- C. 115°
- D. 31°

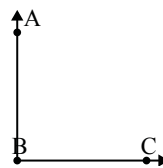
2)



Which choice best represents $\angle KLM$?

- A. 180°
- B. 103°
- C. 81°
- D. 126°

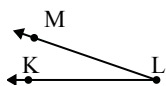
3)



Which choice best represents $\angle ABC$?

- A. 90°
- B. 151°
- C. 3°
- D. 54°

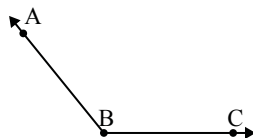
4)



Which choice best represents $\angle KLM$?

- A. 99°
- B. 19°
- C. 169°
- D. 46°

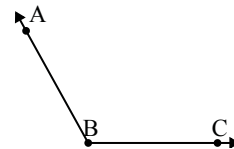
5)



Which choice best represents $\angle ABC$?

- A. 20°
- B. 47°
- C. 129°
- D. 155°

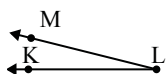
6)



Which choice best represents $\angle ABC$?

- A. 119°
- B. 98°
- C. 169°
- D. 9°

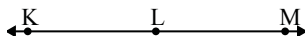
7)



Which choice best represents $\angle KLM$?

- A. 85°
- B. 14°
- C. 146°
- D. 178°

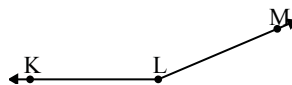
8)



Which choice best represents $\angle KLM$?

- A. 2°
- B. 153°
- C. 113°
- D. 180°

9)



Which choice best represents $\angle KLM$?

- A. 2°
- B. 112°
- C. 157°
- D. 70°

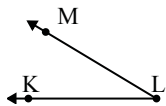
Answers

1. _____
2. _____
3. _____
4. _____
5. _____
6. _____
7. _____
8. _____
9. _____



Solve each problem.

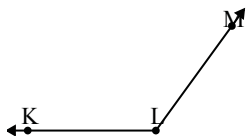
1)



Which choice best represents $\angle KLM$?

- A. 180°
- B. 57°
- C. 115°
- D. 31°

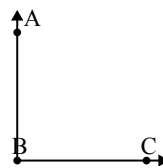
2)



Which choice best represents $\angle KLM$?

- A. 180°
- B. 103°
- C. 81°
- D. 126°

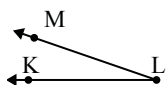
3)



Which choice best represents $\angle ABC$?

- A. 90°
- B. 151°
- C. 3°
- D. 54°

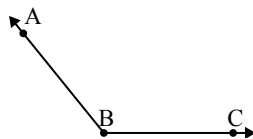
4)



Which choice best represents $\angle KLM$?

- A. 99°
- B. 19°
- C. 169°
- D. 46°

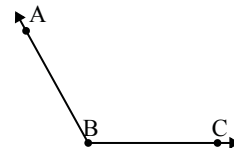
5)



Which choice best represents $\angle ABC$?

- A. 20°
- B. 47°
- C. 129°
- D. 155°

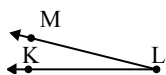
6)



Which choice best represents $\angle ABC$?

- A. 119°
- B. 98°
- C. 169°
- D. 9°

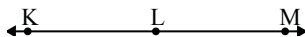
7)



Which choice best represents $\angle KLM$?

- A. 85°
- B. 14°
- C. 146°
- D. 178°

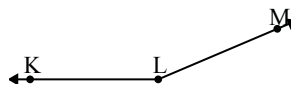
8)



Which choice best represents $\angle KLM$?

- A. 2°
- B. 153°
- C. 113°
- D. 180°

9)



Which choice best represents $\angle KLM$?

- A. 2°
- B. 112°
- C. 157°
- D. 70°

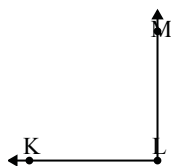
Answers

1. **D**
2. **D**
3. **A**
4. **B**
5. **C**
6. **A**
7. **B**
8. **D**
9. **C**



Solve each problem.

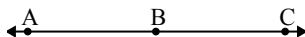
1)



Which choice best represents $\angle KLM$?

- A. 139°
- B. 7°
- C. 90°
- D. 44°

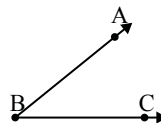
2)



Which choice best represents $\angle ABC$?

- A. 81°
- B. 16°
- C. 180°
- D. 150°

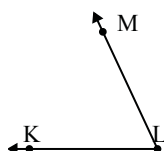
3)



Which choice best represents $\angle ABC$?

- A. 168°
- B. 88°
- C. 129°
- D. 39°

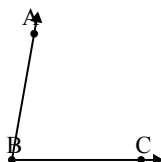
4)



Which choice best represents $\angle KLM$?

- A. 65°
- B. 8°
- C. 138°
- D. 97°

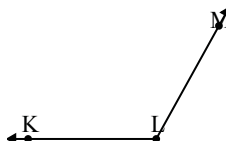
5)



Which choice best represents $\angle ABC$?

- A. 34°
- B. 80°
- C. 9°
- D. 57°

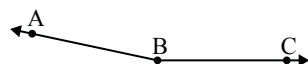
6)



Which choice best represents $\angle KLM$?

- A. 143°
- B. 119°
- C. 30°
- D. 97°

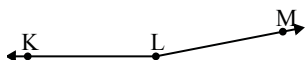
7)



Which choice best represents $\angle ABC$?

- A. 168°
- B. 115°
- C. 87°
- D. 22°

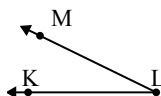
8)



Which choice best represents $\angle KLM$?

- A. 169°
- B. 68°
- C. 141°
- D. 47°

9)



Which choice best represents $\angle KLM$?

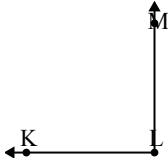
- A. 26°
- B. 117°
- C. 148°
- D. 82°

Answers

1. _____
2. _____
3. _____
4. _____
5. _____
6. _____
7. _____
8. _____
9. _____

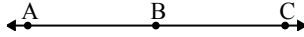


Solve each problem.

1) 

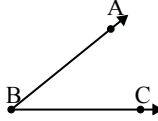
Which choice best represents $\angle KLM$?

A. 139°
 B. 7°
 C. 90°
 D. 44°

2) 

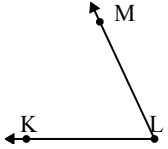
Which choice best represents $\angle ABC$?

A. 81°
 B. 16°
 C. 180°
 D. 150°

3) 

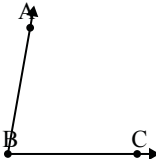
Which choice best represents $\angle ABC$?

A. 168°
 B. 88°
 C. 129°
 D. 39°

4) 

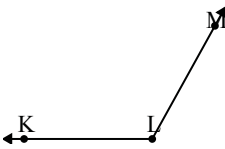
Which choice best represents $\angle KLM$?

A. 65°
 B. 8°
 C. 138°
 D. 97°

5) 


Which choice best represents $\angle ABC$?

A. 34°
 B. 80°
 C. 9°
 D. 57°

6) 

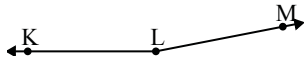
Which choice best represents $\angle KLM$?

A. 143°
 B. 119°
 C. 30°
 D. 97°

7) 

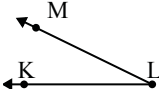
Which choice best represents $\angle ABC$?

A. 168°
 B. 115°
 C. 87°
 D. 22°

8) 

Which choice best represents $\angle KLM$?

A. 169°
 B. 68°
 C. 141°
 D. 47°

9) 

Which choice best represents $\angle KLM$?

A. 26°
 B. 117°
 C. 148°
 D. 82°

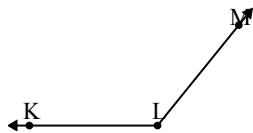
Answers

1. **C**
2. **C**
3. **D**
4. **A**
5. **B**
6. **B**
7. **A**
8. **A**
9. **A**



Solve each problem.

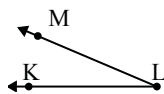
1)



Which choice best represents $\angle KLM$?

- A. 29°
- B. 65°
- C. 129°
- D. 104°

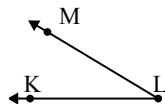
2)



Which choice best represents $\angle KLM$?

- A. 57°
- B. 178°
- C. 136°
- D. 23°

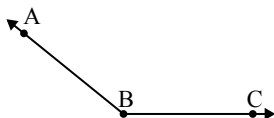
3)



Which choice best represents $\angle KLM$?

- A. 31°
- B. 171°
- C. 116°
- D. 70°

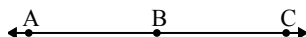
4)



Which choice best represents $\angle ABC$?

- A. 45°
- B. 115°
- C. 141°
- D. 71°

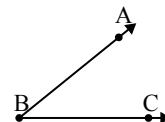
5)



Which choice best represents $\angle ABC$?

- A. 137°
- B. 65°
- C. 180°
- D. 3°

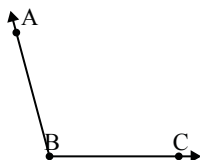
6)



Which choice best represents $\angle ABC$?

- A. 67°
- B. 90°
- C. 4°
- D. 39°

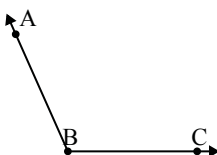
7)



Which choice best represents $\angle ABC$?

- A. 150°
- B. 180°
- C. 105°
- D. 63°

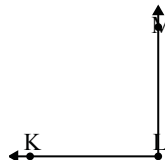
8)



Which choice best represents $\angle ABC$?

- A. 87°
- B. 3°
- C. 29°
- D. 114°

9)



Which choice best represents $\angle KLM$?

- A. 16°
- B. 127°
- C. 153°
- D. 90°

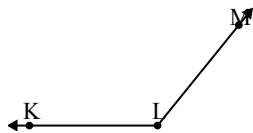
Answers

1. _____
2. _____
3. _____
4. _____
5. _____
6. _____
7. _____
8. _____
9. _____



Solve each problem.

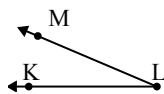
1)



Which choice best represents $\angle KLM$?

- A. 29°
- B. 65°
- C. 129°
- D. 104°

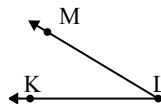
2)



Which choice best represents $\angle KLM$?

- A. 57°
- B. 178°
- C. 136°
- D. 23°

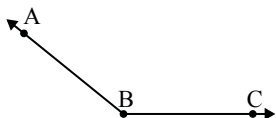
3)



Which choice best represents $\angle KLM$?

- A. 31°
- B. 171°
- C. 116°
- D. 70°

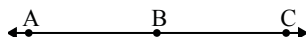
4)



Which choice best represents $\angle ABC$?

- A. 45°
- B. 115°
- C. 141°
- D. 71°

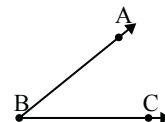
5)



Which choice best represents $\angle ABC$?

- A. 137°
- B. 65°
- C. 180°
- D. 3°

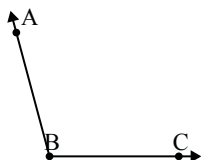
6)



Which choice best represents $\angle ABC$?

- A. 67°
- B. 90°
- C. 4°
- D. 39°

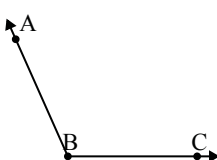
7)



Which choice best represents $\angle ABC$?

- A. 150°
- B. 180°
- C. 105°
- D. 63°

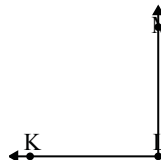
8)



Which choice best represents $\angle ABC$?

- A. 87°
- B. 3°
- C. 29°
- D. 114°

9)



Which choice best represents $\angle KLM$?

- A. 16°
- B. 127°
- C. 153°
- D. 90°

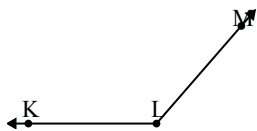
Answers

- 1. **C**
- 2. **D**
- 3. **A**
- 4. **C**
- 5. **C**
- 6. **D**
- 7. **C**
- 8. **D**
- 9. **D**



Solve each problem.

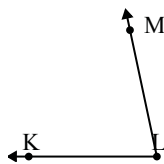
1)



Which choice best represents $\angle KLM$?

- A. 87°
- B. 162°
- C. 109°
- D. 131°

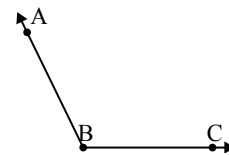
2)



Which choice best represents $\angle KLM$?

- A. 4°
- B. 78°
- C. 119°
- D. 173°

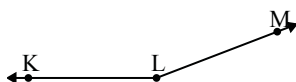
3)



Which choice best represents $\angle ABC$?

- A. 116°
- B. 166°
- C. 95°
- D. 56°

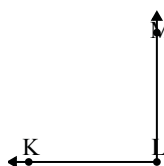
4)



Which choice best represents $\angle KLM$?

- A. 0°
- B. 50°
- C. 123°
- D. 159°

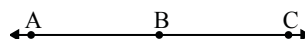
5)



Which choice best represents $\angle KLM$?

- A. 90°
- B. 161°
- C. 68°
- D. 30°

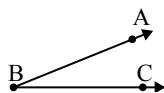
6)



Which choice best represents $\angle ABC$?

- A. 118°
- B. 63°
- C. 146°
- D. 180°

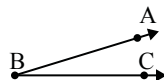
7)



Which choice best represents $\angle ABC$?

- A. 147°
- B. 22°
- C. 118°
- D. 55°

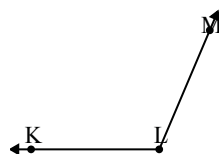
8)



Which choice best represents $\angle ABC$?

- A. 17°
- B. 50°
- C. 107°
- D. 178°

9)



Which choice best represents $\angle KLM$?

- A. 14°
- B. 113°
- C. 91°
- D. 174°

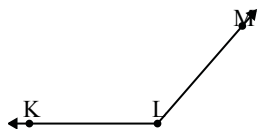
Answers

1. _____
2. _____
3. _____
4. _____
5. _____
6. _____
7. _____
8. _____
9. _____



Solve each problem.

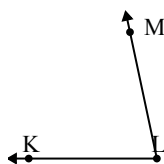
1)



Which choice best represents $\angle KLM$?

- A. 87°
- B. 162°
- C. 109°
- D. 131°

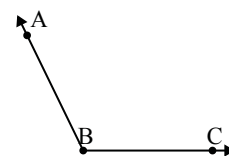
2)



Which choice best represents $\angle KLM$?

- A. 4°
- B. 78°
- C. 119°
- D. 173°

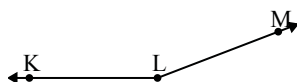
3)



Which choice best represents $\angle ABC$?

- A. 116°
- B. 166°
- C. 95°
- D. 56°

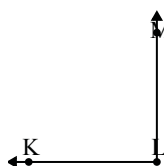
4)



Which choice best represents $\angle KLM$?

- A. 0°
- B. 50°
- C. 123°
- D. 159°

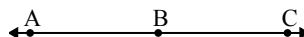
5)



Which choice best represents $\angle KLM$?

- A. 90°
- B. 161°
- C. 68°
- D. 30°

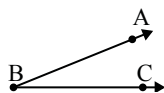
6)



Which choice best represents $\angle ABC$?

- A. 118°
- B. 63°
- C. 146°
- D. 180°

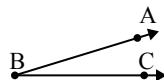
7)



Which choice best represents $\angle ABC$?

- A. 147°
- B. 22°
- C. 118°
- D. 55°

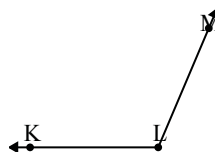
8)



Which choice best represents $\angle ABC$?

- A. 17°
- B. 50°
- C. 107°
- D. 178°

9)



Which choice best represents $\angle KLM$?

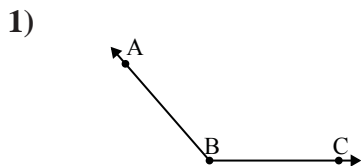
- A. 14°
- B. 113°
- C. 91°
- D. 174°

Answers

1. **D**
2. **B**
3. **A**
4. **D**
5. **A**
6. **D**
7. **B**
8. **A**
9. **B**

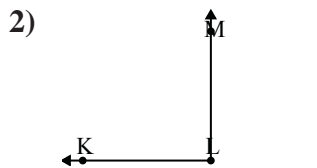


Solve each problem.



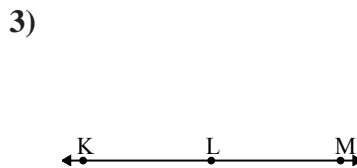
Which choice best represents $\angle ABC$?

- A. 29°
- B. 101°
- C. 68°
- D. 131°



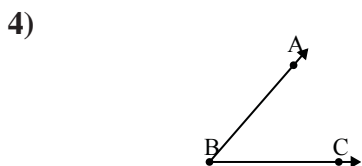
Which choice best represents $\angle KLM$?

- A. 90°
- B. 147°
- C. 15°
- D. 175°



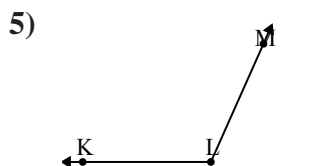
Which choice best represents $\angle KLM$?

- A. 90°
- B. 33°
- C. 128°
- D. 180°



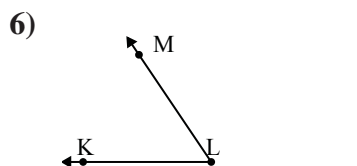
Which choice best represents $\angle ABC$?

- A. 90°
- B. 176°
- C. 49°
- D. 152°



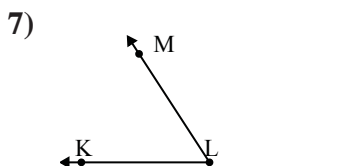
Which choice best represents $\angle KLM$?

- A. 26°
- B. 114°
- C. 71°
- D. 177°



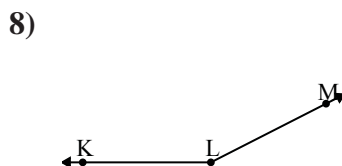
Which choice best represents $\angle KLM$?

- A. 127°
- B. 149°
- C. 103°
- D. 56°



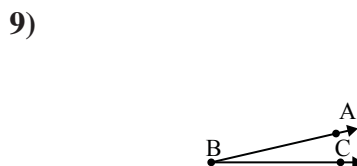
Which choice best represents $\angle KLM$?

- A. 57°
- B. 168°
- C. 4°
- D. 95°



Which choice best represents $\angle KLM$?

- A. 102°
- B. 8°
- C. 31°
- D. 153°



Which choice best represents $\angle ABC$?

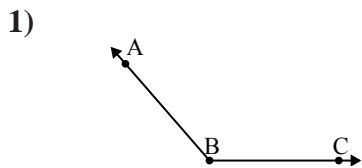
- A. 13°
- B. 152°
- C. 49°
- D. 109°

Answers

1. _____
2. _____
3. _____
4. _____
5. _____
6. _____
7. _____
8. _____
9. _____

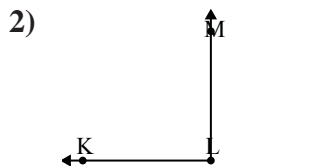


Solve each problem.



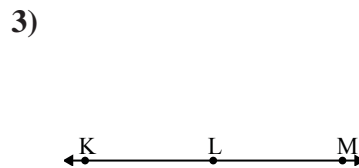
Which choice best represents $\angle ABC$?

- A. 29°
- B. 101°
- C. 68°
- D. 131°



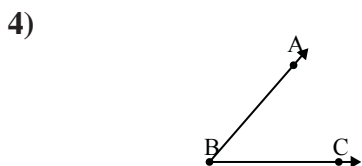
Which choice best represents $\angle KLM$?

- A. 90°
- B. 147°
- C. 15°
- D. 175°



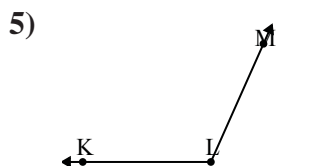
Which choice best represents $\angle KLM$?

- A. 90°
- B. 33°
- C. 128°
- D. 180°



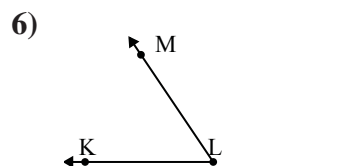
Which choice best represents $\angle ABC$?

- A. 90°
- B. 176°
- C. 49°
- D. 152°



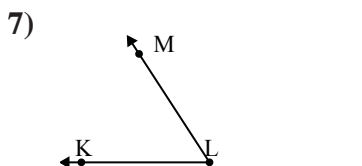
Which choice best represents $\angle KLM$?

- A. 26°
- B. 114°
- C. 71°
- D. 177°



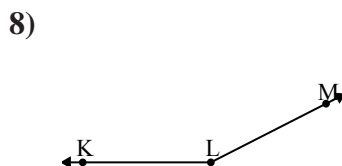
Which choice best represents $\angle KLM$?

- A. 127°
- B. 149°
- C. 103°
- D. 56°



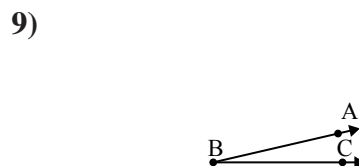
Which choice best represents $\angle KLM$?

- A. 57°
- B. 168°
- C. 4°
- D. 95°



Which choice best represents $\angle KLM$?

- A. 102°
- B. 8°
- C. 31°
- D. 153°



Which choice best represents $\angle ABC$?

- A. 13°
- B. 152°
- C. 49°
- D. 109°

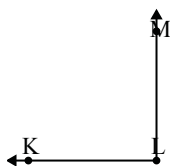
Answers

- 1. **D**
- 2. **A**
- 3. **D**
- 4. **C**
- 5. **B**
- 6. **D**
- 7. **A**
- 8. **D**
- 9. **A**



Solve each problem.

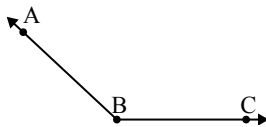
1)



Which choice best represents $\angle KLM$?

- A. 124°
- B. 90°
- C. 155°
- D. 64°

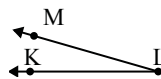
2)



Which choice best represents $\angle ABC$?

- A. 137°
- B. 50°
- C. 172°
- D. 88°

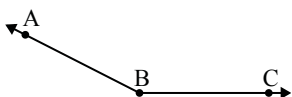
3)



Which choice best represents $\angle KLM$?

- A. 16°
- B. 62°
- C. 142°
- D. 180°

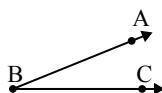
4)



Which choice best represents $\angle ABC$?

- A. 175°
- B. 118°
- C. 153°
- D. 49°

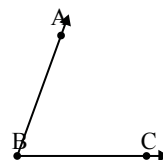
5)



Which choice best represents $\angle ABC$?

- A. 78°
- B. 149°
- C. 22°
- D. 111°

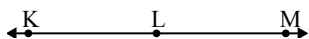
6)



Which choice best represents $\angle ABC$?

- A. 149°
- B. 24°
- C. 126°
- D. 70°

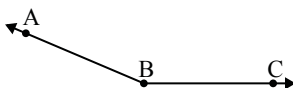
7)



Which choice best represents $\angle KLM$?

- A. 129°
- B. 40°
- C. 180°
- D. 15°

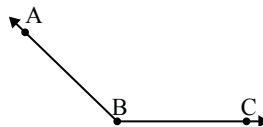
8)



Which choice best represents $\angle ABC$?

- A. 44°
- B. 121°
- C. 88°
- D. 157°

9)



Which choice best represents $\angle ABC$?

- A. 31°
- B. 136°
- C. 100°
- D. 175°

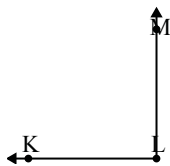
Answers

1. _____
2. _____
3. _____
4. _____
5. _____
6. _____
7. _____
8. _____
9. _____



Solve each problem.

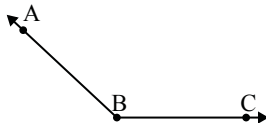
1)



Which choice best represents $\angle KLM$?

- A. 124°
- B. 90°
- C. 155°
- D. 64°

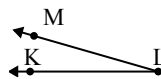
2)



Which choice best represents $\angle ABC$?

- A. 137°
- B. 50°
- C. 172°
- D. 88°

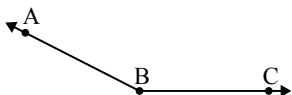
3)



Which choice best represents $\angle KLM$?

- A. 16°
- B. 62°
- C. 142°
- D. 180°

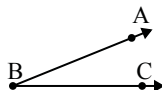
4)



Which choice best represents $\angle ABC$?

- A. 175°
- B. 118°
- C. 153°
- D. 49°

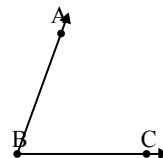
5)



Which choice best represents $\angle ABC$?

- A. 78°
- B. 149°
- C. 22°
- D. 111°

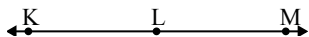
6)



Which choice best represents $\angle ABC$?

- A. 149°
- B. 24°
- C. 126°
- D. 70°

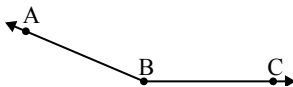
7)



Which choice best represents $\angle KLM$?

- A. 129°
- B. 40°
- C. 180°
- D. 15°

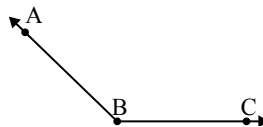
8)



Which choice best represents $\angle ABC$?

- A. 44°
- B. 121°
- C. 88°
- D. 157°

9)



Which choice best represents $\angle ABC$?

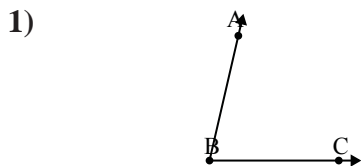
- A. 31°
- B. 136°
- C. 100°
- D. 175°

Answers

- 1. **B**
- 2. **A**
- 3. **A**
- 4. **C**
- 5. **C**
- 6. **D**
- 7. **C**
- 8. **D**
- 9. **B**

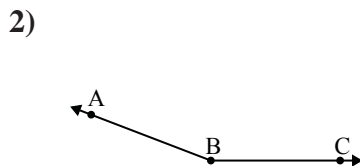


Solve each problem.



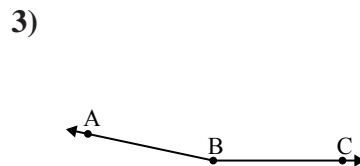
Which choice best represents $\angle ABC$?

- A. 100°
- B. 126°
- C. 77°
- D. 150°



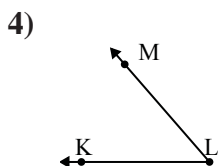
Which choice best represents $\angle ABC$?

- A. 126°
- B. 64°
- C. 102°
- D. 159°



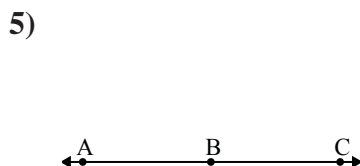
Which choice best represents $\angle ABC$?

- A. 70°
- B. 168°
- C. 134°
- D. 39°



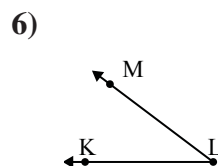
Which choice best represents $\angle KLM$?

- A. 100°
- B. 20°
- C. 49°
- D. 170°



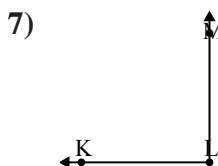
Which choice best represents $\angle ABC$?

- A. 113°
- B. 180°
- C. 149°
- D. 1°



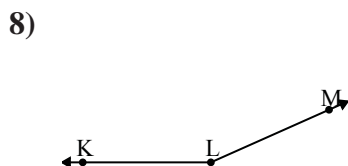
Which choice best represents $\angle KLM$?

- A. 37°
- B. 156°
- C. 95°
- D. 61°



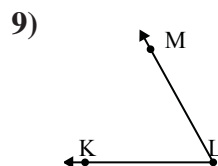
Which choice best represents $\angle KLM$?

- A. 8°
- B. 30°
- C. 90°
- D. 129°



Which choice best represents $\angle KLM$?

- A. 43°
- B. 106°
- C. 156°
- D. 65°



Which choice best represents $\angle KLM$?

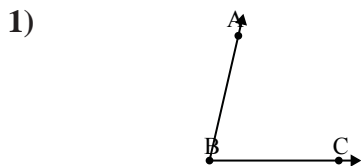
- A. 38°
- B. 174°
- C. 100°
- D. 61°

Answers

1. _____
2. _____
3. _____
4. _____
5. _____
6. _____
7. _____
8. _____
9. _____

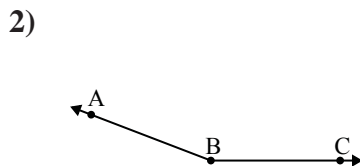


Solve each problem.



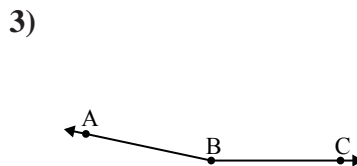
Which choice best represents $\angle ABC$?

- A. 100°
- B. 126°
- C. 77°
- D. 150°



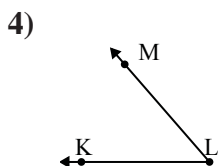
Which choice best represents $\angle ABC$?

- A. 126°
- B. 64°
- C. 102°
- D. 159°



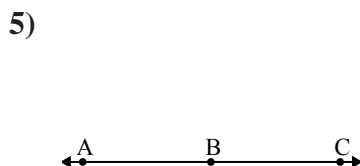
Which choice best represents $\angle ABC$?

- A. 70°
- B. 168°
- C. 134°
- D. 39°



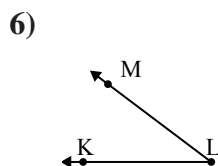
Which choice best represents $\angle KLM$?

- A. 100°
- B. 20°
- C. 49°
- D. 170°



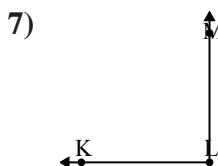
Which choice best represents $\angle ABC$?

- A. 113°
- B. 180°
- C. 149°
- D. 1°



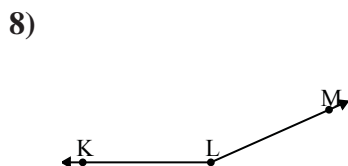
Which choice best represents $\angle KLM$?

- A. 37°
- B. 156°
- C. 95°
- D. 61°



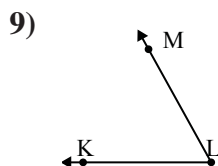
Which choice best represents $\angle KLM$?

- A. 8°
- B. 30°
- C. 90°
- D. 129°



Which choice best represents $\angle KLM$?

- A. 43°
- B. 106°
- C. 156°
- D. 65°



Which choice best represents $\angle KLM$?

- A. 38°
- B. 174°
- C. 100°
- D. 61°

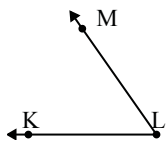
Answers

- 1. **C**
- 2. **D**
- 3. **B**
- 4. **C**
- 5. **B**
- 6. **A**
- 7. **C**
- 8. **C**
- 9. **D**



Solve each problem.

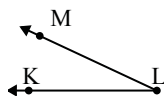
1)



Which choice best represents $\angle KLM$?

- A. 55°
- B. 177°
- C. 14°
- D. 91°

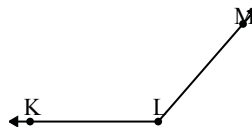
2)



Which choice best represents $\angle KLM$?

- A. 170°
- B. 144°
- C. 25°
- D. 97°

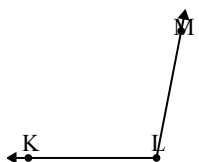
3)



Which choice best represents $\angle KLM$?

- A. 156°
- B. 27°
- C. 131°
- D. 74°

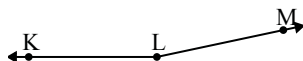
4)



Which choice best represents $\angle KLM$?

- A. 101°
- B. 51°
- C. 17°
- D. 127°

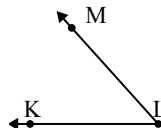
5)



Which choice best represents $\angle KLM$?

- A. 6°
- B. 75°
- C. 38°
- D. 168°

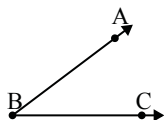
6)



Which choice best represents $\angle KLM$?

- A. 8°
- B. 130°
- C. 48°
- D. 92°

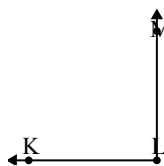
7)



Which choice best represents $\angle ABC$?

- A. 98°
- B. 37°
- C. 122°
- D. 11°

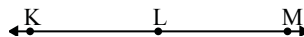
8)



Which choice best represents $\angle KLM$?

- A. 48°
- B. 174°
- C. 90°
- D. 148°

9)



Which choice best represents $\angle KLM$?

- A. 99°
- B. 142°
- C. 180°
- D. 73°

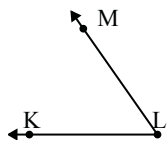
Answers

1. _____
2. _____
3. _____
4. _____
5. _____
6. _____
7. _____
8. _____
9. _____



Solve each problem.

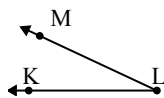
1)



Which choice best represents $\angle KLM$?

- A. 55°
- B. 177°
- C. 14°
- D. 91°

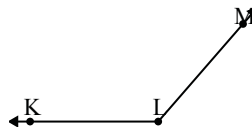
2)



Which choice best represents $\angle KLM$?

- A. 170°
- B. 144°
- C. 25°
- D. 97°

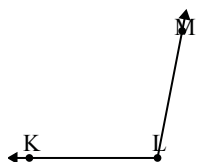
3)



Which choice best represents $\angle KLM$?

- A. 156°
- B. 27°
- C. 131°
- D. 74°

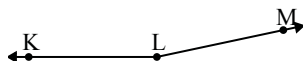
4)



Which choice best represents $\angle KLM$?

- A. 101°
- B. 51°
- C. 17°
- D. 127°

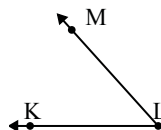
5)



Which choice best represents $\angle KLM$?

- A. 6°
- B. 75°
- C. 38°
- D. 168°

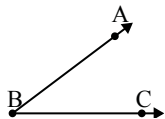
6)



Which choice best represents $\angle KLM$?

- A. 8°
- B. 130°
- C. 48°
- D. 92°

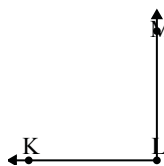
7)



Which choice best represents $\angle ABC$?

- A. 98°
- B. 37°
- C. 122°
- D. 11°

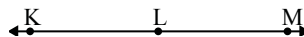
8)



Which choice best represents $\angle KLM$?

- A. 48°
- B. 174°
- C. 90°
- D. 148°

9)



Which choice best represents $\angle KLM$?

- A. 99°
- B. 142°
- C. 180°
- D. 73°

Answers

1. **A**
2. **C**
3. **C**
4. **A**
5. **D**
6. **C**
7. **B**
8. **C**
9. **C**