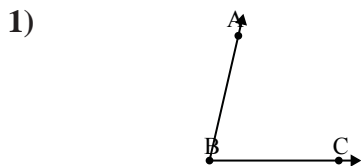


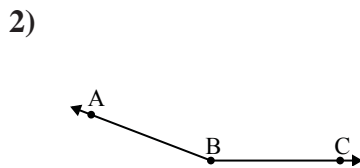


Solve each problem.



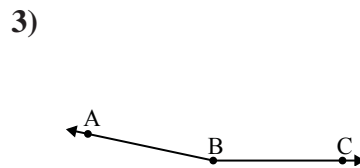
Which choice best represents $\angle ABC$?

- A. 100°
- B. 126°
- C. 77°
- D. 150°



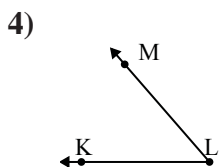
Which choice best represents $\angle ABC$?

- A. 126°
- B. 64°
- C. 102°
- D. 159°



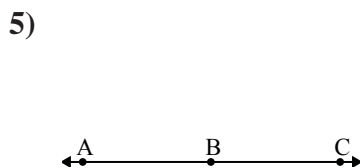
Which choice best represents $\angle ABC$?

- A. 70°
- B. 168°
- C. 134°
- D. 39°



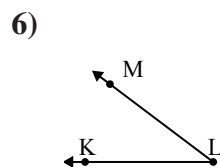
Which choice best represents $\angle KLM$?

- A. 100°
- B. 20°
- C. 49°
- D. 170°



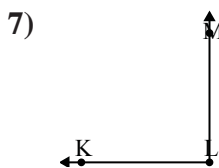
Which choice best represents $\angle ABC$?

- A. 113°
- B. 180°
- C. 149°
- D. 1°



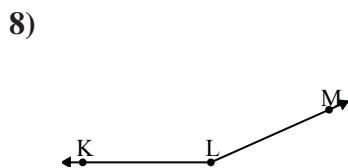
Which choice best represents $\angle KLM$?

- A. 37°
- B. 156°
- C. 95°
- D. 61°



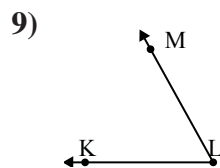
Which choice best represents $\angle KLM$?

- A. 8°
- B. 30°
- C. 90°
- D. 129°



Which choice best represents $\angle KLM$?

- A. 43°
- B. 106°
- C. 156°
- D. 65°



Which choice best represents $\angle KLM$?

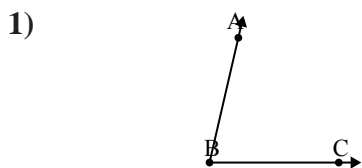
- A. 38°
- B. 174°
- C. 100°
- D. 61°

Answers

1. _____
2. _____
3. _____
4. _____
5. _____
6. _____
7. _____
8. _____
9. _____

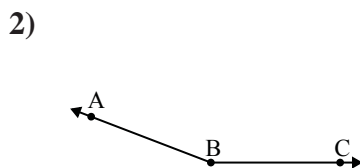


Solve each problem.



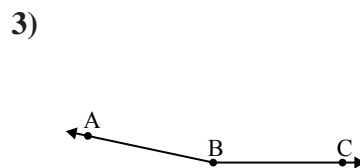
Which choice best represents $\angle ABC$?

- A. 100°
- B. 126°
- C. 77°
- D. 150°



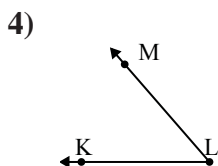
Which choice best represents $\angle ABC$?

- A. 126°
- B. 64°
- C. 102°
- D. 159°



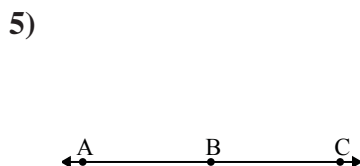
Which choice best represents $\angle ABC$?

- A. 70°
- B. 168°
- C. 134°
- D. 39°



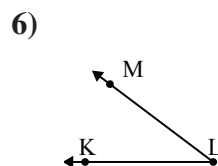
Which choice best represents $\angle KLM$?

- A. 100°
- B. 20°
- C. 49°
- D. 170°



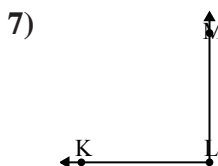
Which choice best represents $\angle ABC$?

- A. 113°
- B. 180°
- C. 149°
- D. 1°



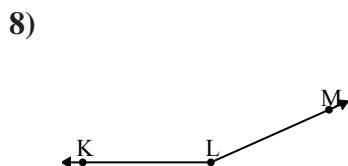
Which choice best represents $\angle KLM$?

- A. 37°
- B. 156°
- C. 95°
- D. 61°



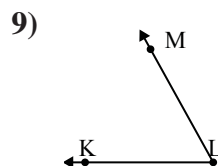
Which choice best represents $\angle KLM$?

- A. 8°
- B. 30°
- C. 90°
- D. 129°



Which choice best represents $\angle KLM$?

- A. 43°
- B. 106°
- C. 156°
- D. 65°



Which choice best represents $\angle KLM$?

- A. 38°
- B. 174°
- C. 100°
- D. 61°

Answers

- 1. **C**
- 2. **D**
- 3. **B**
- 4. **C**
- 5. **B**
- 6. **A**
- 7. **C**
- 8. **C**
- 9. **D**