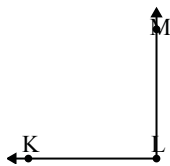




Solve each problem.

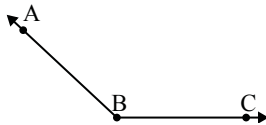
1)



Which choice best represents $\angle KLM$?

- A. 124°
- B. 90°
- C. 155°
- D. 64°

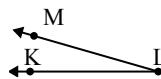
2)



Which choice best represents $\angle ABC$?

- A. 137°
- B. 50°
- C. 172°
- D. 88°

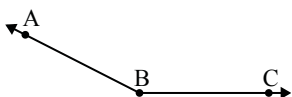
3)



Which choice best represents $\angle KLM$?

- A. 16°
- B. 62°
- C. 142°
- D. 180°

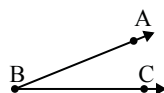
4)



Which choice best represents $\angle ABC$?

- A. 175°
- B. 118°
- C. 153°
- D. 49°

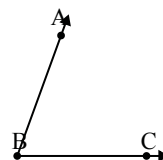
5)



Which choice best represents $\angle ABC$?

- A. 78°
- B. 149°
- C. 22°
- D. 111°

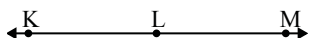
6)



Which choice best represents $\angle ABC$?

- A. 149°
- B. 24°
- C. 126°
- D. 70°

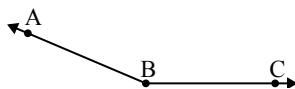
7)



Which choice best represents $\angle KLM$?

- A. 129°
- B. 40°
- C. 180°
- D. 15°

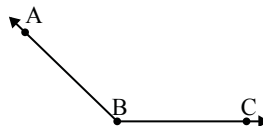
8)



Which choice best represents $\angle ABC$?

- A. 44°
- B. 121°
- C. 88°
- D. 157°

9)



Which choice best represents $\angle ABC$?

- A. 31°
- B. 136°
- C. 100°
- D. 175°

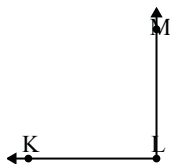
Answers

1. _____
2. _____
3. _____
4. _____
5. _____
6. _____
7. _____
8. _____
9. _____



Solve each problem.

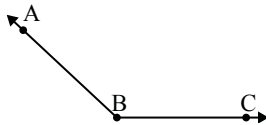
1)



Which choice best represents $\angle KLM$?

- A. 124°
- B. 90°
- C. 155°
- D. 64°

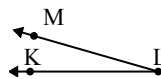
2)



Which choice best represents $\angle ABC$?

- A. 137°
- B. 50°
- C. 172°
- D. 88°

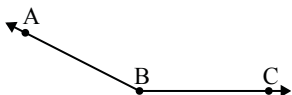
3)



Which choice best represents $\angle KLM$?

- A. 16°
- B. 62°
- C. 142°
- D. 180°

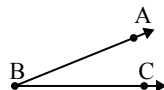
4)



Which choice best represents $\angle ABC$?

- A. 175°
- B. 118°
- C. 153°
- D. 49°

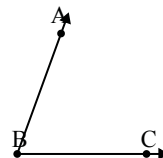
5)



Which choice best represents $\angle ABC$?

- A. 78°
- B. 149°
- C. 22°
- D. 111°

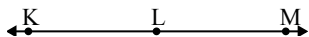
6)



Which choice best represents $\angle ABC$?

- A. 149°
- B. 24°
- C. 126°
- D. 70°

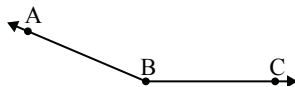
7)



Which choice best represents $\angle KLM$?

- A. 129°
- B. 40°
- C. 180°
- D. 15°

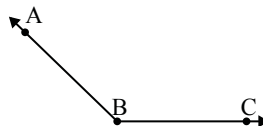
8)



Which choice best represents $\angle ABC$?

- A. 44°
- B. 121°
- C. 88°
- D. 157°

9)



Which choice best represents $\angle ABC$?

- A. 31°
- B. 136°
- C. 100°
- D. 175°

Answers

- 1. **B**
- 2. **A**
- 3. **A**
- 4. **C**
- 5. **C**
- 6. **D**
- 7. **C**
- 8. **D**
- 9. **B**