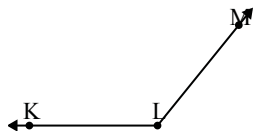




Solve each problem.

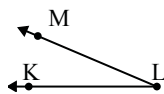
1)



Which choice best represents $\angle KLM$?

- A. 29°
- B. 65°
- C. 129°
- D. 104°

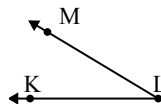
2)



Which choice best represents $\angle KLM$?

- A. 57°
- B. 178°
- C. 136°
- D. 23°

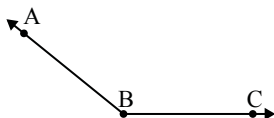
3)



Which choice best represents $\angle KLM$?

- A. 31°
- B. 171°
- C. 116°
- D. 70°

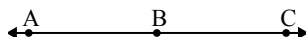
4)



Which choice best represents $\angle ABC$?

- A. 45°
- B. 115°
- C. 141°
- D. 71°

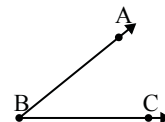
5)



Which choice best represents $\angle ABC$?

- A. 137°
- B. 65°
- C. 180°
- D. 3°

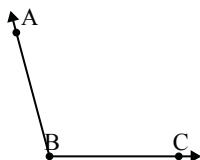
6)



Which choice best represents $\angle ABC$?

- A. 67°
- B. 90°
- C. 4°
- D. 39°

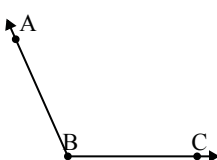
7)



Which choice best represents $\angle ABC$?

- A. 150°
- B. 180°
- C. 105°
- D. 63°

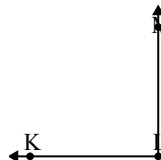
8)



Which choice best represents $\angle ABC$?

- A. 87°
- B. 3°
- C. 29°
- D. 114°

9)



Which choice best represents $\angle KLM$?

- A. 16°
- B. 127°
- C. 153°
- D. 90°

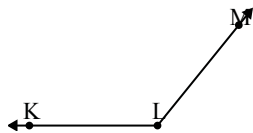
Answers

1. _____
2. _____
3. _____
4. _____
5. _____
6. _____
7. _____
8. _____
9. _____



Solve each problem.

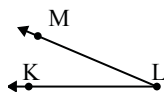
1)



Which choice best represents $\angle KLM$?

- A. 29°
- B. 65°
- C. 129°
- D. 104°

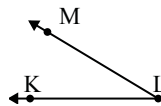
2)



Which choice best represents $\angle KLM$?

- A. 57°
- B. 178°
- C. 136°
- D. 23°

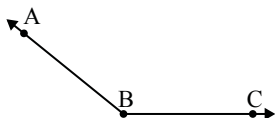
3)



Which choice best represents $\angle KLM$?

- A. 31°
- B. 171°
- C. 116°
- D. 70°

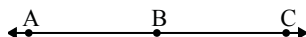
4)



Which choice best represents $\angle ABC$?

- A. 45°
- B. 115°
- C. 141°
- D. 71°

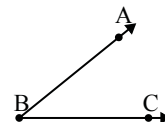
5)



Which choice best represents $\angle ABC$?

- A. 137°
- B. 65°
- C. 180°
- D. 3°

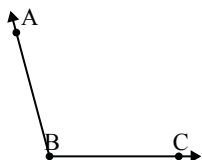
6)



Which choice best represents $\angle ABC$?

- A. 67°
- B. 90°
- C. 4°
- D. 39°

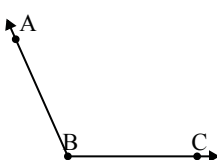
7)



Which choice best represents $\angle ABC$?

- A. 150°
- B. 180°
- C. 105°
- D. 63°

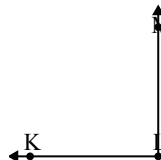
8)



Which choice best represents $\angle ABC$?

- A. 87°
- B. 3°
- C. 29°
- D. 114°

9)



Which choice best represents $\angle KLM$?

- A. 16°
- B. 127°
- C. 153°
- D. 90°

Answers

- 1. **C**
- 2. **D**
- 3. **A**
- 4. **C**
- 5. **C**
- 6. **D**
- 7. **C**
- 8. **D**
- 9. **D**