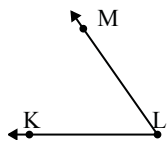




Solve each problem.

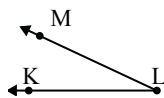
1)



Which choice best represents  $\angle KLM$ ?

- A.  $55^\circ$
- B.  $177^\circ$
- C.  $14^\circ$
- D.  $91^\circ$

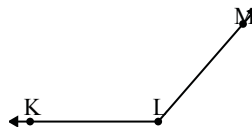
2)



Which choice best represents  $\angle KLM$ ?

- A.  $170^\circ$
- B.  $144^\circ$
- C.  $25^\circ$
- D.  $97^\circ$

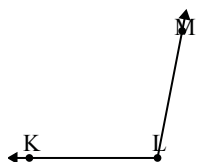
3)



Which choice best represents  $\angle KLM$ ?

- A.  $156^\circ$
- B.  $27^\circ$
- C.  $131^\circ$
- D.  $74^\circ$

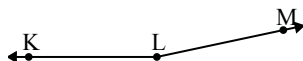
4)



Which choice best represents  $\angle KLM$ ?

- A.  $101^\circ$
- B.  $51^\circ$
- C.  $17^\circ$
- D.  $127^\circ$

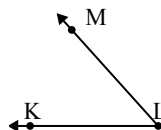
5)



Which choice best represents  $\angle KLM$ ?

- A.  $6^\circ$
- B.  $75^\circ$
- C.  $38^\circ$
- D.  $168^\circ$

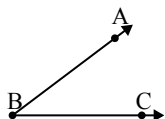
6)



Which choice best represents  $\angle KLM$ ?

- A.  $8^\circ$
- B.  $130^\circ$
- C.  $48^\circ$
- D.  $92^\circ$

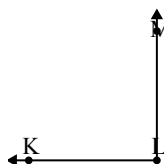
7)



Which choice best represents  $\angle ABC$ ?

- A.  $98^\circ$
- B.  $37^\circ$
- C.  $122^\circ$
- D.  $11^\circ$

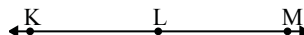
8)



Which choice best represents  $\angle KLM$ ?

- A.  $48^\circ$
- B.  $174^\circ$
- C.  $90^\circ$
- D.  $148^\circ$

9)



Which choice best represents  $\angle KLM$ ?

- A.  $99^\circ$
- B.  $142^\circ$
- C.  $180^\circ$
- D.  $73^\circ$

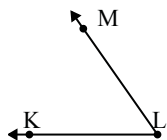
Answers

1. \_\_\_\_\_
2. \_\_\_\_\_
3. \_\_\_\_\_
4. \_\_\_\_\_
5. \_\_\_\_\_
6. \_\_\_\_\_
7. \_\_\_\_\_
8. \_\_\_\_\_
9. \_\_\_\_\_



Solve each problem.

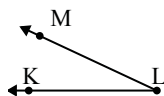
1)



Which choice best represents  $\angle KLM$ ?

- A.  $55^\circ$
- B.  $177^\circ$
- C.  $14^\circ$
- D.  $91^\circ$

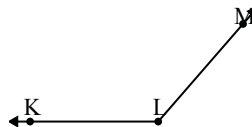
2)



Which choice best represents  $\angle KLM$ ?

- A.  $170^\circ$
- B.  $144^\circ$
- C.  $25^\circ$
- D.  $97^\circ$

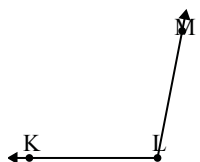
3)



Which choice best represents  $\angle KLM$ ?

- A.  $156^\circ$
- B.  $27^\circ$
- C.  $131^\circ$
- D.  $74^\circ$

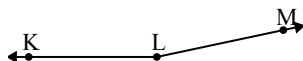
4)



Which choice best represents  $\angle KLM$ ?

- A.  $101^\circ$
- B.  $51^\circ$
- C.  $17^\circ$
- D.  $127^\circ$

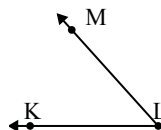
5)



Which choice best represents  $\angle KLM$ ?

- A.  $6^\circ$
- B.  $75^\circ$
- C.  $38^\circ$
- D.  $168^\circ$

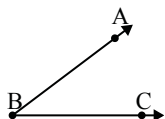
6)



Which choice best represents  $\angle KLM$ ?

- A.  $8^\circ$
- B.  $130^\circ$
- C.  $48^\circ$
- D.  $92^\circ$

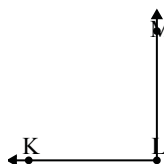
7)



Which choice best represents  $\angle ABC$ ?

- A.  $98^\circ$
- B.  $37^\circ$
- C.  $122^\circ$
- D.  $11^\circ$

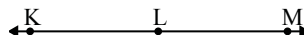
8)



Which choice best represents  $\angle KLM$ ?

- A.  $48^\circ$
- B.  $174^\circ$
- C.  $90^\circ$
- D.  $148^\circ$

9)



Which choice best represents  $\angle KLM$ ?

- A.  $99^\circ$
- B.  $142^\circ$
- C.  $180^\circ$
- D.  $73^\circ$

Answers

1. **A**
2. **C**
3. **C**
4. **A**
5. **D**
6. **C**
7. **B**
8. **C**
9. **C**