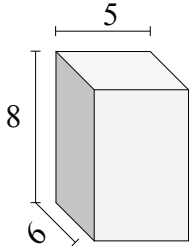


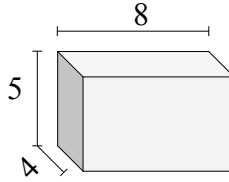


Solve each problem.

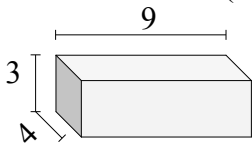
- 1) Find the volume (in cm).



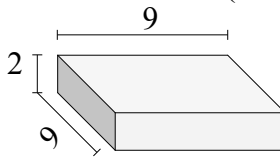
- 2) Find the volume (in cm).



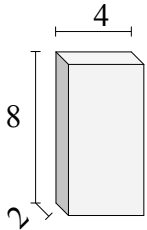
- 3) Find the volume (in cm).



- 4) Find the volume (in cm).



- 5) Find the volume (in cm).



Answers

1. _____

2. _____

3. _____

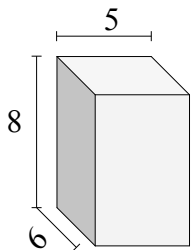
4. _____

5. _____

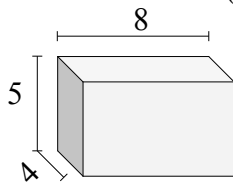


Solve each problem.

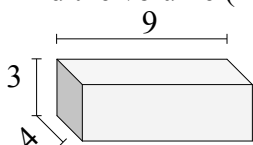
1) Find the volume (in cm).



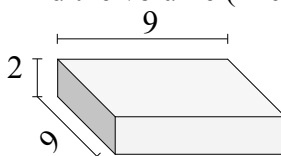
2) Find the volume (in cm).



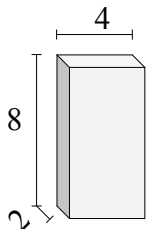
3) Find the volume (in cm).



4) Find the volume (in cm).



5) Find the volume (in cm).



Answers

1. 240 cm³

2. 160 cm³

3. 108 cm³

4. 162 cm³

5. 64 cm³