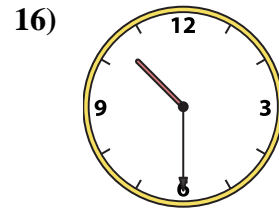
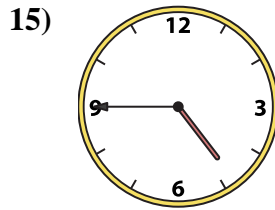
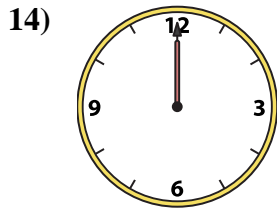
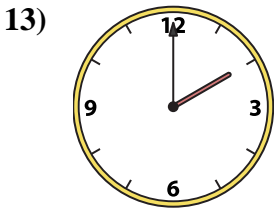
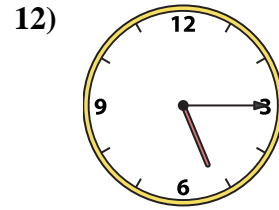
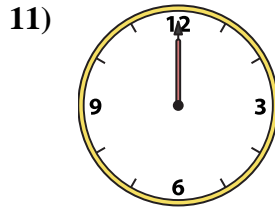
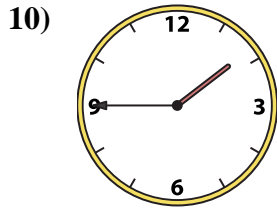
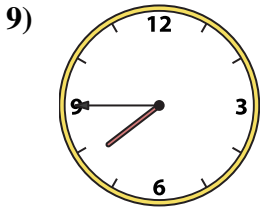
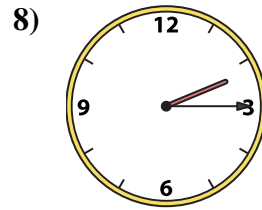
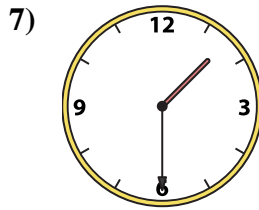
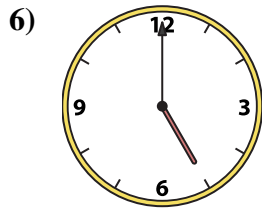
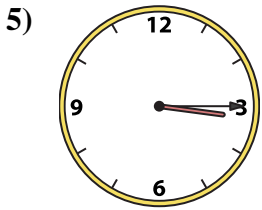
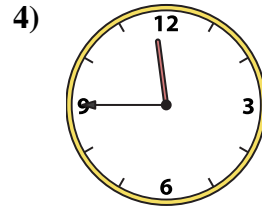
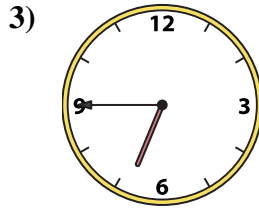
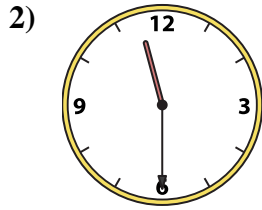
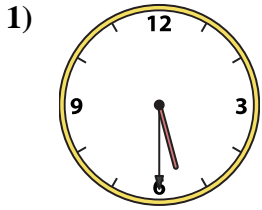




Match the analog clock to the digital clock.

**Answers**



A. 2:00

B. 4:45

C. 10:30

D. 5:30

E. 7:45

F. 12:00

G. 6:45

H. 11:30

I. 3:15

J. 11:45

K. 5:15

L. 2:15

M. 1:45

N. 1:30

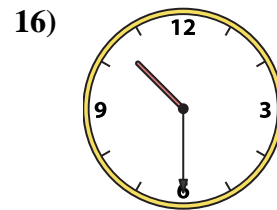
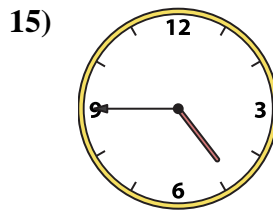
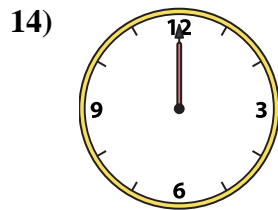
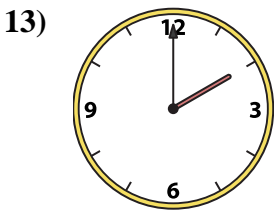
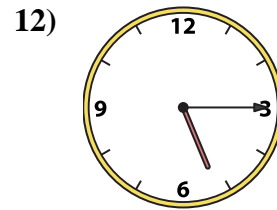
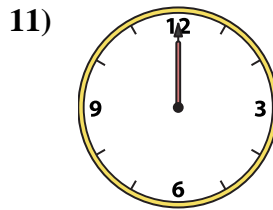
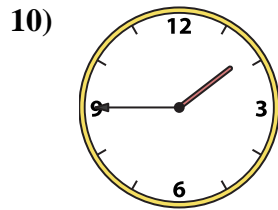
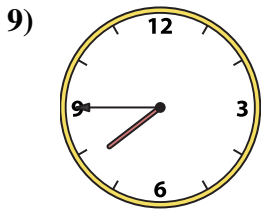
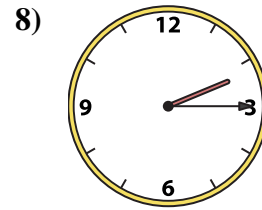
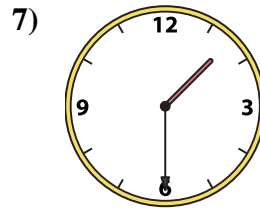
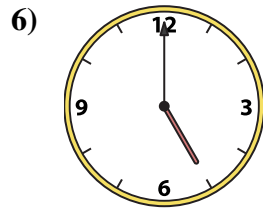
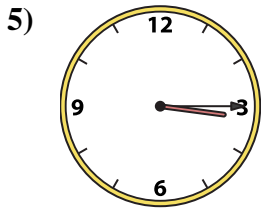
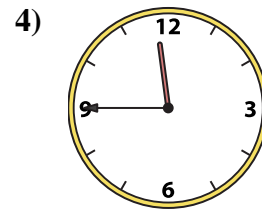
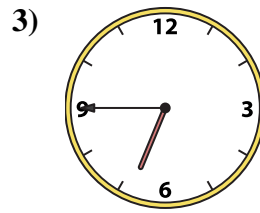
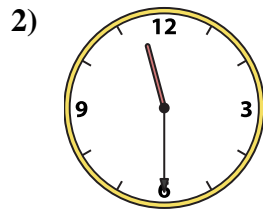
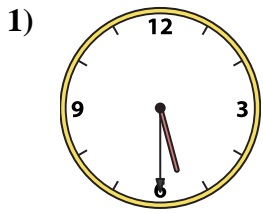
O. 12:00

P. 5:00

1. \_\_\_\_\_
2. \_\_\_\_\_
3. \_\_\_\_\_
4. \_\_\_\_\_
5. \_\_\_\_\_
6. \_\_\_\_\_
7. \_\_\_\_\_
8. \_\_\_\_\_
9. \_\_\_\_\_
10. \_\_\_\_\_
11. \_\_\_\_\_
12. \_\_\_\_\_
13. \_\_\_\_\_
14. \_\_\_\_\_
15. \_\_\_\_\_
16. \_\_\_\_\_



Match the analog clock to the digital clock.



A. **2:00**

B. **4:45**

C. **10:30**

D. **5:30**

E. **7:45**

F. **12:00**

G. **6:45**

H. **11:30**

I. **3:15**

J. **11:45**

K. **5:15**

L. **2:15**

M. **1:45**

N. **1:30**

O. **12:00**

P. **5:00**

**Answers**

1. **D**

2. **H**

3. **G**

4. **J**

5. **I**

6. **P**

7. **N**

8. **L**

9. **E**

10. **M**

11. **O**

12. **K**

13. **A**

14. **F**

15. **B**

16. **C**