

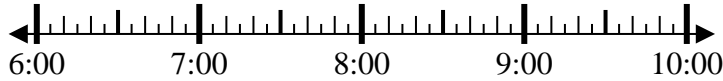


Solve each problem.

Answers

1) Start: _____

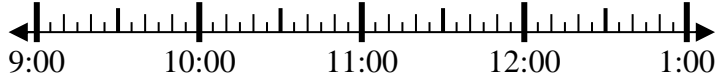
Elapsed: 1 hr & 10 mins
End: 8:00



1. _____

2) Start: _____

Elapsed: 1 hr & 30 mins
End: 11:00



2. _____

3) Start: _____

Elapsed: 1 hr & 15 mins
End: 7:35



3. _____

4) Start: _____

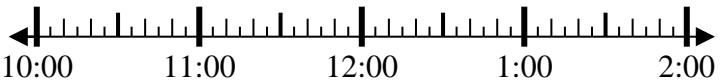
Elapsed: 1 hr & 20 mins
End: 12:30



4. _____

5) Start: _____

Elapsed: 1 hr & 15 mins
End: 11:50



5. _____

6) Start: _____

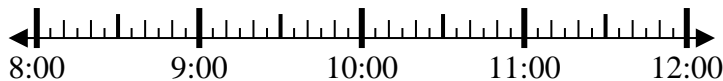
Elapsed: 1 hr & 30 mins
End: 11:45



6. _____

7) Start: _____

Elapsed: 1 hr & 55 mins
End: 10:45



7. _____

8) Start: _____

Elapsed: 1 hr & 15 mins
End: 2:05

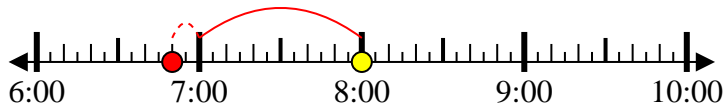


8. _____

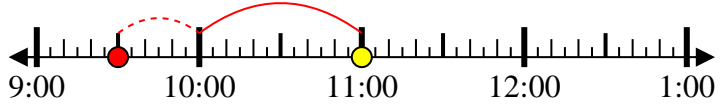


Solve each problem.

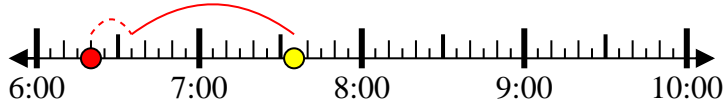
1) Start: 6:50
 Elapsed: 1 hr & 10 mins
 End: 8:00



2) Start: 9:30
 Elapsed: 1 hr & 30 mins
 End: 11:00



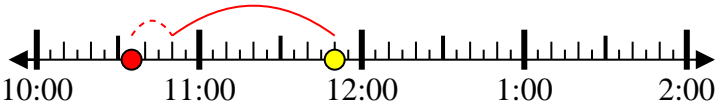
3) Start: 6:20
 Elapsed: 1 hr & 15 mins
 End: 7:35



4) Start: 11:10
 Elapsed: 1 hr & 20 mins
 End: 12:30



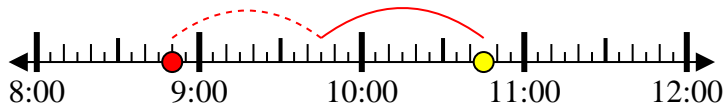
5) Start: 10:35
 Elapsed: 1 hr & 15 mins
 End: 11:50



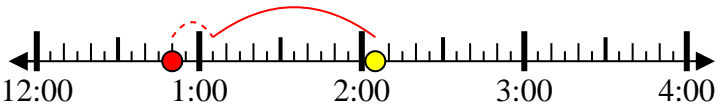
6) Start: 10:15
 Elapsed: 1 hr & 30 mins
 End: 11:45



7) Start: 8:50
 Elapsed: 1 hr & 55 mins
 End: 10:45



8) Start: 12:50
 Elapsed: 1 hr & 15 mins
 End: 2:05



Answers

1. 6:50

2. 9:30

3. 6:20

4. 11:10

5. 10:35

6. 10:15

7. 8:50

8. 12:50