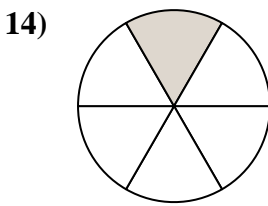
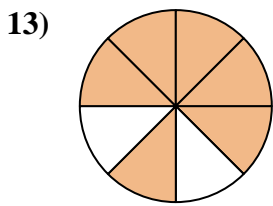
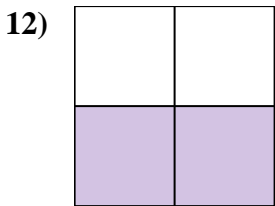
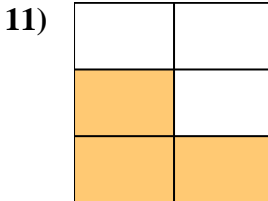
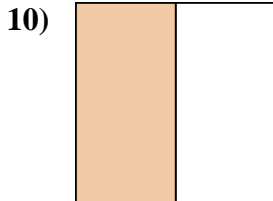
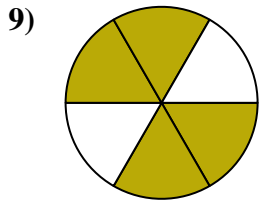
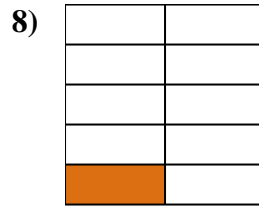
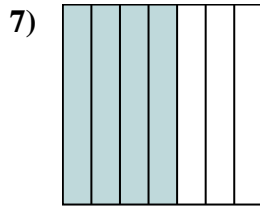
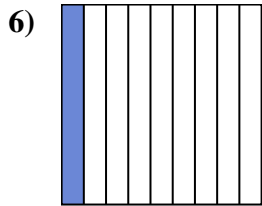
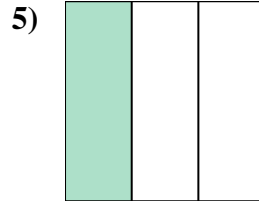
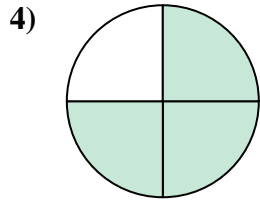
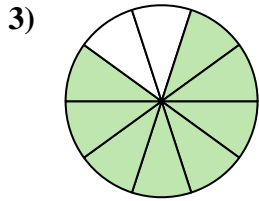
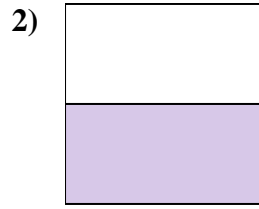
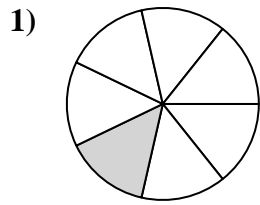
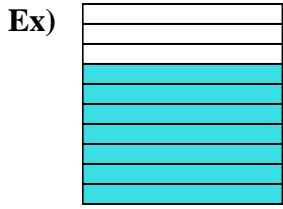




Write the shaded amount in word form.



Answers

Ex. seven-tenths

1. \_\_\_\_\_

2. \_\_\_\_\_

3. \_\_\_\_\_

4. \_\_\_\_\_

5. \_\_\_\_\_

6. \_\_\_\_\_

7. \_\_\_\_\_

8. \_\_\_\_\_

9. \_\_\_\_\_

10. \_\_\_\_\_

11. \_\_\_\_\_

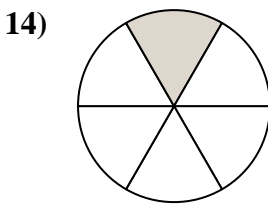
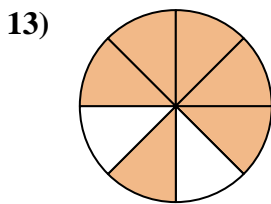
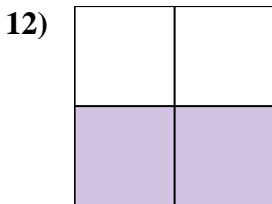
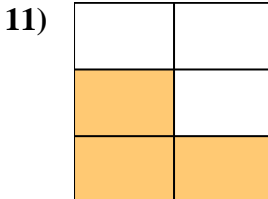
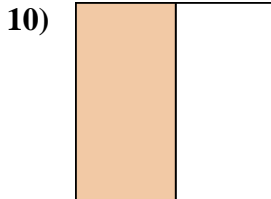
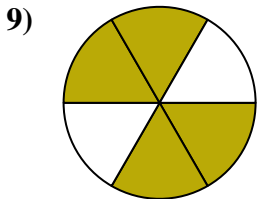
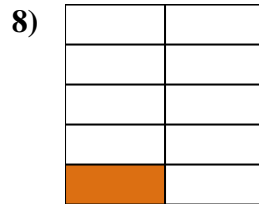
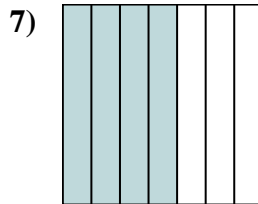
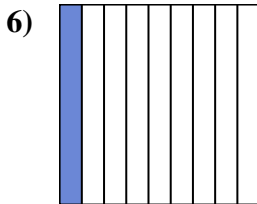
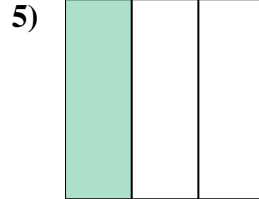
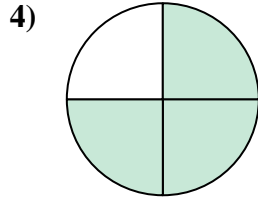
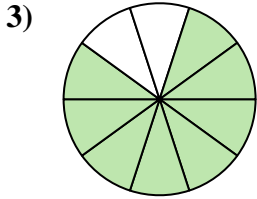
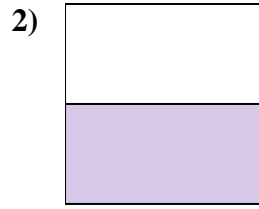
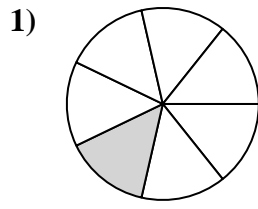
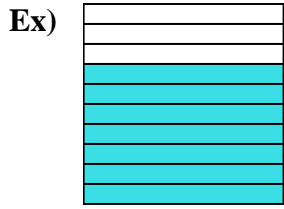
12. \_\_\_\_\_

13. \_\_\_\_\_

14. \_\_\_\_\_



Write the shaded amount in word form.



Answers

Ex. seven-tenths

1. one-seventh

2. one-half

3. eight-tenths

4. three-fourths

5. one-third

6. one-ninth

7. four-sevenths

8. one-ninth

9. four-sixths

10. one-half

11. three-fifths

12. two-thirds

13. six-eighths

14. one-sixth