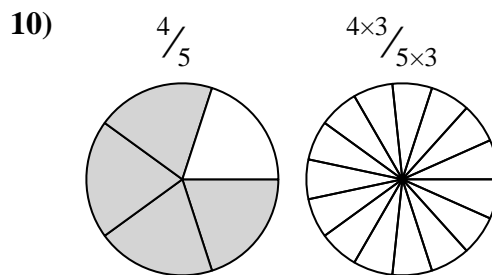
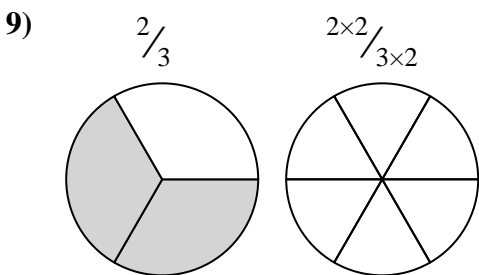
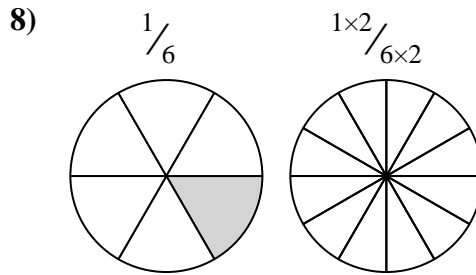
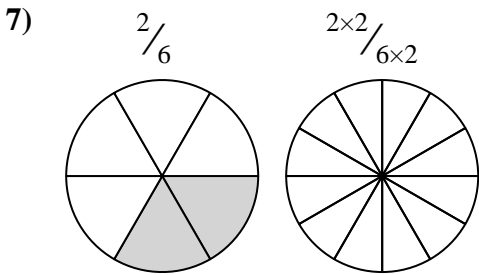
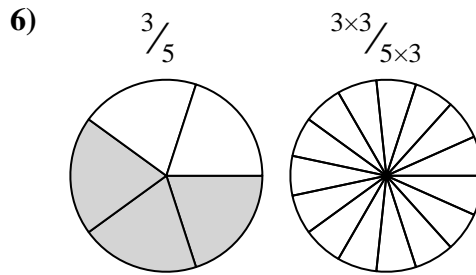
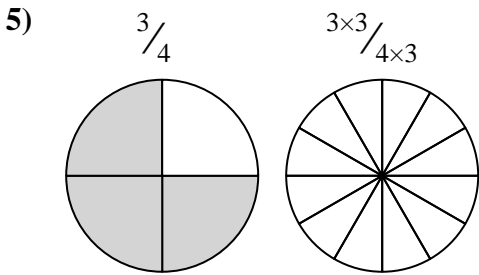
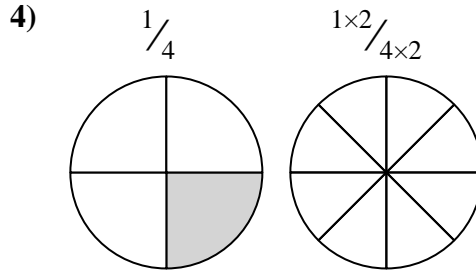
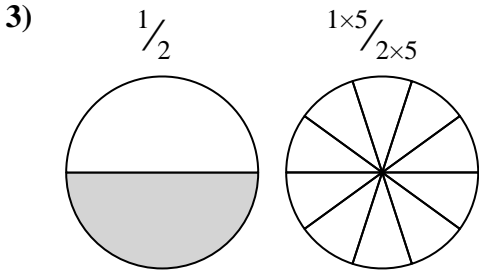
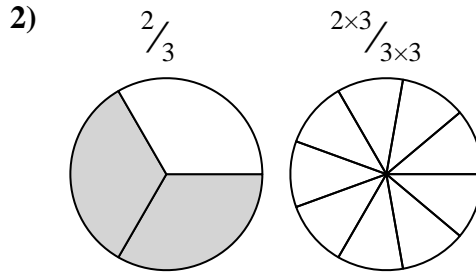
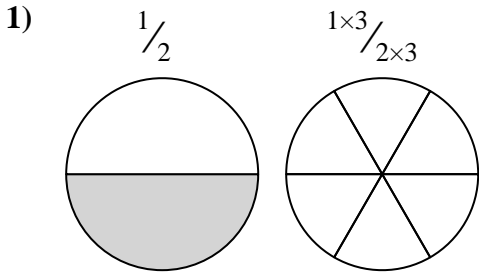




Shade in the equivalent fraction and answer with shaded fraction.

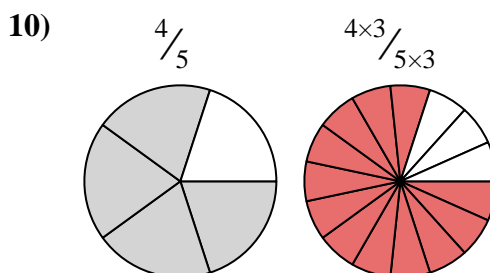
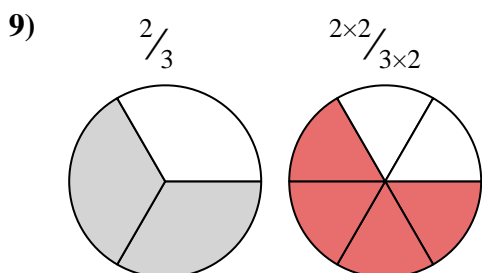
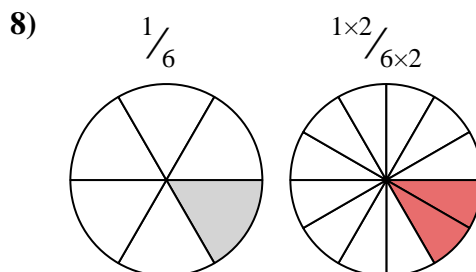
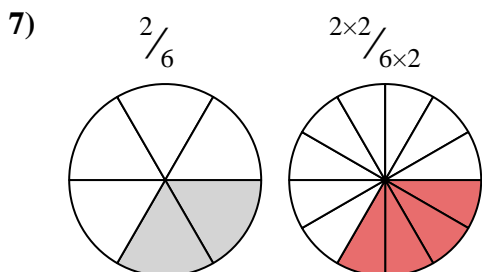
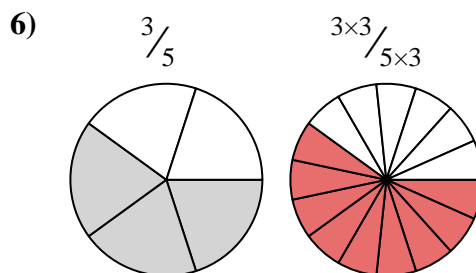
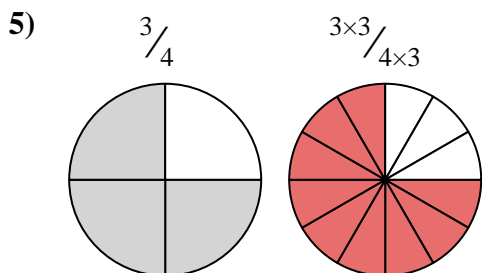
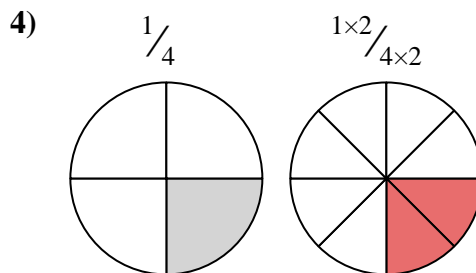
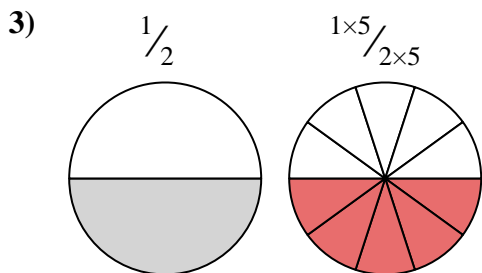
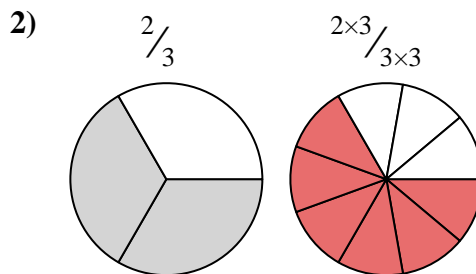
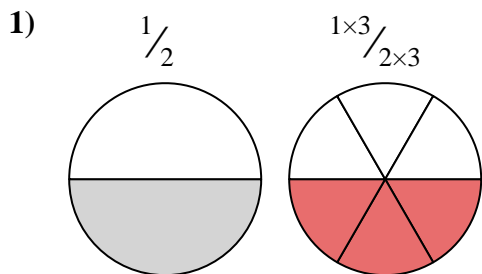
**Answers**



1. \_\_\_\_\_
2. \_\_\_\_\_
3. \_\_\_\_\_
4. \_\_\_\_\_
5. \_\_\_\_\_
6. \_\_\_\_\_
7. \_\_\_\_\_
8. \_\_\_\_\_
9. \_\_\_\_\_
10. \_\_\_\_\_



Shade in the equivalent fraction and answer with shaded fraction.



Answers

1.  $\frac{3}{6}$

2.  $\frac{6}{9}$

3.  $\frac{5}{10}$

4.  $\frac{2}{8}$

5.  $\frac{9}{12}$

6.  $\frac{9}{15}$

7.  $\frac{4}{12}$

8.  $\frac{2}{12}$

9.  $\frac{4}{6}$

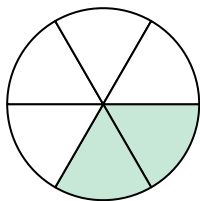
10.  $\frac{12}{15}$



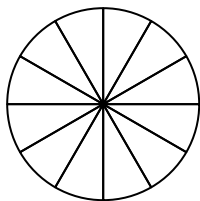
Shade in the equivalent fraction and answer with shaded fraction.

**Answers**

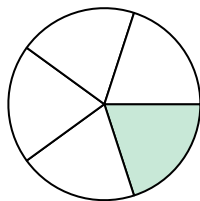
1)  $\frac{2}{6}$



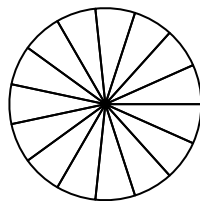
$\frac{2 \times 2}{6 \times 2}$



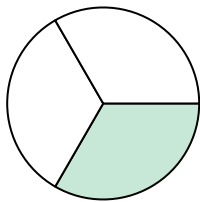
2)  $\frac{1}{5}$



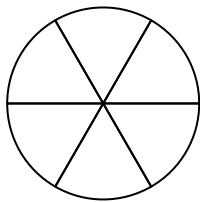
$\frac{1 \times 3}{5 \times 3}$



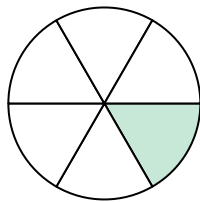
3)  $\frac{1}{3}$



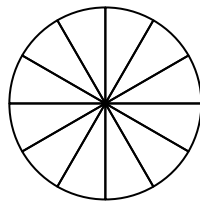
$\frac{1 \times 2}{3 \times 2}$



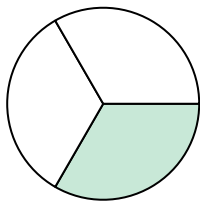
4)  $\frac{1}{6}$



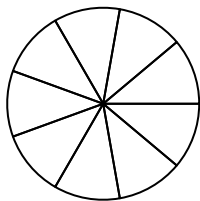
$\frac{1 \times 2}{6 \times 2}$



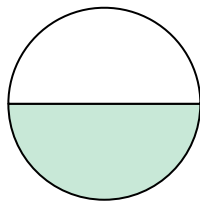
5)  $\frac{1}{3}$



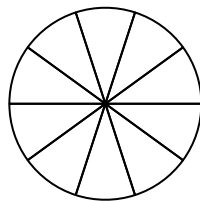
$\frac{1 \times 3}{3 \times 3}$



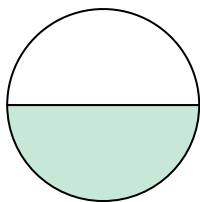
6)  $\frac{1}{2}$



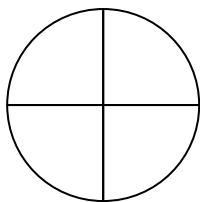
$\frac{1 \times 5}{2 \times 5}$



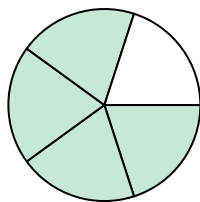
7)  $\frac{1}{2}$



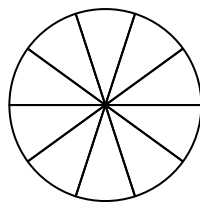
$\frac{1 \times 2}{2 \times 2}$



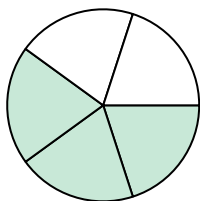
8)  $\frac{4}{5}$



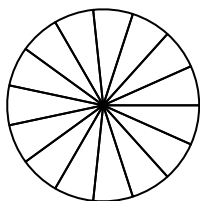
$\frac{4 \times 2}{5 \times 2}$



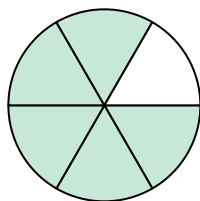
9)  $\frac{3}{5}$



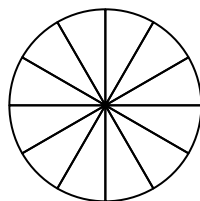
$\frac{3 \times 3}{5 \times 3}$



10)  $\frac{5}{6}$



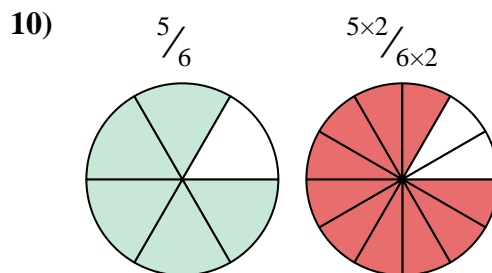
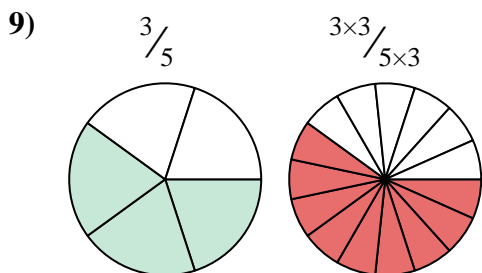
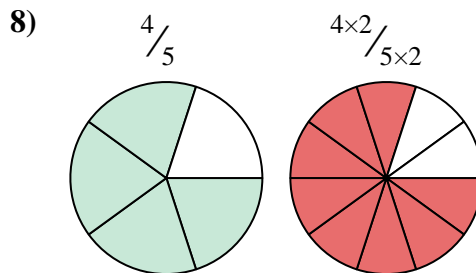
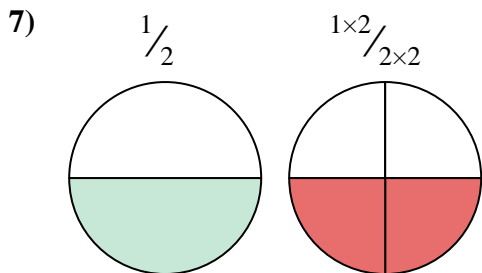
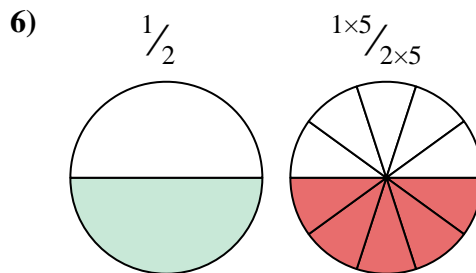
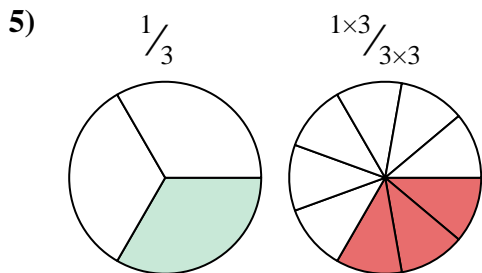
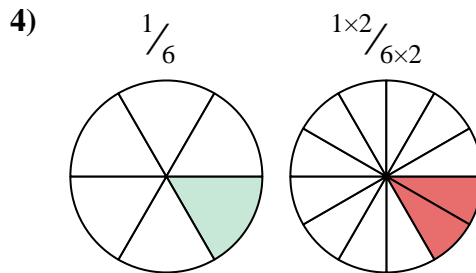
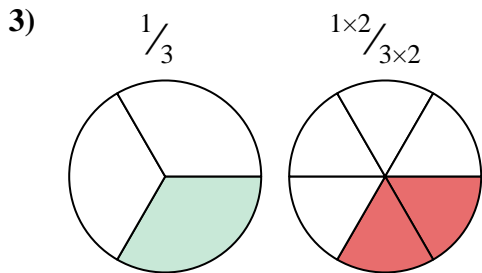
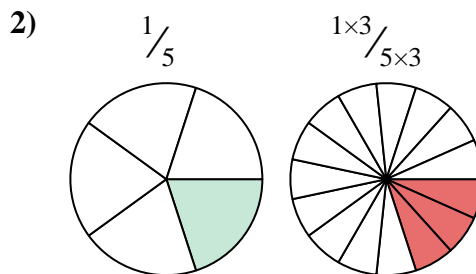
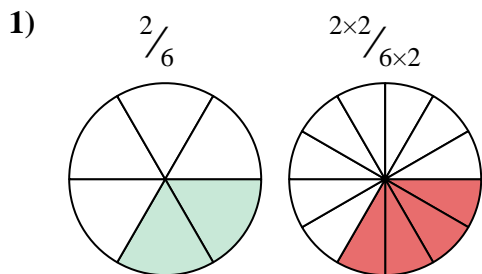
$\frac{5 \times 2}{6 \times 2}$



1. \_\_\_\_\_
2. \_\_\_\_\_
3. \_\_\_\_\_
4. \_\_\_\_\_
5. \_\_\_\_\_
6. \_\_\_\_\_
7. \_\_\_\_\_
8. \_\_\_\_\_
9. \_\_\_\_\_
10. \_\_\_\_\_



Shade in the equivalent fraction and answer with shaded fraction.



Answers

1.  $\frac{4}{12}$

2.  $\frac{3}{15}$

3.  $\frac{2}{6}$

4.  $\frac{2}{12}$

5.  $\frac{3}{9}$

6.  $\frac{5}{10}$

7.  $\frac{2}{4}$

8.  $\frac{8}{10}$

9.  $\frac{9}{15}$

10.  $\frac{10}{12}$



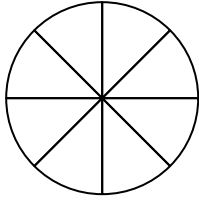
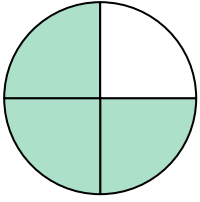
Shade in the equivalent fraction and answer with shaded fraction.

**Answers**

1)

$\frac{3}{4}$

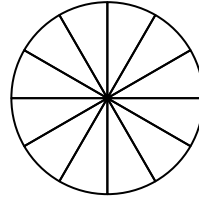
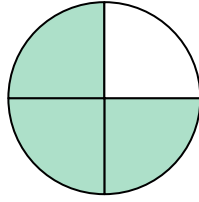
$\frac{3 \times 2}{4 \times 2}$



2)

$\frac{3}{4}$

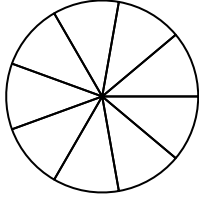
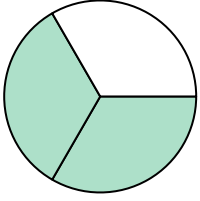
$\frac{3 \times 3}{4 \times 3}$



3)

$\frac{2}{3}$

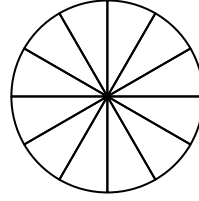
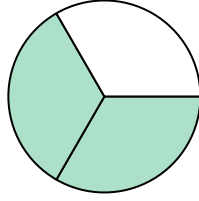
$\frac{2 \times 3}{3 \times 3}$



4)

$\frac{2}{3}$

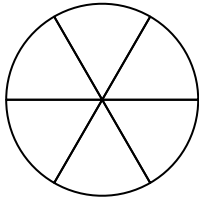
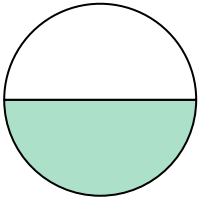
$\frac{2 \times 4}{3 \times 4}$



5)

$\frac{1}{2}$

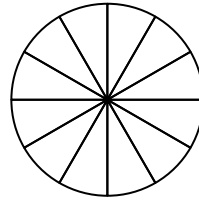
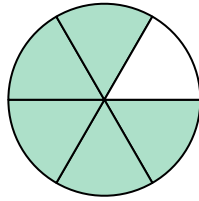
$\frac{1 \times 3}{2 \times 3}$



6)

$\frac{5}{6}$

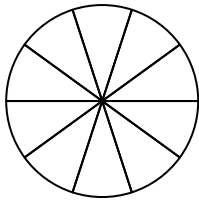
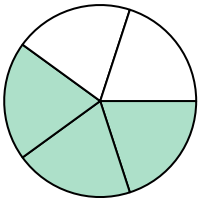
$\frac{5 \times 2}{6 \times 2}$



7)

$\frac{3}{5}$

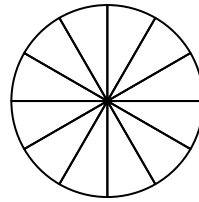
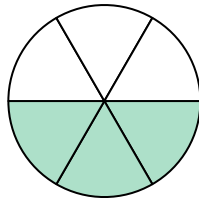
$\frac{3 \times 2}{5 \times 2}$



8)

$\frac{3}{6}$

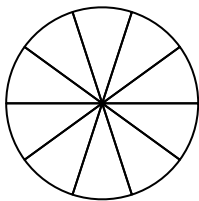
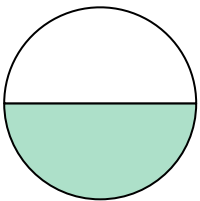
$\frac{3 \times 2}{6 \times 2}$



9)

$\frac{1}{2}$

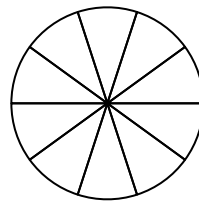
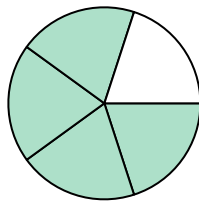
$\frac{1 \times 5}{2 \times 5}$



10)

$\frac{4}{5}$

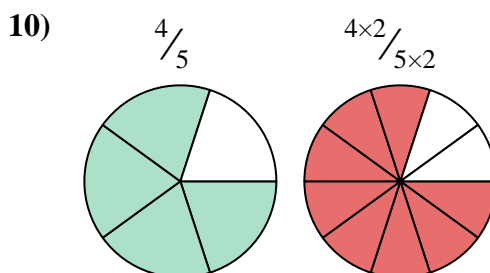
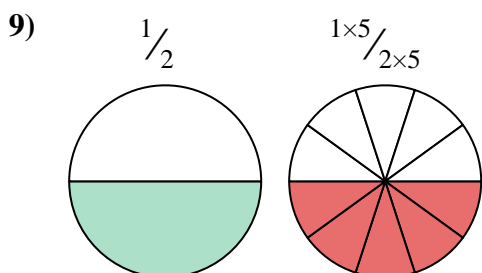
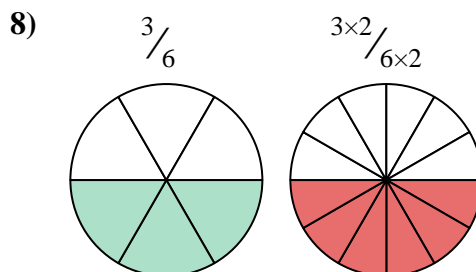
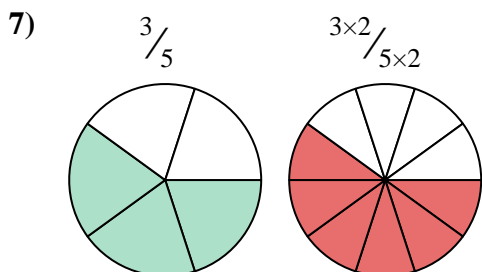
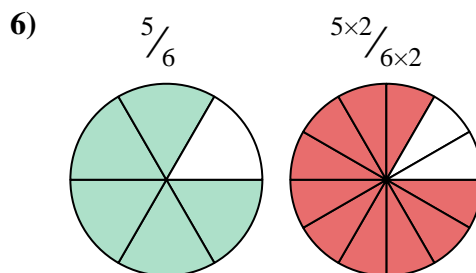
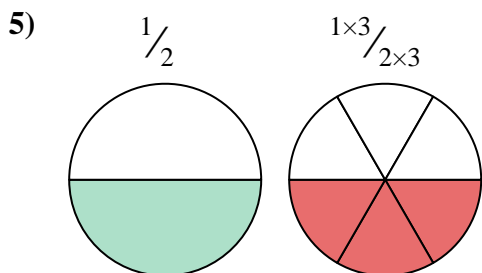
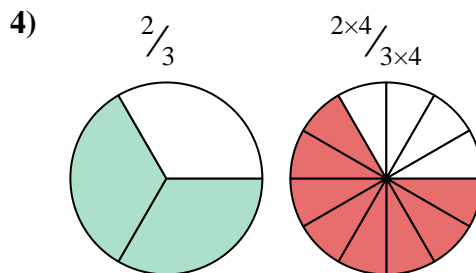
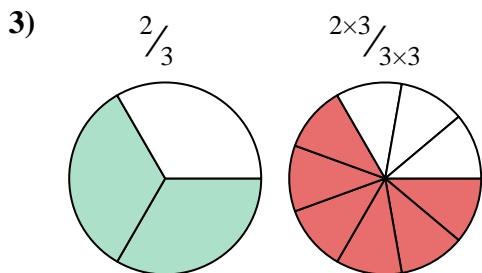
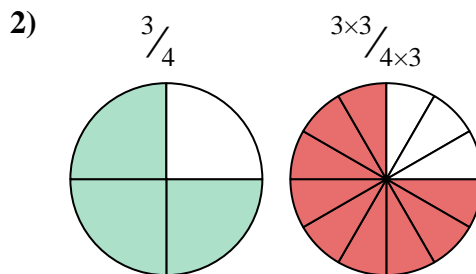
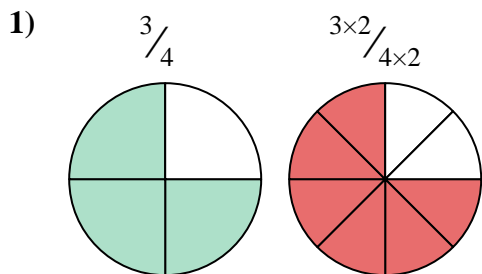
$\frac{4 \times 2}{5 \times 2}$



1. \_\_\_\_\_
2. \_\_\_\_\_
3. \_\_\_\_\_
4. \_\_\_\_\_
5. \_\_\_\_\_
6. \_\_\_\_\_
7. \_\_\_\_\_
8. \_\_\_\_\_
9. \_\_\_\_\_
10. \_\_\_\_\_



Shade in the equivalent fraction and answer with shaded fraction.



Answers

1.  $\frac{6}{8}$

2.  $\frac{9}{12}$

3.  $\frac{6}{9}$

4.  $\frac{8}{12}$

5.  $\frac{3}{6}$

6.  $\frac{10}{12}$

7.  $\frac{6}{10}$

8.  $\frac{6}{12}$

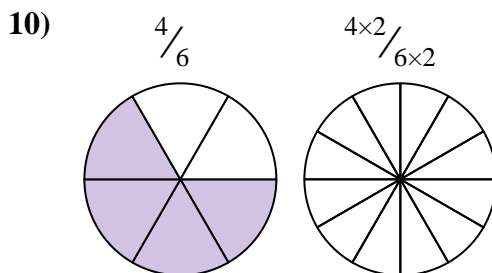
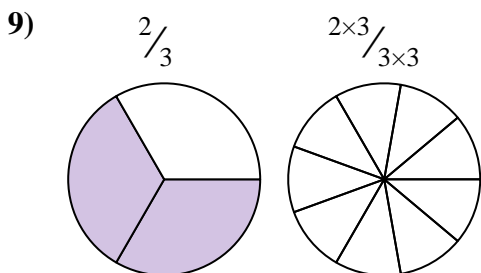
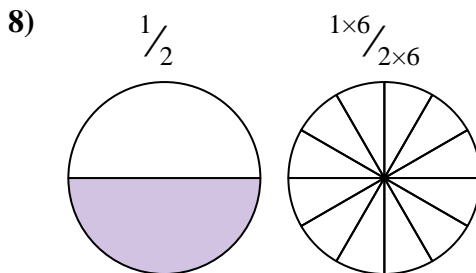
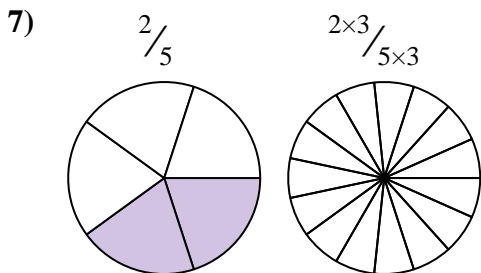
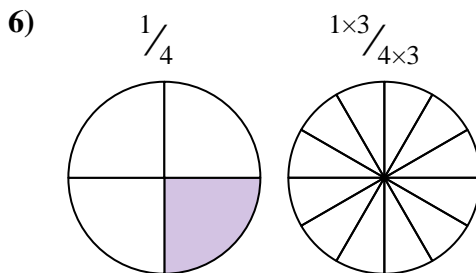
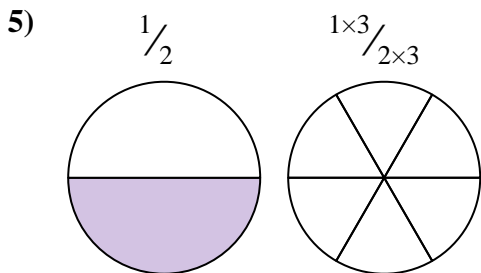
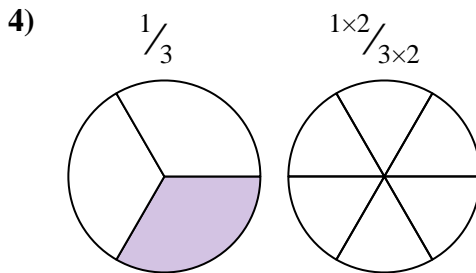
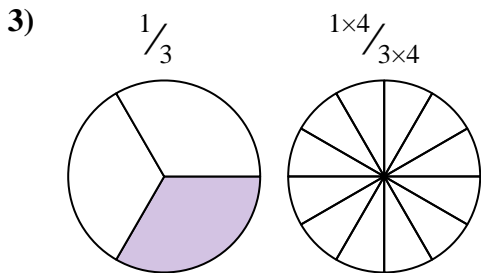
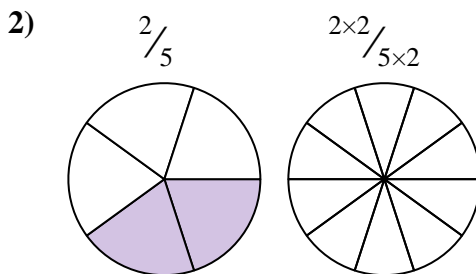
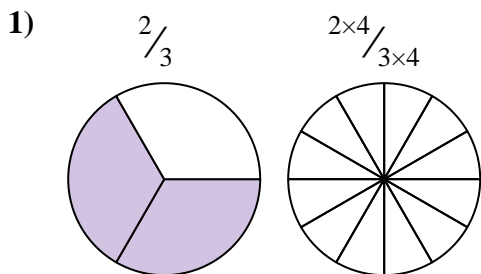
9.  $\frac{5}{10}$

10.  $\frac{8}{10}$



Shade in the equivalent fraction and answer with shaded fraction.

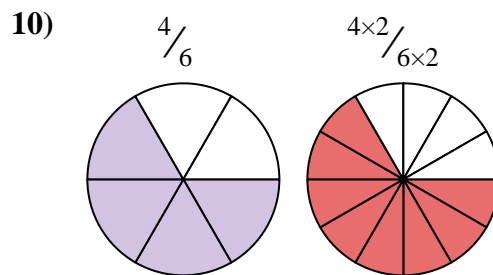
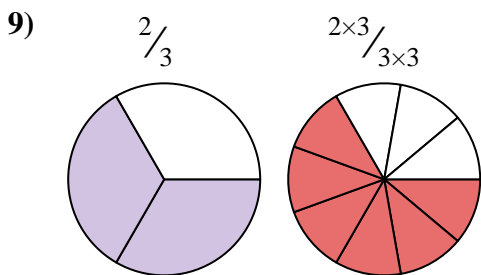
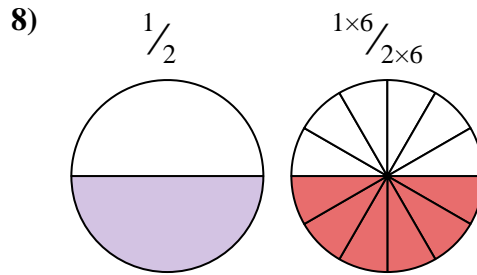
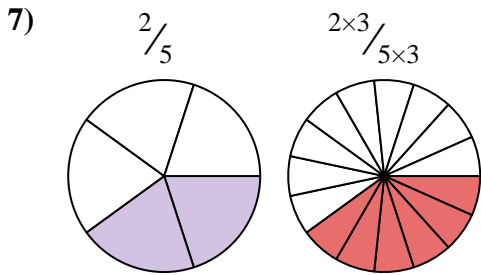
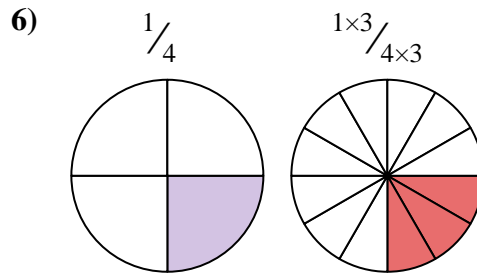
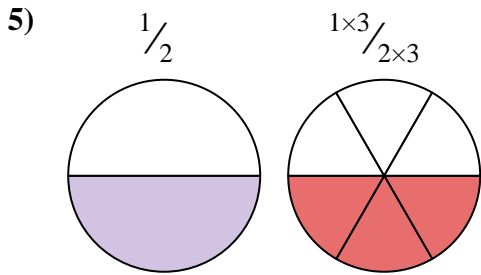
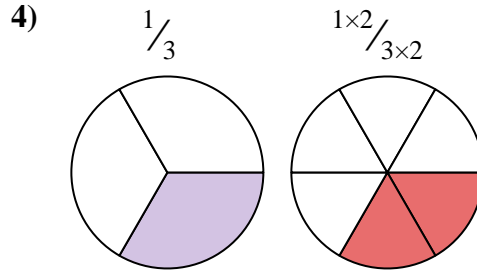
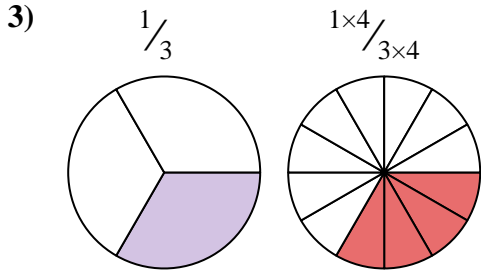
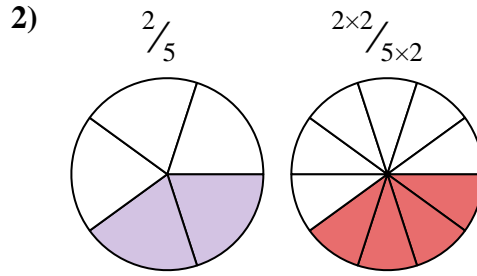
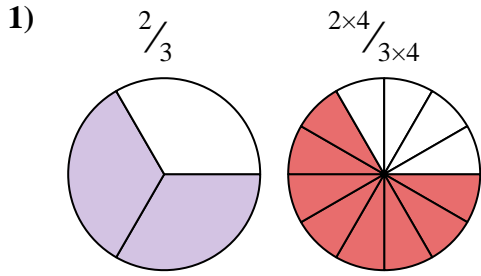
Answers



1. \_\_\_\_\_
2. \_\_\_\_\_
3. \_\_\_\_\_
4. \_\_\_\_\_
5. \_\_\_\_\_
6. \_\_\_\_\_
7. \_\_\_\_\_
8. \_\_\_\_\_
9. \_\_\_\_\_
10. \_\_\_\_\_



Shade in the equivalent fraction and answer with shaded fraction.



**Answers**

1.  $\frac{8}{12}$

2.  $\frac{4}{10}$

3.  $\frac{4}{12}$

4.  $\frac{2}{6}$

5.  $\frac{3}{6}$

6.  $\frac{3}{12}$

7.  $\frac{6}{15}$

8.  $\frac{6}{12}$

9.  $\frac{6}{9}$

10.  $\frac{8}{12}$



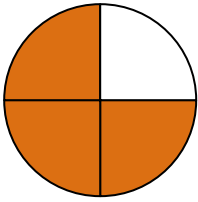


Shade in the equivalent fraction and answer with shaded fraction.

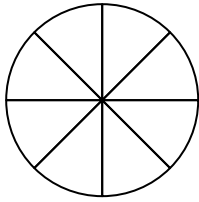
**Answers**

1)

$\frac{3}{4}$

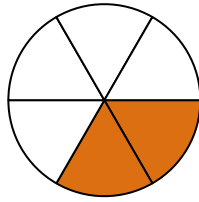


$\frac{3 \times 2}{4 \times 2}$

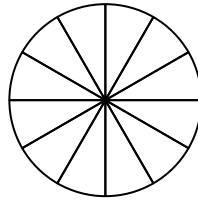


2)

$\frac{2}{6}$



$\frac{2 \times 2}{6 \times 2}$



1. \_\_\_\_\_

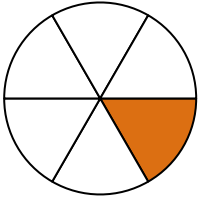
2. \_\_\_\_\_

3. \_\_\_\_\_

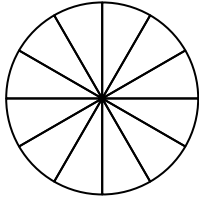
4. \_\_\_\_\_

3)

$\frac{1}{6}$

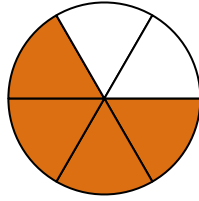


$\frac{1 \times 2}{6 \times 2}$

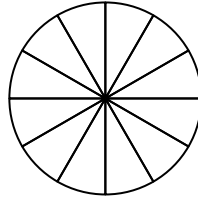


4)

$\frac{4}{6}$



$\frac{4 \times 2}{6 \times 2}$



5. \_\_\_\_\_

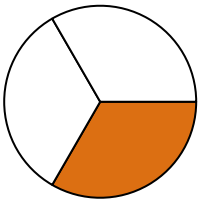
6. \_\_\_\_\_

7. \_\_\_\_\_

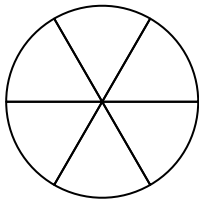
8. \_\_\_\_\_

5)

$\frac{1}{3}$

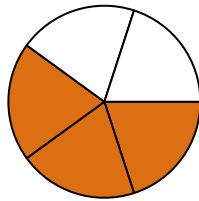


$\frac{1 \times 2}{3 \times 2}$

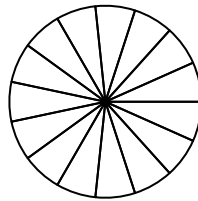


6)

$\frac{3}{5}$



$\frac{3 \times 3}{5 \times 3}$

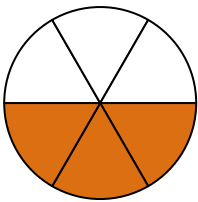


9. \_\_\_\_\_

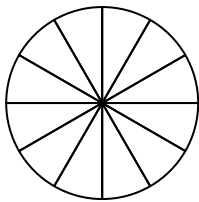
10. \_\_\_\_\_

7)

$\frac{3}{6}$

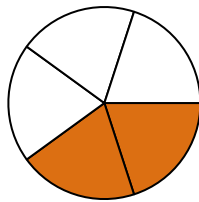


$\frac{3 \times 2}{6 \times 2}$

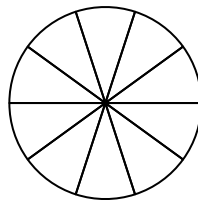


8)

$\frac{2}{5}$

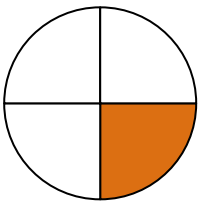


$\frac{2 \times 2}{5 \times 2}$

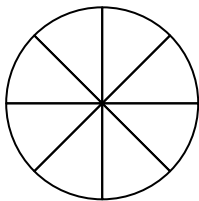


9)

$\frac{1}{4}$

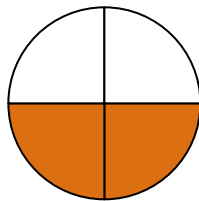


$\frac{1 \times 2}{4 \times 2}$

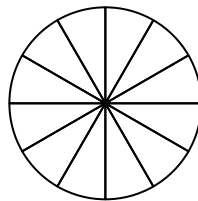


10)

$\frac{2}{4}$

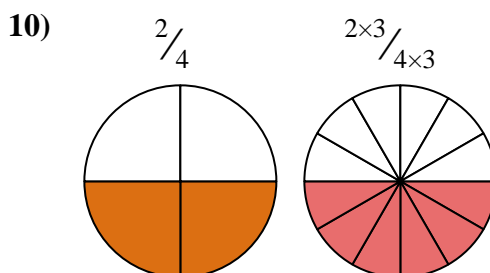
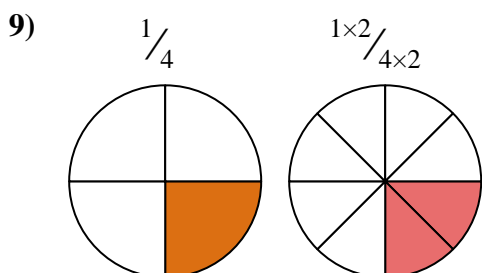
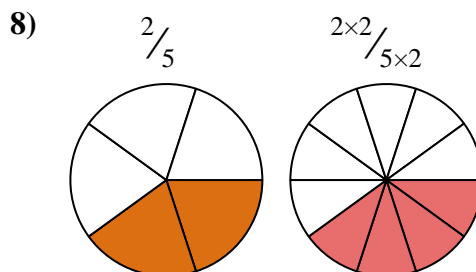
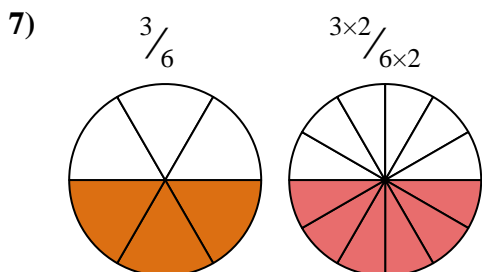
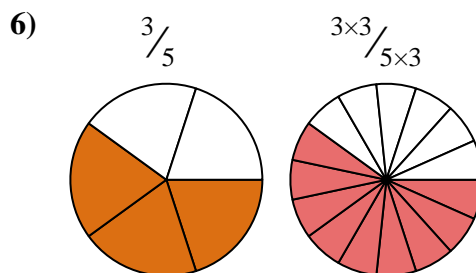
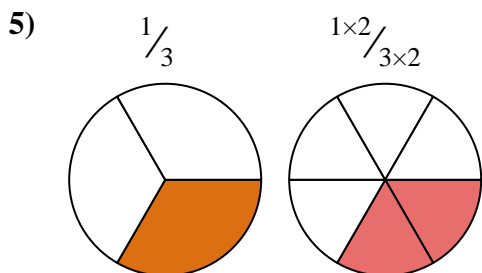
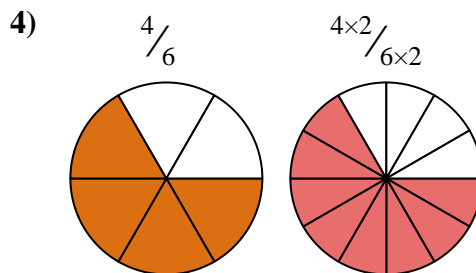
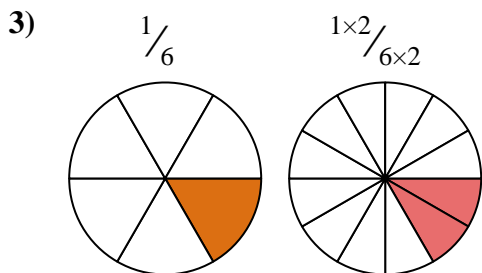
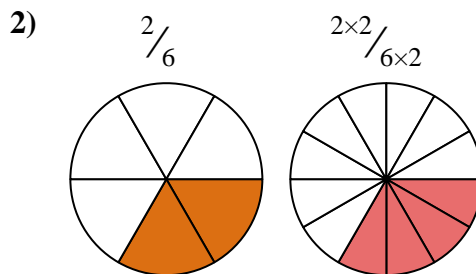
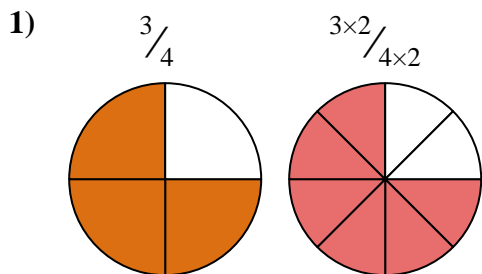


$\frac{2 \times 3}{4 \times 3}$





Shade in the equivalent fraction and answer with shaded fraction.



Answers

1.  $\frac{6}{8}$
2.  $\frac{4}{12}$
3.  $\frac{2}{12}$
4.  $\frac{8}{12}$
5.  $\frac{2}{6}$
6.  $\frac{9}{15}$
7.  $\frac{6}{12}$
8.  $\frac{4}{10}$
9.  $\frac{2}{8}$
10.  $\frac{6}{12}$



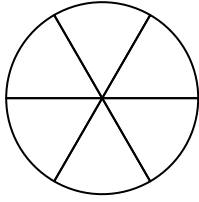
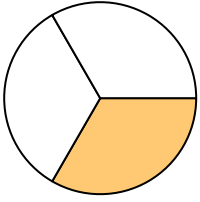
Shade in the equivalent fraction and answer with shaded fraction.

**Answers**

1)

$\frac{1}{3}$

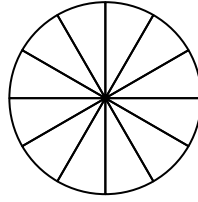
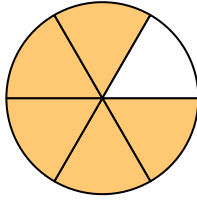
$\frac{1 \times 2}{3 \times 2}$



2)

$\frac{5}{6}$

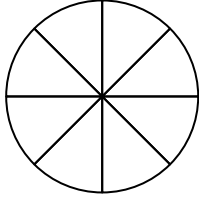
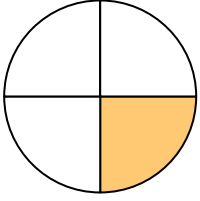
$\frac{5 \times 2}{6 \times 2}$



3)

$\frac{1}{4}$

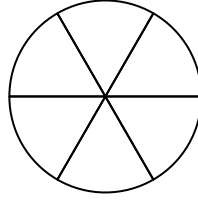
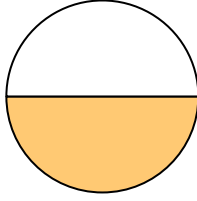
$\frac{1 \times 2}{4 \times 2}$



4)

$\frac{1}{2}$

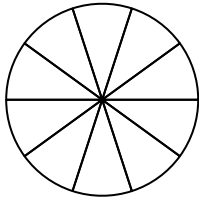
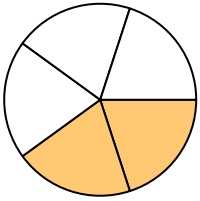
$\frac{1 \times 3}{2 \times 3}$



5)

$\frac{2}{5}$

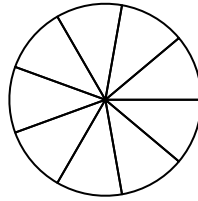
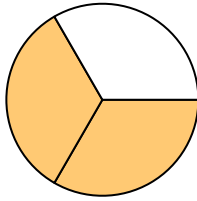
$\frac{2 \times 2}{5 \times 2}$



6)

$\frac{2}{3}$

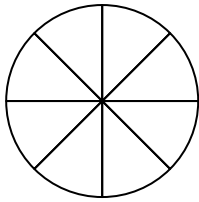
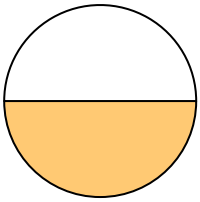
$\frac{2 \times 3}{3 \times 3}$



7)

$\frac{1}{2}$

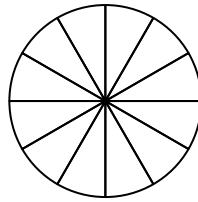
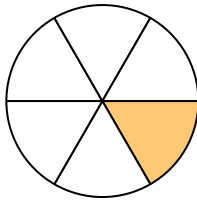
$\frac{1 \times 4}{2 \times 4}$



8)

$\frac{1}{6}$

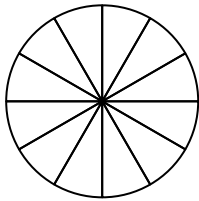
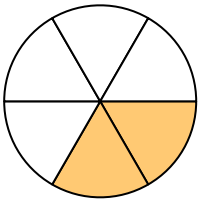
$\frac{1 \times 2}{6 \times 2}$



9)

$\frac{2}{6}$

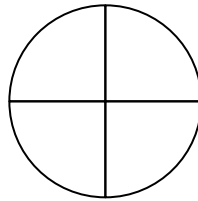
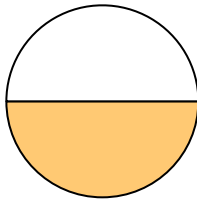
$\frac{2 \times 2}{6 \times 2}$



10)

$\frac{1}{2}$

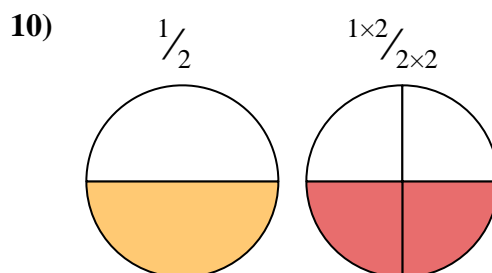
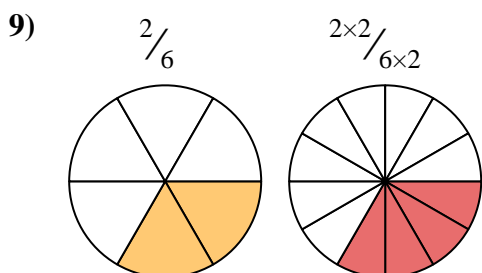
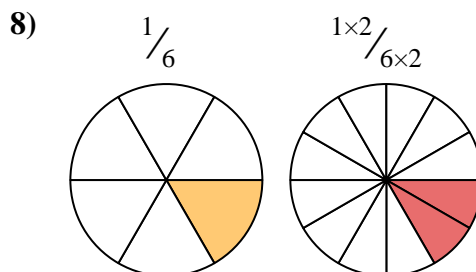
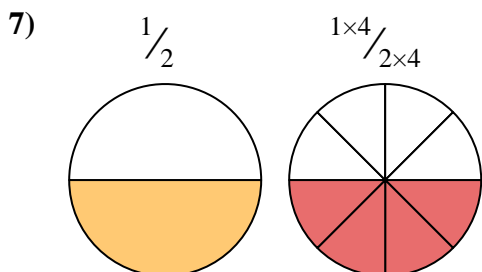
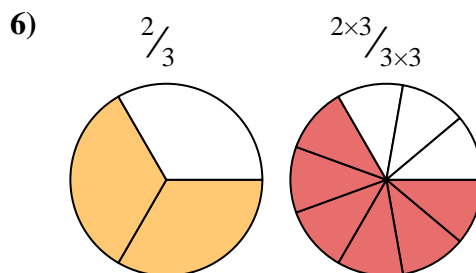
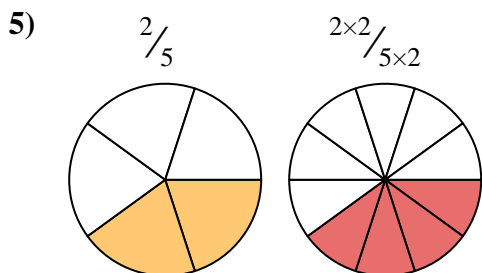
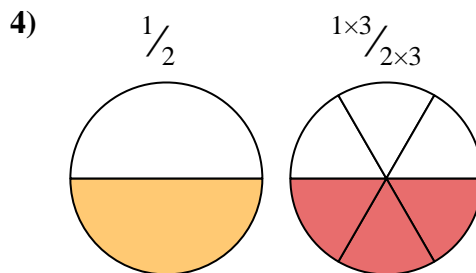
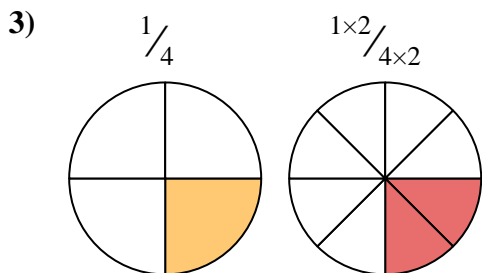
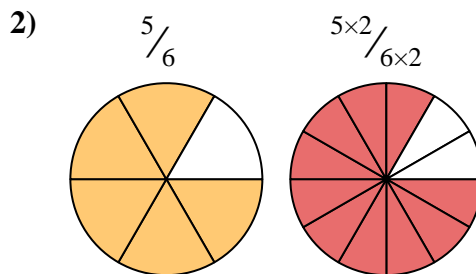
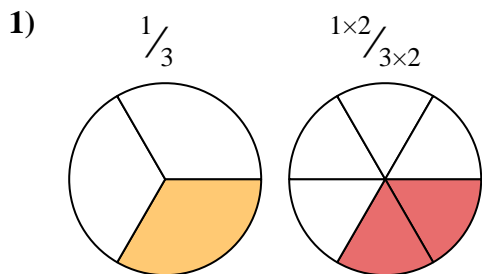
$\frac{1 \times 2}{2 \times 2}$



1. \_\_\_\_\_
2. \_\_\_\_\_
3. \_\_\_\_\_
4. \_\_\_\_\_
5. \_\_\_\_\_
6. \_\_\_\_\_
7. \_\_\_\_\_
8. \_\_\_\_\_
9. \_\_\_\_\_
10. \_\_\_\_\_



Shade in the equivalent fraction and answer with shaded fraction.



**Answers**

1.  $\frac{2}{6}$

2.  $\frac{10}{12}$

3.  $\frac{2}{8}$

4.  $\frac{3}{6}$

5.  $\frac{4}{10}$

6.  $\frac{6}{9}$

7.  $\frac{4}{8}$

8.  $\frac{2}{12}$

9.  $\frac{4}{12}$

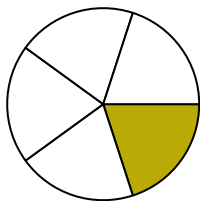
10.  $\frac{2}{4}$



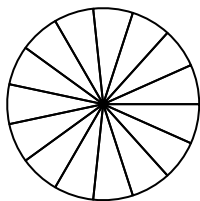
Shade in the equivalent fraction and answer with shaded fraction.

Answers

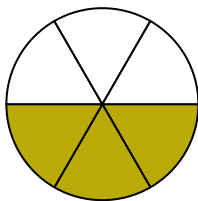
1)  $\frac{1}{5}$



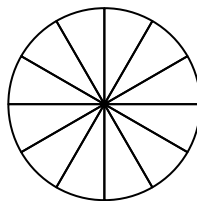
$\frac{1 \times 3}{5 \times 3}$



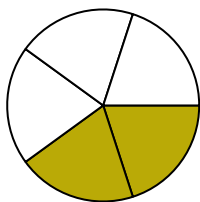
2)  $\frac{3}{6}$



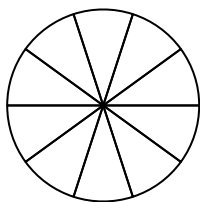
$\frac{3 \times 2}{6 \times 2}$



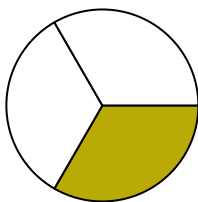
3)  $\frac{2}{5}$



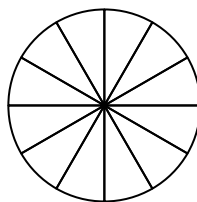
$\frac{2 \times 2}{5 \times 2}$



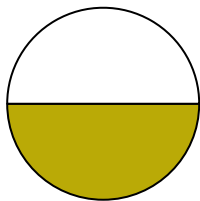
4)  $\frac{1}{3}$



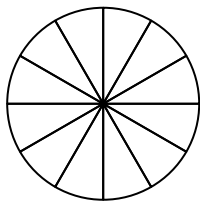
$\frac{1 \times 4}{3 \times 4}$



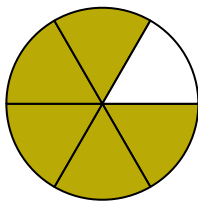
5)  $\frac{1}{2}$



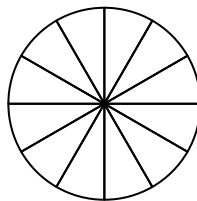
$\frac{1 \times 6}{2 \times 6}$



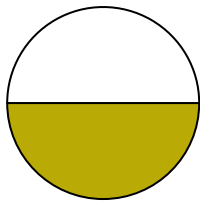
6)  $\frac{5}{6}$



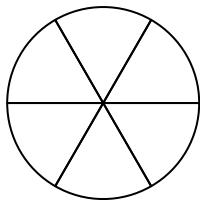
$\frac{5 \times 2}{6 \times 2}$



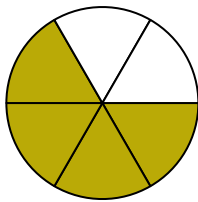
7)  $\frac{1}{2}$



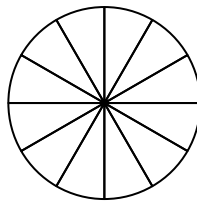
$\frac{1 \times 3}{2 \times 3}$



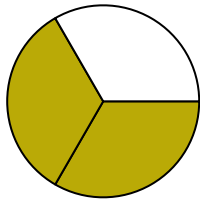
8)  $\frac{4}{6}$



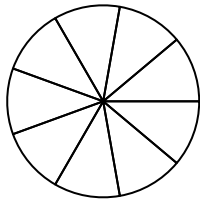
$\frac{4 \times 2}{6 \times 2}$



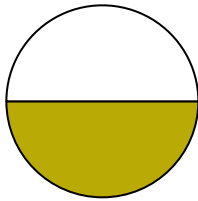
9)  $\frac{2}{3}$



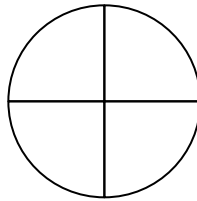
$\frac{2 \times 3}{3 \times 3}$



10)  $\frac{1}{2}$



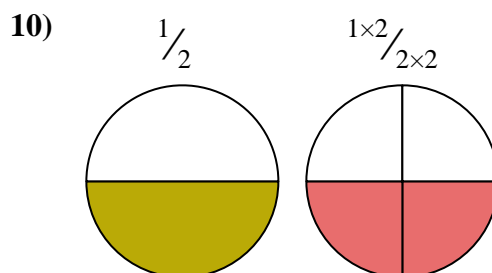
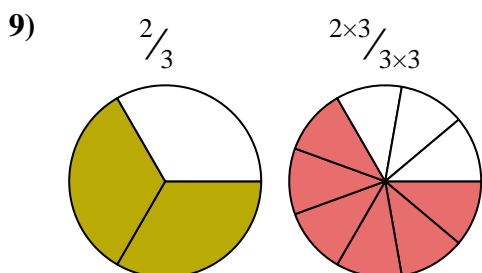
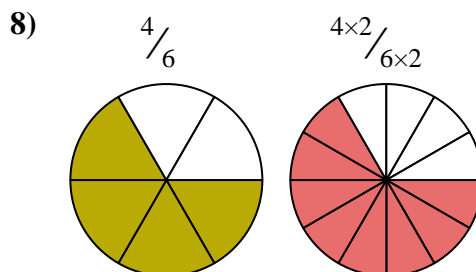
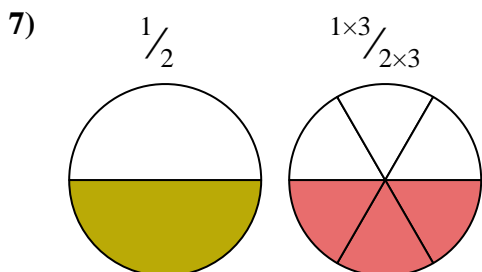
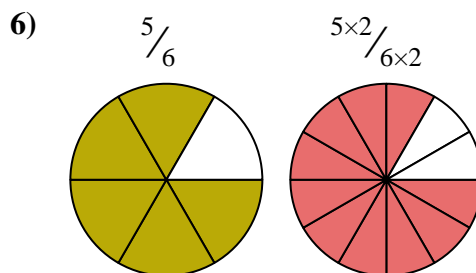
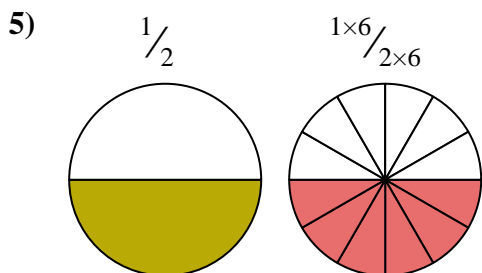
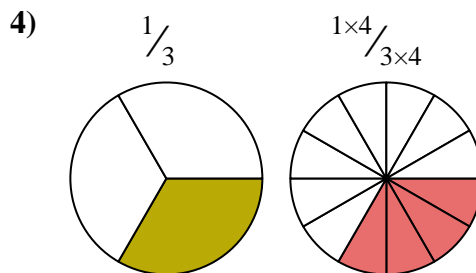
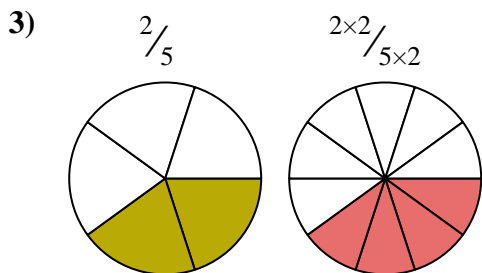
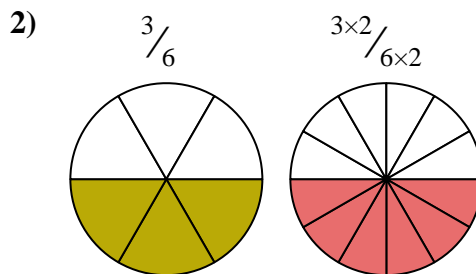
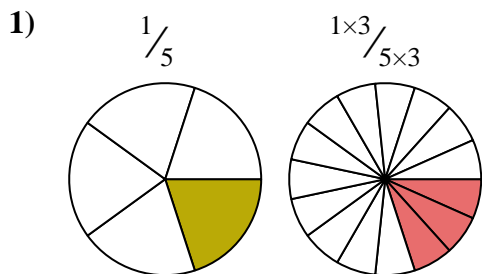
$\frac{1 \times 2}{2 \times 2}$



1. \_\_\_\_\_
2. \_\_\_\_\_
3. \_\_\_\_\_
4. \_\_\_\_\_
5. \_\_\_\_\_
6. \_\_\_\_\_
7. \_\_\_\_\_
8. \_\_\_\_\_
9. \_\_\_\_\_
10. \_\_\_\_\_



Shade in the equivalent fraction and answer with shaded fraction.



**Answers**

1.  $\frac{3}{15}$

2.  $\frac{6}{12}$

3.  $\frac{4}{10}$

4.  $\frac{4}{12}$

5.  $\frac{6}{12}$

6.  $\frac{10}{12}$

7.  $\frac{3}{6}$

8.  $\frac{8}{12}$

9.  $\frac{6}{9}$

10.  $\frac{2}{4}$



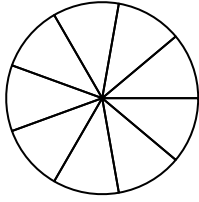
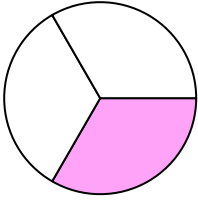
Shade in the equivalent fraction and answer with shaded fraction.

**Answers**

1)

$\frac{1}{3}$

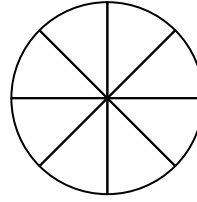
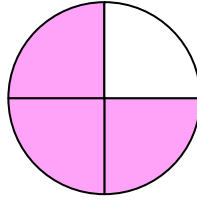
$\frac{1 \times 3}{3 \times 3}$



2)

$\frac{3}{4}$

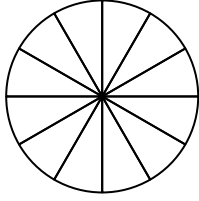
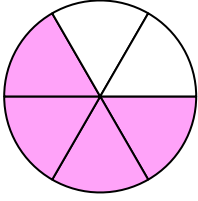
$\frac{3 \times 2}{4 \times 2}$



3)

$\frac{4}{6}$

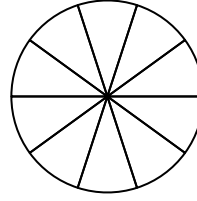
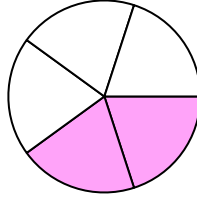
$\frac{4 \times 2}{6 \times 2}$



4)

$\frac{2}{5}$

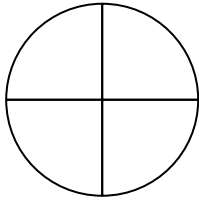
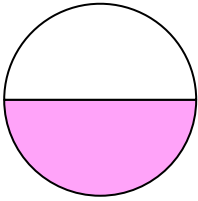
$\frac{2 \times 2}{5 \times 2}$



5)

$\frac{1}{2}$

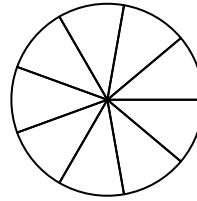
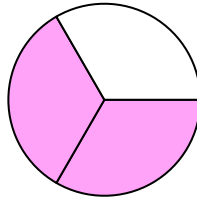
$\frac{1 \times 2}{2 \times 2}$



6)

$\frac{2}{3}$

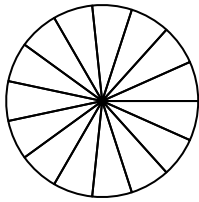
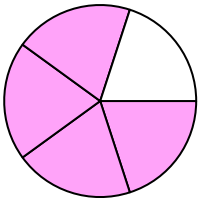
$\frac{2 \times 3}{3 \times 3}$



7)

$\frac{4}{5}$

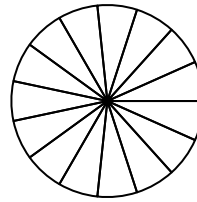
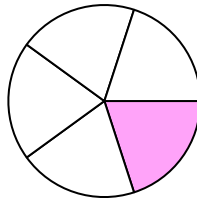
$\frac{4 \times 3}{5 \times 3}$



8)

$\frac{1}{5}$

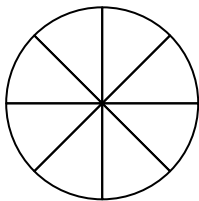
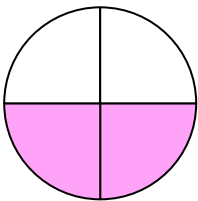
$\frac{1 \times 3}{5 \times 3}$



9)

$\frac{2}{4}$

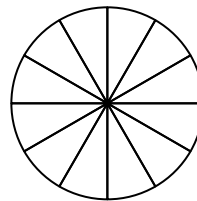
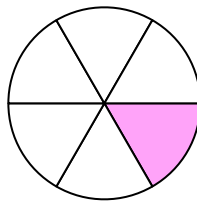
$\frac{2 \times 2}{4 \times 2}$



10)

$\frac{1}{6}$

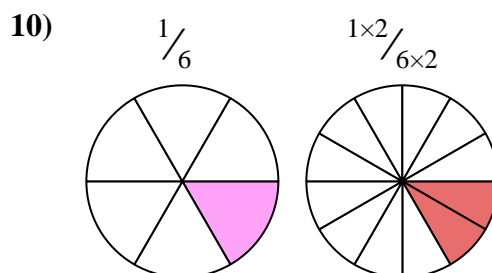
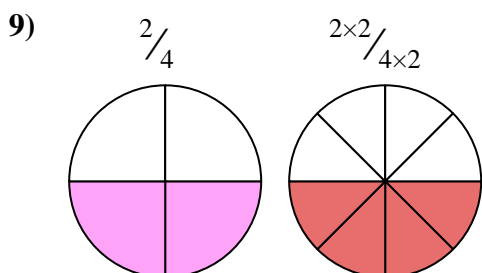
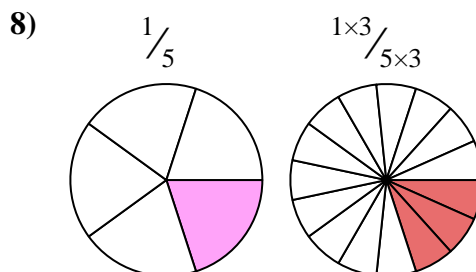
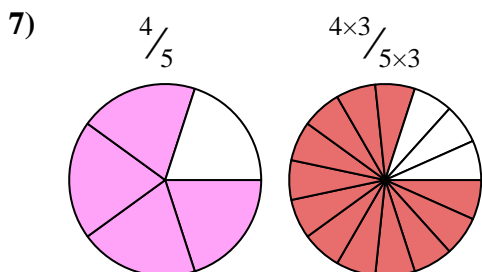
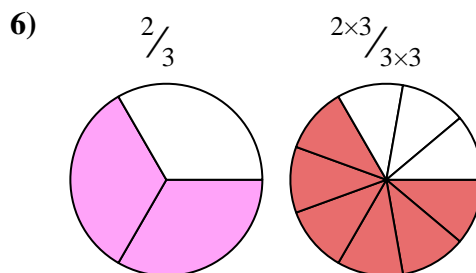
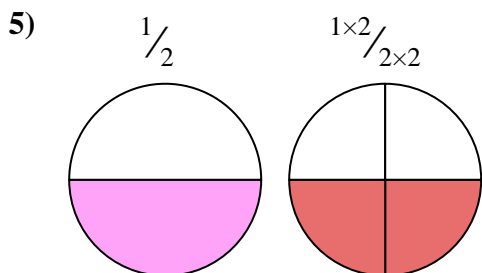
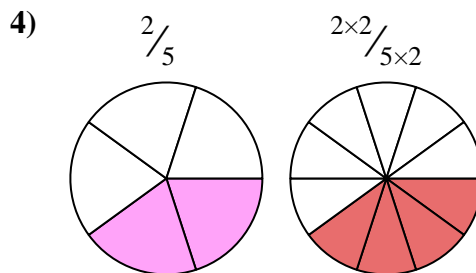
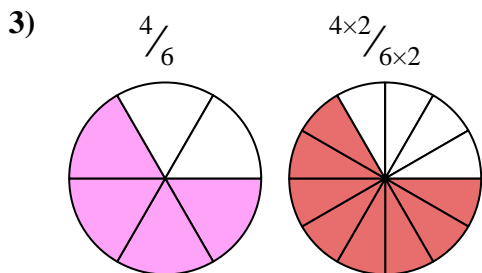
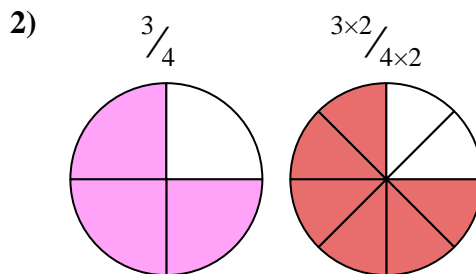
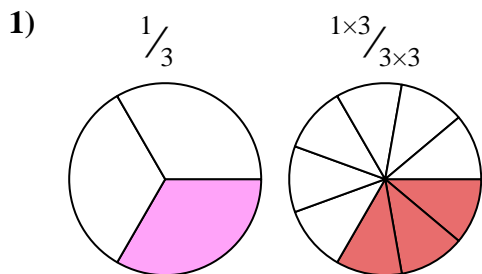
$\frac{1 \times 2}{6 \times 2}$



1. \_\_\_\_\_
2. \_\_\_\_\_
3. \_\_\_\_\_
4. \_\_\_\_\_
5. \_\_\_\_\_
6. \_\_\_\_\_
7. \_\_\_\_\_
8. \_\_\_\_\_
9. \_\_\_\_\_
10. \_\_\_\_\_



Shade in the equivalent fraction and answer with shaded fraction.



Answers

1.  $\frac{3}{9}$

2.  $\frac{6}{8}$

3.  $\frac{8}{12}$

4.  $\frac{4}{10}$

5.  $\frac{2}{4}$

6.  $\frac{6}{9}$

7.  $\frac{12}{15}$

8.  $\frac{3}{15}$

9.  $\frac{4}{8}$

10.  $\frac{2}{12}$





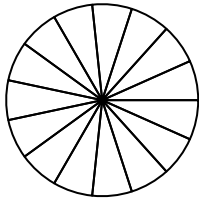
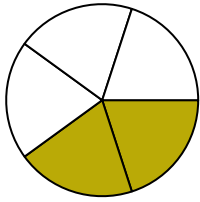
Shade in the equivalent fraction and answer with shaded fraction.

**Answers**

1)

$\frac{2}{5}$

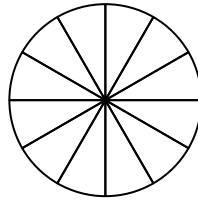
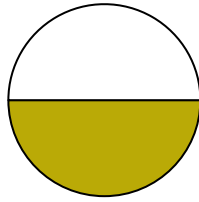
$\frac{2 \times 3}{5 \times 3}$



2)

$\frac{1}{2}$

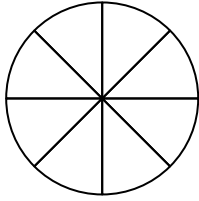
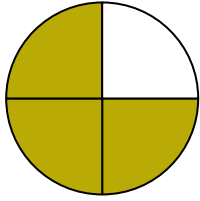
$\frac{1 \times 6}{2 \times 6}$



3)

$\frac{3}{4}$

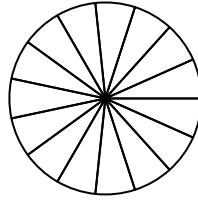
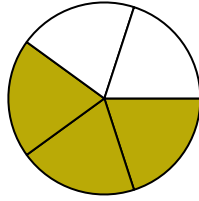
$\frac{3 \times 2}{4 \times 2}$



4)

$\frac{3}{5}$

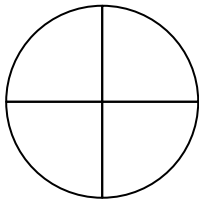
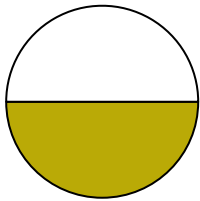
$\frac{3 \times 3}{5 \times 3}$



5)

$\frac{1}{2}$

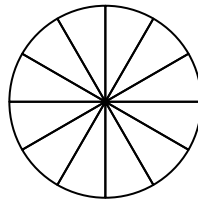
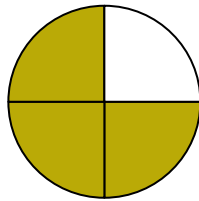
$\frac{1 \times 2}{2 \times 2}$



6)

$\frac{3}{4}$

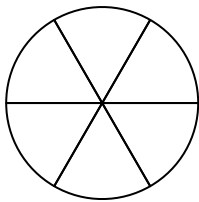
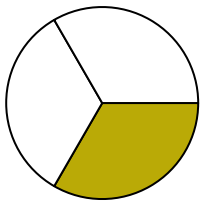
$\frac{3 \times 3}{4 \times 3}$



7)

$\frac{1}{3}$

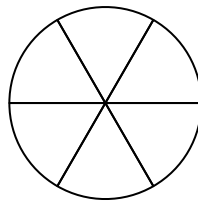
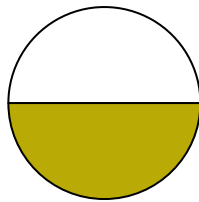
$\frac{1 \times 2}{3 \times 2}$



8)

$\frac{1}{2}$

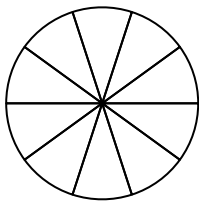
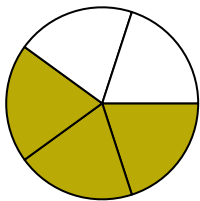
$\frac{1 \times 3}{2 \times 3}$



9)

$\frac{3}{5}$

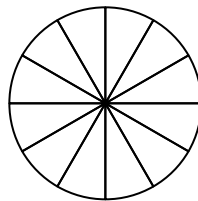
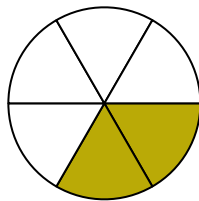
$\frac{3 \times 2}{5 \times 2}$



10)

$\frac{2}{6}$

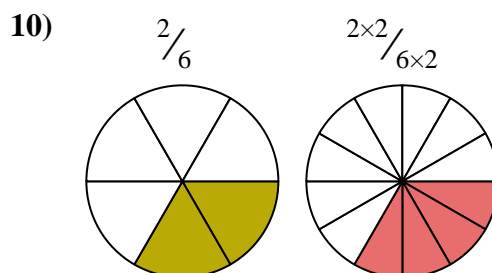
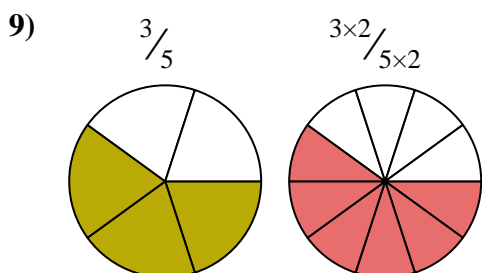
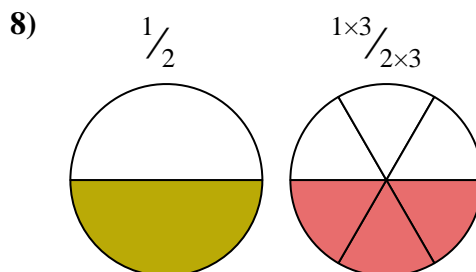
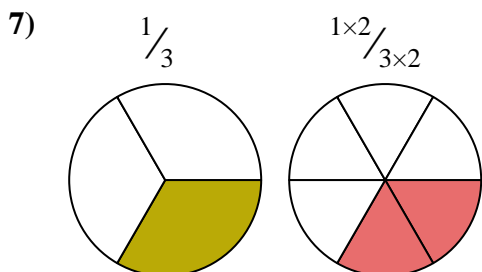
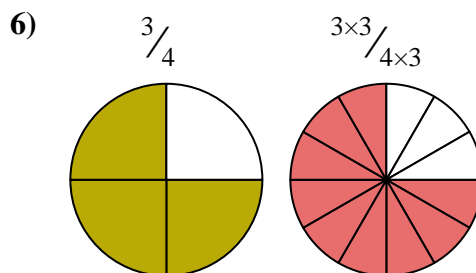
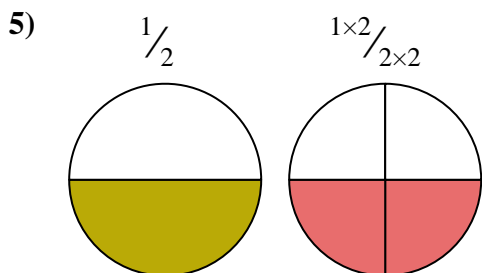
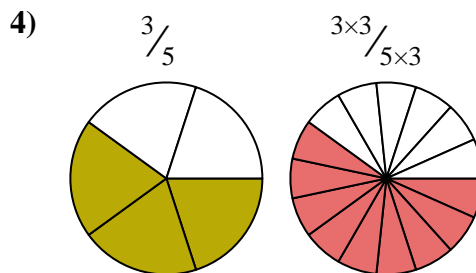
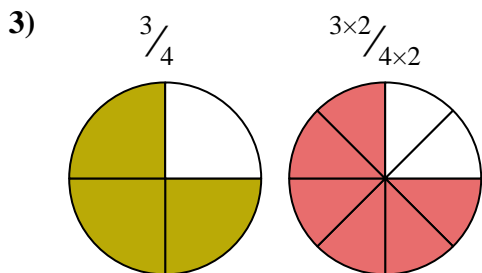
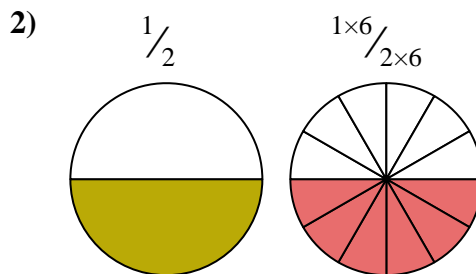
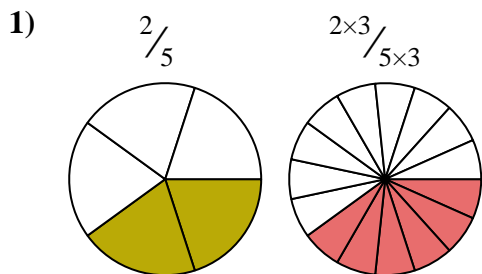
$\frac{2 \times 2}{6 \times 2}$



1. \_\_\_\_\_
2. \_\_\_\_\_
3. \_\_\_\_\_
4. \_\_\_\_\_
5. \_\_\_\_\_
6. \_\_\_\_\_
7. \_\_\_\_\_
8. \_\_\_\_\_
9. \_\_\_\_\_
10. \_\_\_\_\_



Shade in the equivalent fraction and answer with shaded fraction.



Answers

1.  $\frac{6}{15}$

2.  $\frac{6}{12}$

3.  $\frac{6}{8}$

4.  $\frac{9}{15}$

5.  $\frac{2}{4}$

6.  $\frac{9}{12}$

7.  $\frac{2}{6}$

8.  $\frac{3}{6}$

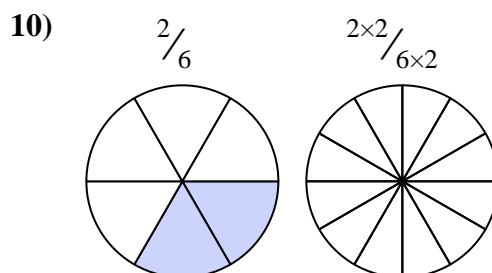
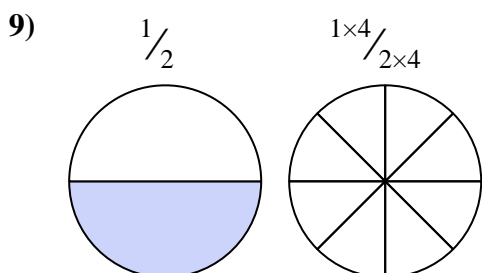
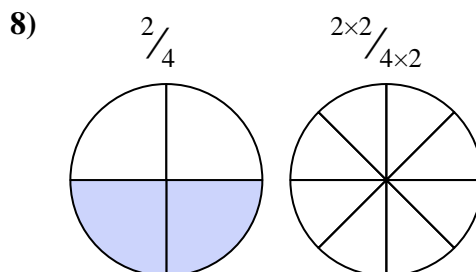
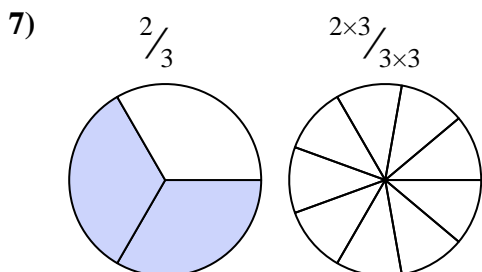
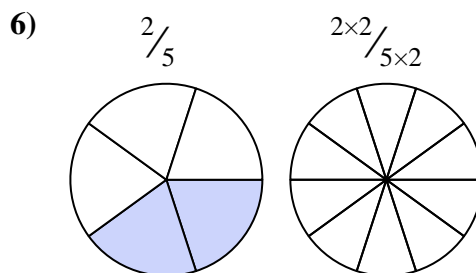
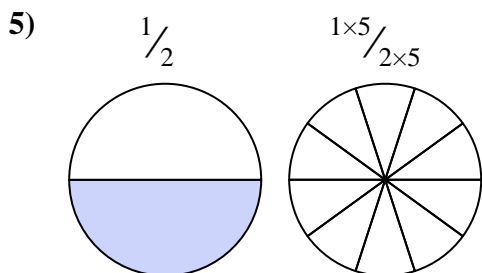
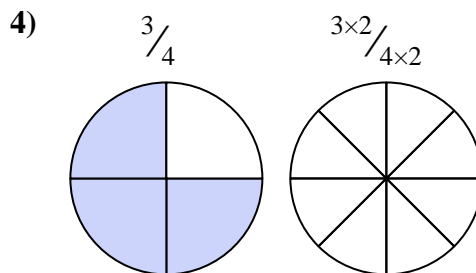
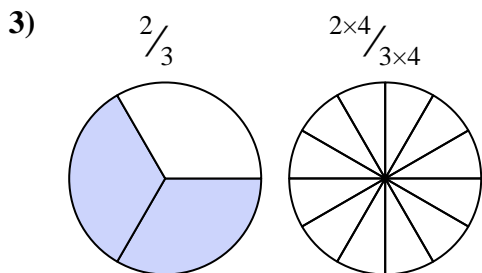
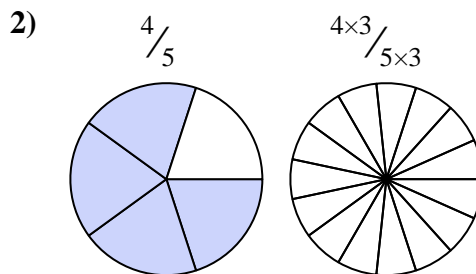
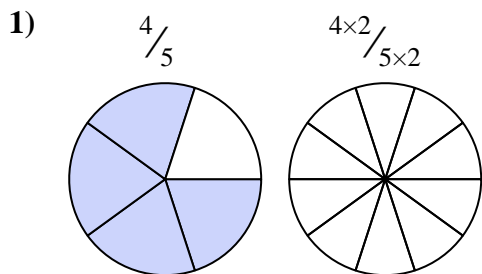
9.  $\frac{6}{10}$

10.  $\frac{4}{12}$



Shade in the equivalent fraction and answer with shaded fraction.

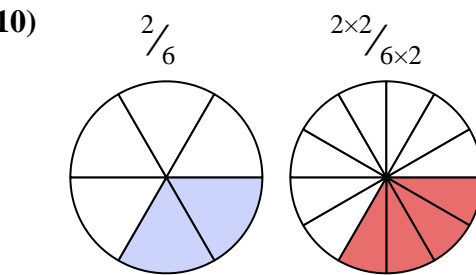
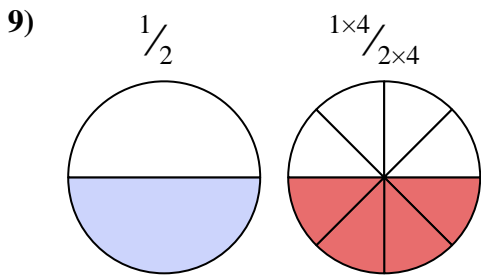
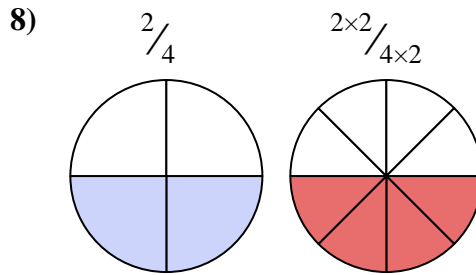
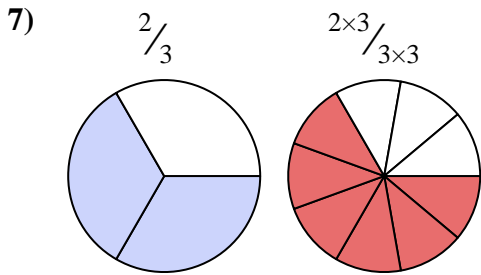
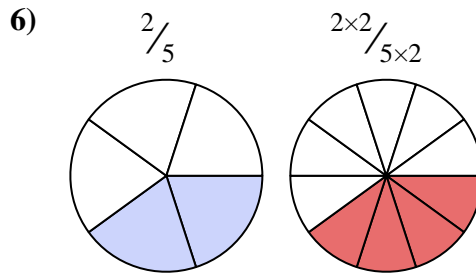
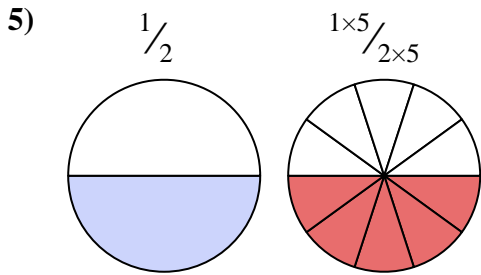
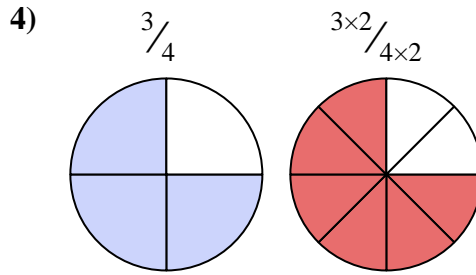
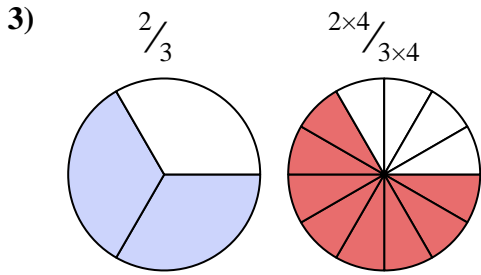
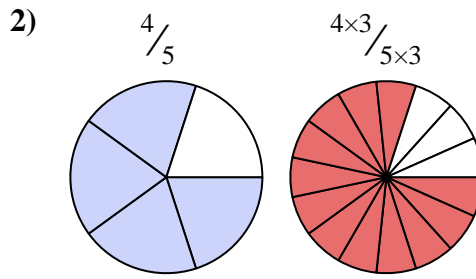
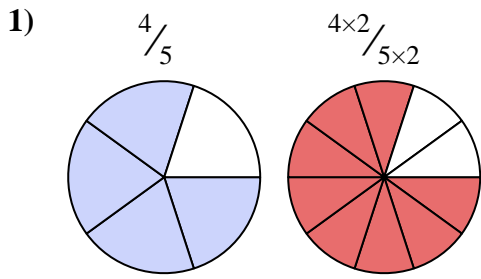
**Answers**



1. \_\_\_\_\_
2. \_\_\_\_\_
3. \_\_\_\_\_
4. \_\_\_\_\_
5. \_\_\_\_\_
6. \_\_\_\_\_
7. \_\_\_\_\_
8. \_\_\_\_\_
9. \_\_\_\_\_
10. \_\_\_\_\_



Shade in the equivalent fraction and answer with shaded fraction.



Answers

1.  $\frac{8}{10}$

2.  $\frac{12}{15}$

3.  $\frac{8}{12}$

4.  $\frac{6}{8}$

5.  $\frac{5}{10}$

6.  $\frac{4}{10}$

7.  $\frac{6}{9}$

8.  $\frac{4}{8}$

9.  $\frac{4}{8}$

10.  $\frac{4}{12}$