

**Solve each problem using a tape diagram.****Answers**

Ex) Paige was looking at her Nintendo collection. She had 150 wiiU games. She had $\frac{3}{6}$ as many DS games and $\frac{1}{3}$ as many 3ds games as DS games. How many 3ds games does she have?

Ex. 25

1. _____

2. _____

3. _____

4. _____

1) Olivia was trying to determine the weight of a small rock. She determined the small rock was $\frac{1}{2}$ as heavy as a medium rock. The medium rock was $\frac{2}{8}$ as heavy as a large rock. The large rock weighed 696 grams. How heavy was the small rock?

2) On Super Bowl Sunday a store sold 434 sodas. They sold $\frac{5}{7}$ as many bags of chips. They also sold $\frac{4}{5}$ as many jars of dip as bags of chips. How many jars of dip did they sell?

3) Two years ago the fair had $\frac{3}{4}$ as many people as 1 year ago. 1 year ago the fair had $\frac{4}{5}$ as many people as this year. This year the fair had 245 people. How many people did the fair have 2 years ago?

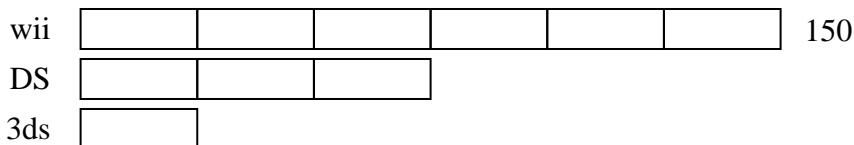
4) A chef was ordering vegetables for his restaurant. He order \$295 worth of potatoes. He also spent $\frac{3}{5}$ as much on tomatoes. Finally he spent $\frac{1}{3}$ as much on green beans as he did on tomatoes. How much did he spend on green beans?



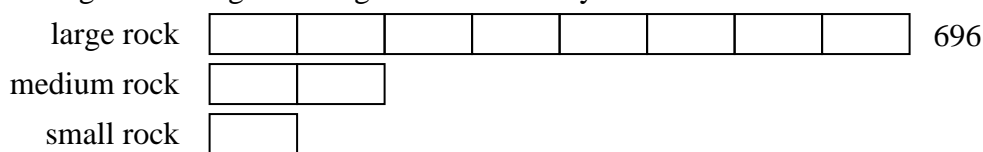
Solve each problem using a tape diagram.

Answers


- Ex) Paige was looking at her Nintendo collection. She had 150 wiiU games. She had $\frac{3}{6}$ as many DS games and $\frac{1}{3}$ as many 3ds games as DS games. How many 3ds games does she have?

Ex. 251. 872. 2483. 1474. 59

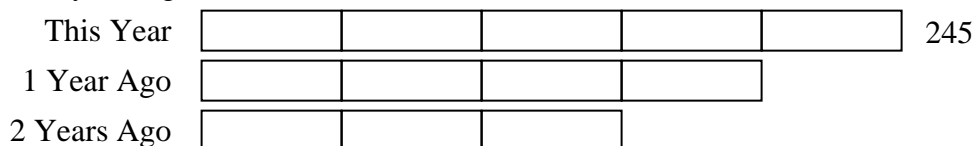
- 1) Olivia was trying to determine the weight of a small rock. She determined the small rock was $\frac{1}{2}$ as heavy as a medium rock. The medium rock was $\frac{2}{8}$ as heavy as a large rock. The large rock weighed 696 grams. How heavy was the small rock?



- 2) On Super Bowl Sunday a store sold 434 sodas. They sold $\frac{5}{7}$ as many bags of chips. They also sold $\frac{4}{5}$ as many jars of dip as bags of chips. How many jars of dip did they sell?



- 3) Two years ago the fair had $\frac{3}{4}$ as many people as 1 year ago. 1 year ago the fair had $\frac{4}{5}$ as many people as this year. This year the fair had 245 people. How many people did the fair have 2 years ago?



- 4) A chef was ordering vegetables for his restaurant. He order \$295 worth of potatoes. He also spent $\frac{3}{5}$ as much on tomatoes. Finally he spent $\frac{1}{3}$ as much on green beans as he did on tomatoes. How much did he spend on green beans?

