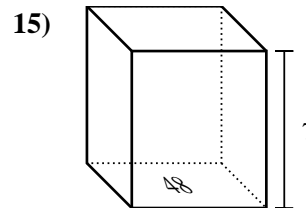
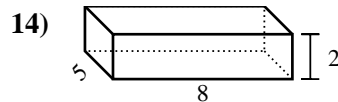
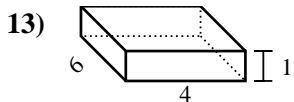
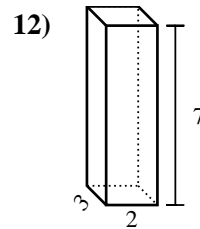
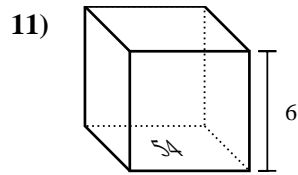
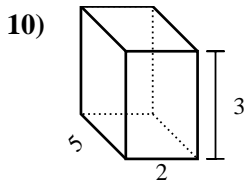
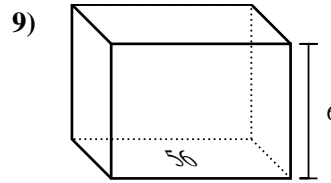
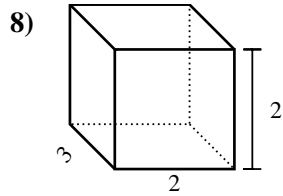
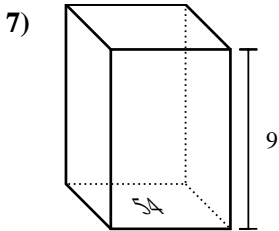
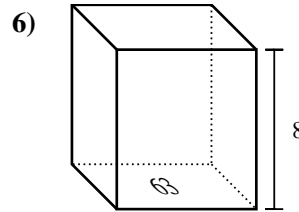
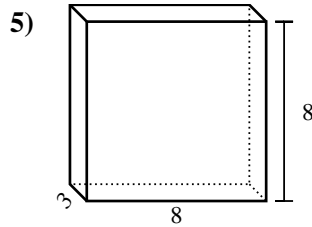
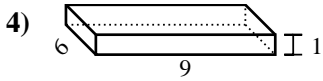
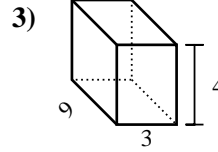
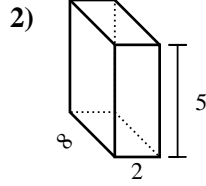
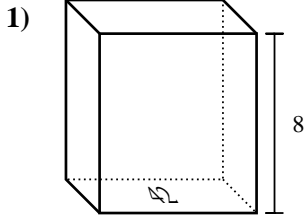




Find the volume of each rectangular prism. Remember $V = BH$ and $V = L \times W \times H$

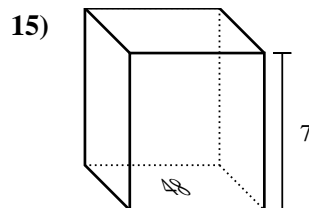
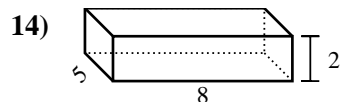
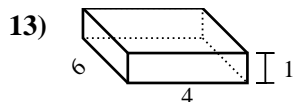
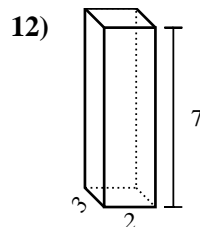
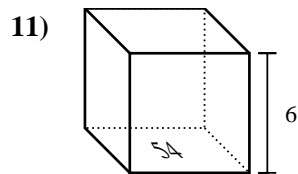
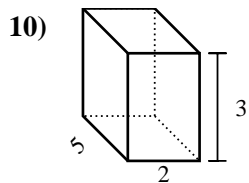
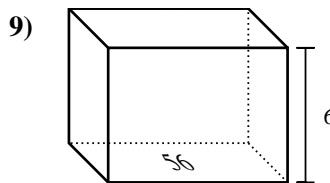
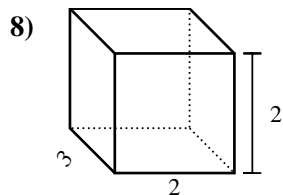
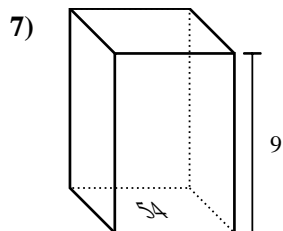
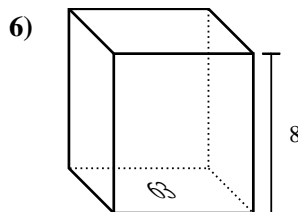
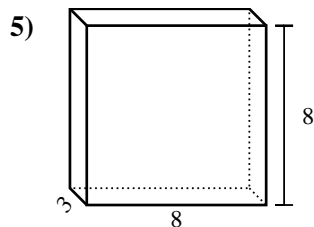
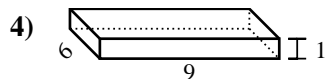
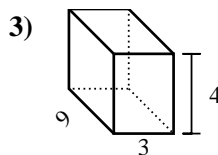
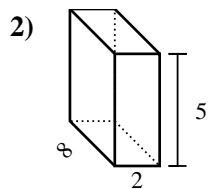
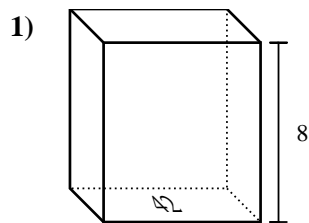
Answers



1. _____
2. _____
3. _____
4. _____
5. _____
6. _____
7. _____
8. _____
9. _____
10. _____
11. _____
12. _____
13. _____
14. _____
15. _____



Find the volume of each rectangular prism. Remember $V = BH$ and $V = L \times W \times H$



Answers

1. 336 cm³

2. 80 cm³

3. 108 cm³

4. 54 cm³

5. 192 cm³

6. 504 cm³

7. 486 cm³

8. 12 cm³

9. 336 cm³

10. 30 cm³

11. 324 cm³

12. 42 cm³

13. 24 cm³

14. 80 cm³

15. 336 cm³