



Fill in the blanks to find the amounts.

Answers

Ex)

1 5

Tens Ones

Ex)

0 4

Tens Ones

1)

Tens Ones

Ex. 15

Ex. 4

1. _____

2. _____

3. _____

4. _____

5. _____

6. _____

7. _____

8. _____

9. _____

10. _____

2)

Tens Ones

3)

Tens Ones

4)

Tens Ones

5)

Tens Ones

6)

Tens Ones

7)

Tens Ones

8)

Tens Ones

9)

Tens Ones

10)

Tens Ones



Fill in the blanks to find the amounts.

Ex)

1 **5**

Tens **Ones**

Ex)

0 **4**

Tens **Ones**

1)

1 **0**

Tens **Ones**

2)

0 **8**

Tens **Ones**

3)

1 **3**

Tens **Ones**

4)

0 **7**

Tens **Ones**

5)

1 **8**

Tens **Ones**

6)

1 **9**

Tens **Ones**

7)

0 **6**

Tens **Ones**

8)

0 **9**

Tens **Ones**

9)

1 **6**

Tens **Ones**

10)

1 **7**

Tens **Ones**

Answers

Ex. 15

Ex. 4

1. 10

2. 8

3. 13

4. 7

5. 18

6. 19

7. 6

8. 9

9. 16

10. 17



Fill in the blanks to find the amounts.

Answers

Ex)

1 5

Tens Ones

Ex)

0 4

Tens Ones

1)

Tens Ones

Ex. 15

Ex. 4

1. _____

2. _____

3. _____

4. _____

5. _____

6. _____

7. _____

8. _____

9. _____

10. _____

2)

Tens Ones

3)

Tens Ones

4)

Tens Ones

5)

Tens Ones

6)

Tens Ones

7)

Tens Ones

8)

Tens Ones

9)

Tens Ones

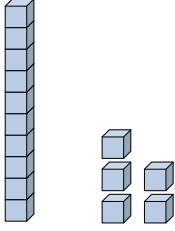
10)

Tens Ones




Fill in the blanks to find the amounts.

Ex)



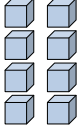
<u>1</u>	<u>5</u>
Tens	Ones

Ex)



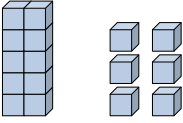
<u>0</u>	<u>4</u>
Tens	Ones

1)




<u>0</u>	<u>8</u>
Tens	Ones

2)



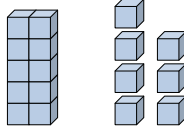
<u>1</u>	<u>6</u>
Tens	Ones

3)



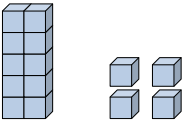
<u>0</u>	<u>2</u>
Tens	Ones

4)



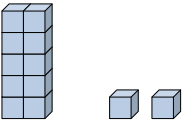
<u>1</u>	<u>7</u>
Tens	Ones

5)




<u>1</u>	<u>4</u>
Tens	Ones

6)




<u>1</u>	<u>2</u>
Tens	Ones

7)



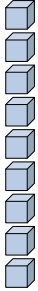
<u>0</u>	<u>5</u>
Tens	Ones

8)




<u>0</u>	<u>3</u>
Tens	Ones

9)



<u>0</u>	<u>9</u>
Tens	Ones

10)



<u>0</u>	<u>1</u>
Tens	Ones

Answers

Ex. 15

Ex. 4

1. 8

2. 16

3. 2

4. 17

5. 14

6. 12

7. 5

8. 3

9. 9

10. 1



Fill in the blanks to find the amounts.

Answers

Ex)

1
5

Tens
Ones

Ex)

0
4

Tens
Ones

1)

1

Tens
Ones

2)

2

Tens
Ones

3)

6

Tens
Ones

4)

4

Tens
Ones

5)

1
2

Tens
Ones

6)

1
6

Tens
Ones

7)

1
8

Tens
Ones

8)

2
0

Tens
Ones

9)

1
9

Tens
Ones

10)

5

Tens
Ones

Ex. 15

Ex. 4

1. _____

2. _____

3. _____

4. _____

5. _____

6. _____

7. _____

8. _____

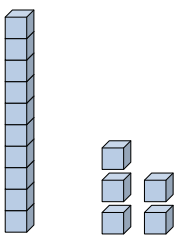
9. _____

10. _____




Fill in the blanks to find the amounts.

Ex)




<u>1</u>	<u>5</u>
Tens	Ones

Ex)




<u>0</u>	<u>4</u>
Tens	Ones

1)



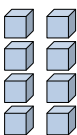
<u>0</u>	<u>1</u>
Tens	Ones

2)



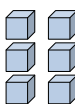
<u>0</u>	<u>2</u>
Tens	Ones

3)



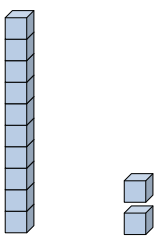
<u>0</u>	<u>8</u>
Tens	Ones

4)




<u>0</u>	<u>6</u>
Tens	Ones

5)



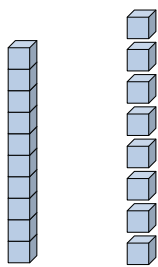
<u>1</u>	<u>2</u>
Tens	Ones

6)



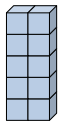
<u>0</u>	<u>7</u>
Tens	Ones

7)



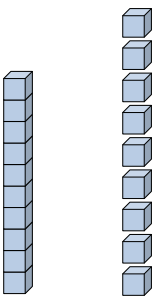
<u>1</u>	<u>8</u>
Tens	Ones

8)




<u>1</u>	<u>0</u>
Tens	Ones

9)



<u>1</u>	<u>9</u>
Tens	Ones

10)



<u>0</u>	<u>5</u>
Tens	Ones

Answers

Ex. 15

Ex. 4

1. 1

2. 2

3. 8

4. 6

5. 12

6. 7

7. 18

8. 10

9. 19

10. 5



Fill in the blanks to find the amounts.

Answers

Ex)

1 **5**

Tens **Ones**

Ex)

0 **4**

Tens **Ones**

1)

Tens **Ones**

Ex. 15

Ex. 4

2)

Tens **Ones**

3)

Tens **Ones**

4)

Tens **Ones**

1. _____

2. _____

3. _____

4. _____

5. _____

6. _____

7. _____

8. _____

9. _____

10. _____

5)

Tens **Ones**

6)

Tens **Ones**

7)

Tens **Ones**

8)

Tens **Ones**

9)

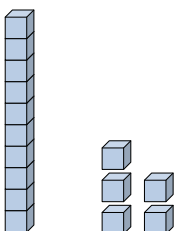
Tens **Ones**

10)


Tens **Ones**



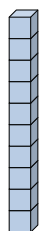
Fill in the blanks to find the amounts.

Ex) 
1 5

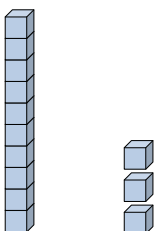
 Tens **Ones**

Ex) 
0 4

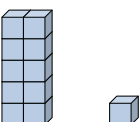
 Tens **Ones**

1) 
1 0

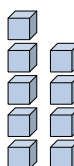
 Tens **Ones**

2) 
1 3

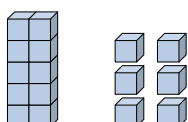
 Tens **Ones**

3) 
1 1


 Tens **Ones**

4) 
0 9

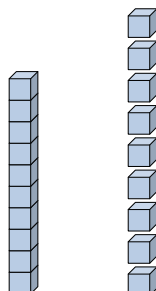
 Tens **Ones**

5) 
1 6

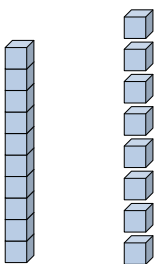
 Tens **Ones**

6) 
0 3


 Tens **Ones**

7) 
1 9

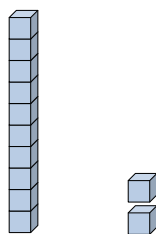
 Tens **Ones**

8) 
1 8

 Tens **Ones**

9) 
0 1

 Tens **Ones**

10) 
1 2

 Tens **Ones**

Answers

Ex. 15

Ex. 4

1. 10

2. 13

3. 11

4. 9

5. 16

6. 3

7. 19

8. 18

9. 1

10. 12



Fill in the blanks to find the amounts.

Answers

Ex)

1
5

Tens
Ones

Ex)

0
4

Tens
Ones

1)

Tens
Ones

2)

Tens
Ones

3)

Tens
Ones

4)

Tens
Ones

5)

Tens
Ones

6)

Tens
Ones

7)

Tens
Ones

8)

Tens
Ones

9)

Tens
Ones

10)

Tens
Ones

Ex. 15

Ex. 4

1. _____

2. _____

3. _____

4. _____

5. _____

6. _____

7. _____

8. _____

9. _____

10. _____



Fill in the blanks to find the amounts.

Ex)

1
5

Tens
Ones

Ex)

0
4

Tens
Ones

1)

0
5

Tens
Ones

2)

1
3

Tens
Ones

3)

1
9

Tens
Ones

4)

0
9

Tens
Ones

5)

1
7

Tens
Ones

6)

1
1

Tens
Ones

7)

0
2

Tens
Ones

8)

0
8

Tens
Ones

9)

0
6

Tens
Ones

10)

0
3

Tens
Ones

Answers

Ex. 15

Ex. 4

1. 5

2. 13

3. 19

4. 9

5. 17

6. 11

7. 2

8. 8

9. 6

10. 3



Fill in the blanks to find the amounts.

Answers

Ex)

1 5

Tens Ones

Ex)

0 4

Tens Ones

1)

1 15

Tens Ones

Ex. 15

Ex. 4

2)

1 4

Tens Ones

1. _____

2. _____

3. _____

4. _____

5. _____

6. _____

7. _____

8. _____

9. _____

10. _____

3)

0 6

Tens Ones

4)

0 1

Tens Ones

5)

0 2

Tens Ones

6)

1 1

Tens Ones

7)

2 7

Tens Ones

8)

1 2

Tens Ones

9)

1 3

Tens Ones

10)

0 15

Tens Ones



Fill in the blanks to find the amounts.

Ex)

1
5

Tens
Ones

Ex)

0
4

Tens
Ones

1)

1
9

Tens
Ones

2)

1
4

Tens
Ones

3)

0
5

Tens
Ones

4)

0
1

Tens
Ones

5)

0
2

Tens
Ones

6)

1
1

Tens
Ones

7)

1
7

Tens
Ones

8)

1
2

Tens
Ones

9)

0
3

Tens
Ones

10)

0
9

Tens
Ones

Answers

Ex. 15

Ex. 4

1. 19

2. 14

3. 5

4. 1

5. 2

6. 11

7. 17

8. 12

9. 3

10. 9



Fill in the blanks to find the amounts.

Answers

Ex)

1 5

Tens Ones

Ex)

0 4

Tens Ones

1)

Tens Ones

2)

Tens Ones

3)

Tens Ones

4)

Tens Ones

5)

Tens Ones

6)

Tens Ones

7)

Tens Ones

8)

Tens Ones

9)

Tens Ones

10)

Tens Ones

Ex. 15

Ex. 4

1. _____

2. _____

3. _____

4. _____

5. _____

6. _____

7. _____

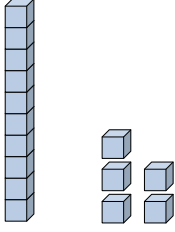
8. _____

9. _____


10. _____



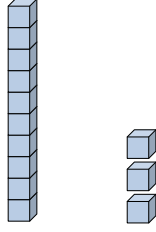
Fill in the blanks to find the amounts.

Ex) 
1 5

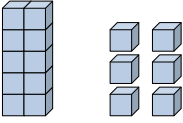
 Tens **Ones**

Ex) 
0 4


 Tens **Ones**

1) 
1 3

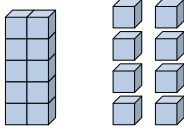
 Tens **Ones**

2) 
1 6

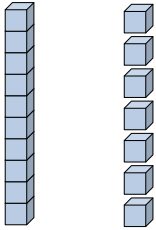
 Tens **Ones**

3) 
0 1

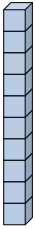
 Tens **Ones**

4) 
1 8


 Tens **Ones**

5) 
1 7

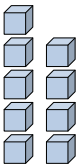
 Tens **Ones**

6) 
1 0

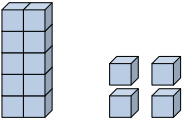
 Tens **Ones**

7) 
0 3


 Tens **Ones**

8) 
0 9

 Tens **Ones**

9) 
1 4

 Tens **Ones**

10) 
0 6

 Tens **Ones**

Answers

Ex. 15

Ex. 4

1. 13

2. 16

3. 1

4. 18

5. 17

6. 10

7. 3

8. 9

9. 14

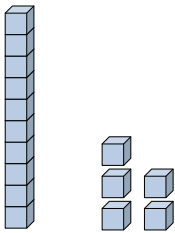
10. 6



Fill in the blanks to find the amounts.

Answers


Ex)



1 5

Tens Ones

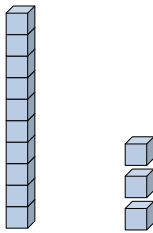
Ex)



0 4

Tens Ones

1)



Tens Ones

Ex. 15

Ex. 4

1. _____

2. _____

3. _____

4. _____

5. _____

6. _____

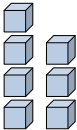
7. _____

8. _____

9. _____

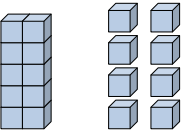
10. _____

2)



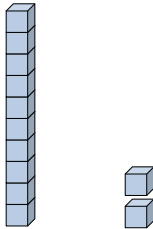
Tens Ones

3)



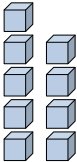
Tens Ones

4)



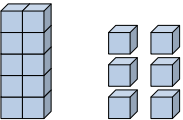
Tens Ones

5)




Tens Ones

6)




Tens Ones

7)



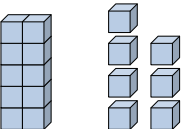
Tens Ones

8)




Tens Ones

9)



Tens Ones

10)

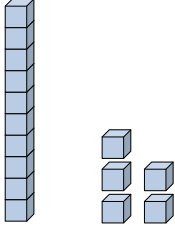


Tens Ones



Fill in the blanks to find the amounts.


Ex)



1 5

Tens Ones

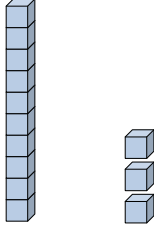
Ex)



0 4

Tens Ones

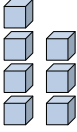
1)



1 3

Tens Ones

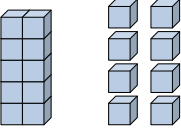
2)



0 7

Tens Ones

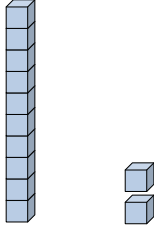
3)



1 8

Tens Ones

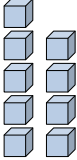
4)



1 2

Tens Ones

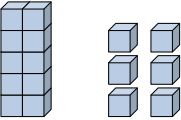
5)



0 9

Tens Ones


6)



1 6

Tens Ones


7)



1 0

Tens Ones

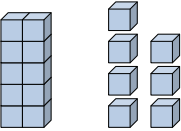
8)



0 6

Tens Ones


9)



1 7

Tens Ones

10)



0 1

Tens Ones

Answers

Ex. 15

Ex. 4

1. 13

2. 7

3. 18

4. 12

5. 9

6. 16

7. 10

8. 6

9. 17

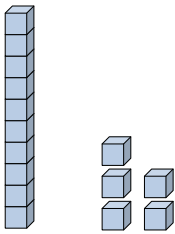
10. 1



Fill in the blanks to find the amounts.

Answers


Ex)



1 5

Tens Ones

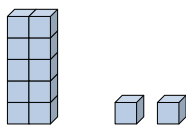
Ex)



0 4

Tens Ones

1)




Tens Ones

Ex. 15

Ex. 4

2)

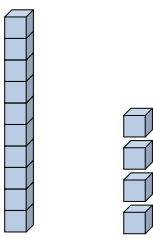


Tens Ones

1. _____

2. _____

3)

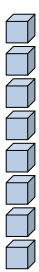


Tens Ones

3. _____

4. _____

4)




Tens Ones

5. _____

6. _____

7. _____

5)



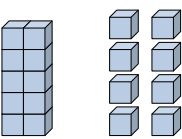
Tens Ones

8. _____

9. _____

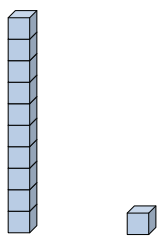
10. _____

6)



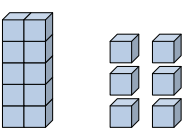
Tens Ones

7)



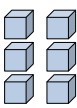
Tens Ones

8)



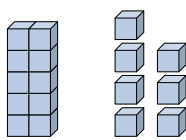
Tens Ones

9)



Tens Ones

10)

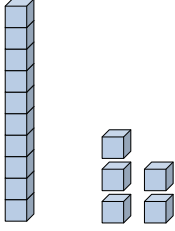


Tens Ones



Fill in the blanks to find the amounts.


Ex)



1 5

Tens Ones

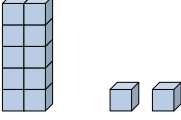
Ex)



0 4

Tens Ones


1)



1 2

Tens Ones

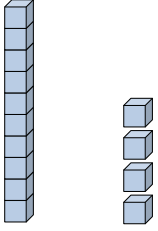
2)



0 3

Tens Ones

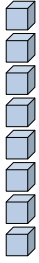
3)



1 4

Tens Ones


4)



0 8

Tens Ones

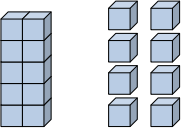
5)



0 2

Tens Ones

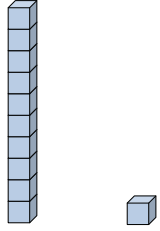
6)



1 8

Tens Ones

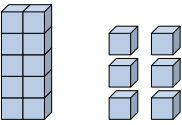
7)



1 1

Tens Ones

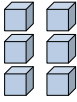
8)



1 6

Tens Ones

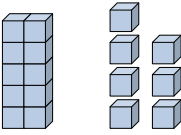
9)



0 6

Tens Ones

10)



1 7

Tens Ones

Answers

Ex. 15

Ex. 4

1. 12

2. 3

3. 14

4. 8

5. 2

6. 18

7. 11

8. 16

9. 6

10. 17



Fill in the blanks to find the amounts.

Answers

Ex)

1 5

Tens Ones

Ex)

0 4

Tens Ones

1)

Tens Ones

Ex. 15

Ex. 4

2)

Tens Ones

3)

Tens Ones

4)

Tens Ones

1. _____

2. _____

3. _____

4. _____

5. _____

6. _____

7. _____

8. _____

9. _____

10. _____

5)

Tens Ones

6)

Tens Ones

7)

Tens Ones

8)

Tens Ones

9)

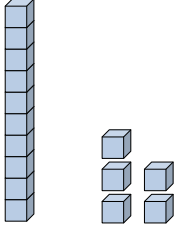
Tens Ones

10)


Tens Ones



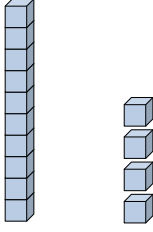
Fill in the blanks to find the amounts.

Ex) 
1 5

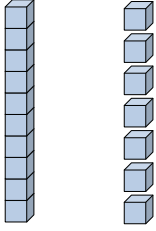
Tens Ones

Ex) 
0 4


Tens Ones

1) 
1 4

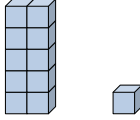
Tens Ones

2) 
1 7


Tens Ones

3) 
1 0

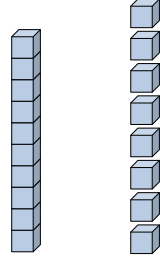
Tens Ones

4) 
1 1

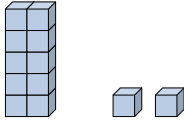
Tens Ones

5) 
0 1

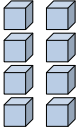
Tens Ones

6) 
1 8

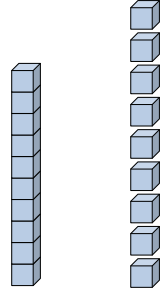
Tens Ones

7) 
1 2


Tens Ones

8) 
0 8

Tens Ones

9) 
1 9

Tens Ones

10) 
0 3

Tens Ones

Answers

Ex. 15

Ex. 4

1. 14

2. 17

3. 10

4. 11

5. 1

6. 18

7. 12

8. 8

9. 19

10. 3