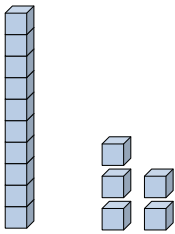




Fill in the blanks to find the amounts.

Answers


Ex)



1 5

Tens Ones

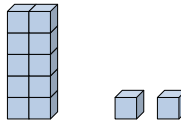
Ex)



0 4

Tens Ones

1)




Tens Ones

Ex. 15

Ex. 4

2)

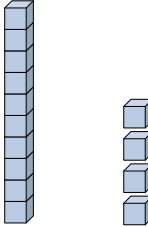


Tens Ones

1. _____

2. _____

3)




Tens Ones

3. _____

4. _____

4)




Tens Ones

5. _____

6. _____

7. _____

5)



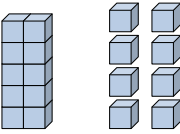
Tens Ones

8. _____

9. _____

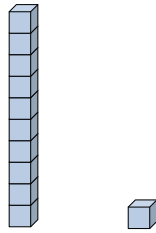
10. _____

6)



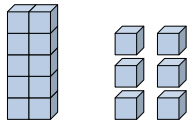
Tens Ones

7)



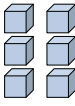
Tens Ones

8)



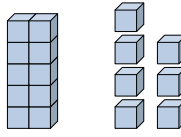
Tens Ones

9)



Tens Ones

10)

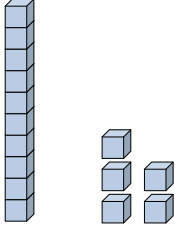


Tens Ones



Fill in the blanks to find the amounts.


Ex)



1 5

Tens Ones

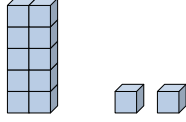
Ex)



0 4

Tens Ones


1)



1 2

Tens Ones

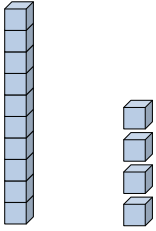
2)



0 3

Tens Ones

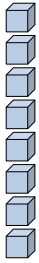
3)



1 4

Tens Ones


4)



0 8

Tens Ones

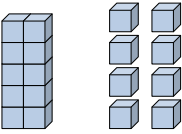
5)



0 2

Tens Ones

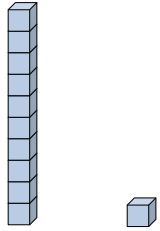
6)



1 8

Tens Ones

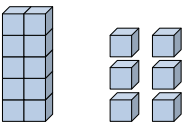
7)



1 1

Tens Ones

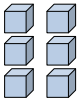
8)



1 6

Tens Ones

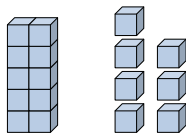
9)



0 6

Tens Ones

10)



1 7

Tens Ones

Answers

Ex. 15

Ex. 4

1. 12

2. 3

3. 14

4. 8

5. 2

6. 18

7. 11

8. 16

9. 6

10. 17