



Fill in the blanks to find the amounts.

Answers

Ex)

1 **5**

Tens **Ones**

Ex)

0 **4**

Tens **Ones**

1)

Tens **Ones**

Ex. 15

Ex. 4

2)

Tens **Ones**

3)

Tens **Ones**

4)

Tens **Ones**

1. _____

2. _____

3. _____

4. _____

5. _____

6. _____

7. _____

8. _____

9. _____

10. _____

5)

Tens **Ones**

6)

Tens **Ones**

7)

Tens **Ones**

8)

Tens **Ones**

9)

Tens **Ones**

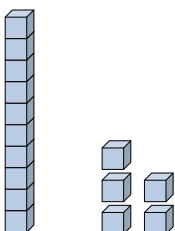
10)

Tens **Ones**


10. _____



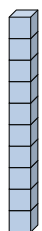
Fill in the blanks to find the amounts.

Ex) 
1 5

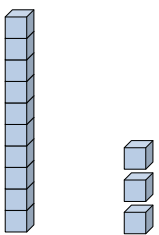
 Tens **Ones**

Ex) 
0 4

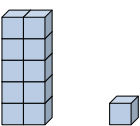
 Tens **Ones**

1) 
1 0

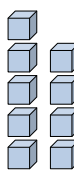
 Tens **Ones**

2) 
1 3

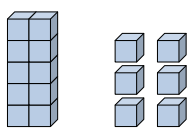
 Tens **Ones**

3) 
1 1


 Tens **Ones**

4) 
0 9

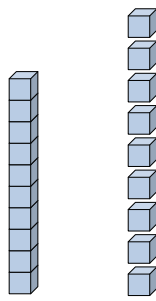
 Tens **Ones**

5) 
1 6

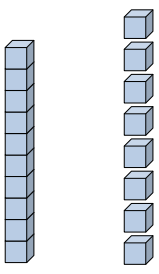
 Tens **Ones**

6) 
0 3


 Tens **Ones**

7) 
1 9

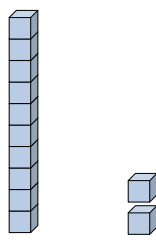
 Tens **Ones**

8) 
1 8

 Tens **Ones**

9) 
0 1

 Tens **Ones**

10) 
1 2

 Tens **Ones**

Answers

Ex. 15

Ex. 4

1. 10

2. 13

3. 11

4. 9

5. 16

6. 3

7. 19

8. 18

9. 1

10. 12