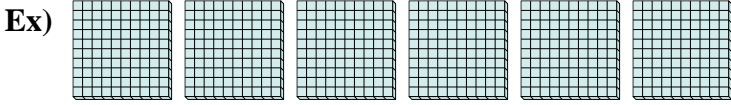
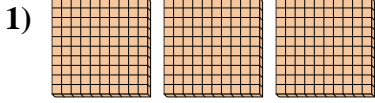




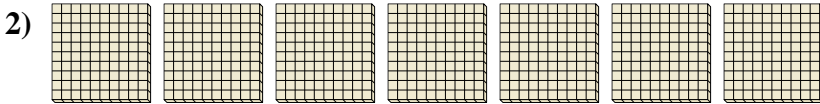
Use the blocks to determine the total quantities.



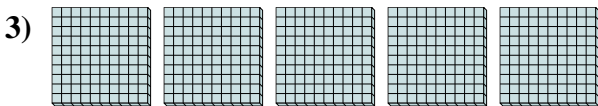
6 Hundreds = 60 Tens = 600 Ones



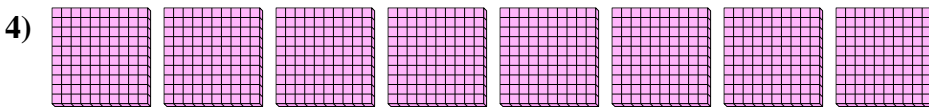
_____ Hundreds = _____ Tens = _____ Ones



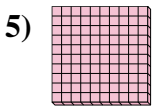
_____ Hundreds = _____ Tens = _____ Ones




_____ Hundreds = _____ Tens = _____ Ones



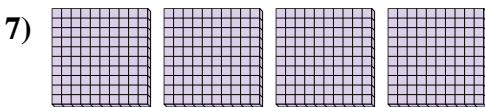
_____ Hundreds = _____ Tens = _____ Ones



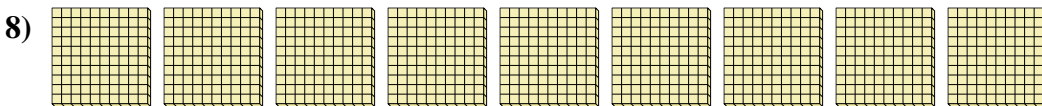
_____ Hundreds = _____ Tens = _____ Ones



_____ Hundreds = _____ Tens = _____ Ones



_____ Hundreds = _____ Tens = _____ Ones



_____ Hundreds = _____ Tens = _____ Ones

Answers

Ex. 6 60 600

1. _____

2. _____

3. _____

4. _____

5. _____

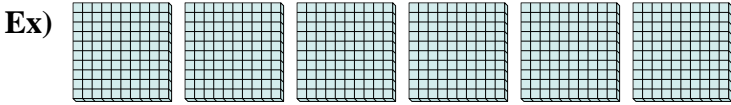
6. _____

7. _____

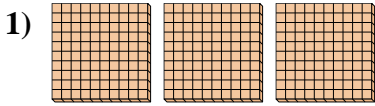
8. _____



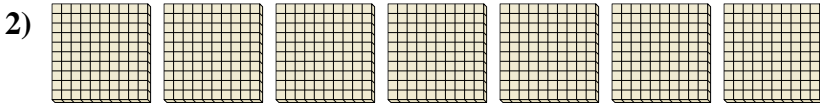
Use the blocks to determine the total quantities.



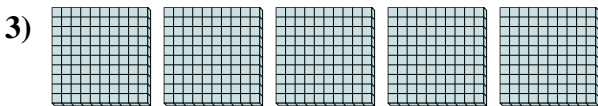
6 Hundreds = 60 Tens = 600 Ones



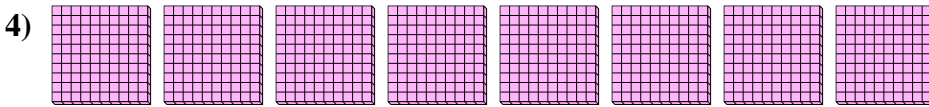
3 Hundreds = 30 Tens = 300 Ones



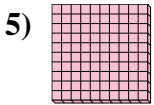
7 Hundreds = 70 Tens = 700 Ones




5 Hundreds = 50 Tens = 500 Ones



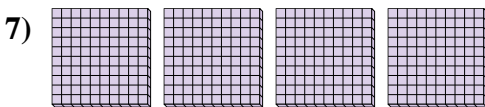
8 Hundreds = 80 Tens = 800 Ones



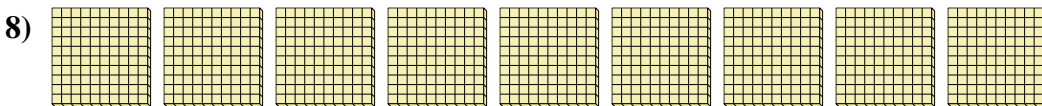
1 Hundreds = 10 Tens = 100 Ones



2 Hundreds = 20 Tens = 200 Ones



4 Hundreds = 40 Tens = 400 Ones



9 Hundreds = 90 Tens = 900 Ones

Answers

Ex. 6 60 600

1. 3 30 300

2. 7 70 700

3. 5 50 500

4. 8 80 800

5. 1 10 100

6. 2 20 200

7. 4 40 400

8. 9 90 900